

Write your name here

Surname

Other names

Pearson Edexcel
International
Advanced Level

Centre Number

--	--	--	--	--	--

Candidate Number

--	--	--	--	--	--

Physics

Advanced

Unit 6: Experimental Physics

Thursday 15 May 2014 – Morning

Time: 1 hour 20 minutes

Paper Reference

WPH06/01

You must have:

Ruler

Total Marks

Instructions

- Use **black** ink or ball-point pen.
- **Fill in the boxes** at the top of this page with your name, centre number and candidate number.
- Answer **all** questions.
- Answer the questions in the spaces provided
– *there may be more space than you need.*

Information

- The total mark for this paper is 40.
- The marks for **each** question are shown in brackets
– *use this as a guide as to how much time to spend on each question.*
- The list of data, formulae and relationships is printed at the end of this booklet.
- Candidates may use a scientific calculator.

Advice

- Read each question carefully before you start to answer it.
- Keep an eye on the time.
- Try to answer every question.
- Check your answers if you have time at the end.

Turn over ►

P43126A

©2014 Pearson Education Ltd.

6/6/6/5/



PEARSON

BLANK PAGE



Answer ALL questions in the spaces provided.

1 (a) A student measures the diameter d of a thin resistance wire.

(i) State why a micrometer screw gauge is the most appropriate instrument to use to measure the diameter of the wire.

(1)

(ii) State **one** technique the student should use to determine a value for the diameter of the wire, which is as accurate as possible.

(1)

(b) The student also measures the length l and the resistance R of the wire. She records the following mean values.

l/cm	89.4
d/mm	0.204 ± 0.003
R/Ω	15.68 ± 0.07

(i) Use these values to calculate the resistivity of the material of the wire in $\Omega \text{ m}$.

(2)

Resistivity = $\Omega \text{ m}$

(ii) Calculate the percentage uncertainty in your value for the resistivity.

You may assume the uncertainty in the value for l is negligible.

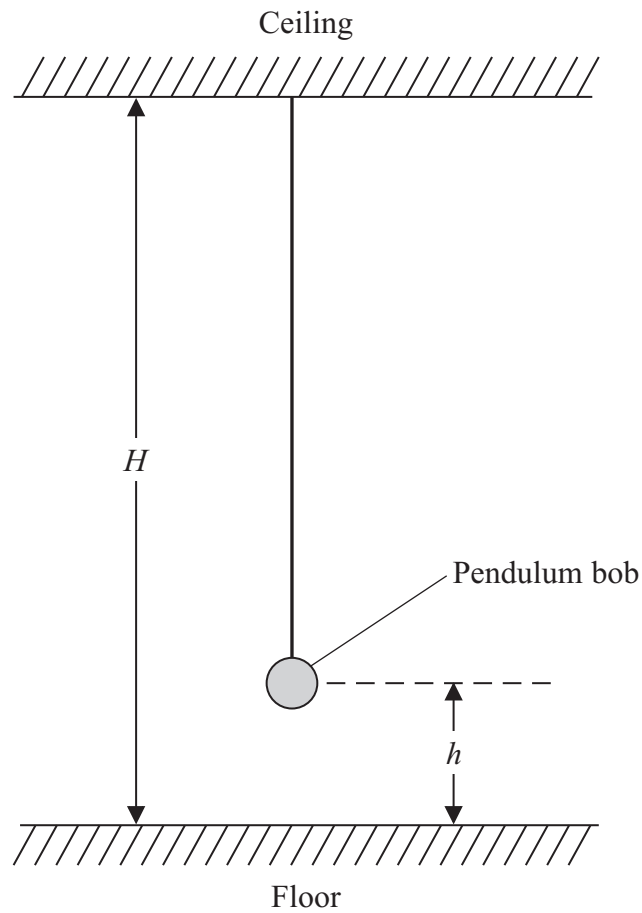
(3)

Percentage uncertainty =

(Total for Question 1 = 7 marks)



- 2 A student has been asked to determine the height H of a ceiling, using a simple pendulum as shown below.



The student measures the distance h from the floor to the centre of the pendulum bob. He determines values of the time period T of the pendulum for different values of h .

- (a) Describe how he should use a metre rule to measure h .

You may add to the diagram if you wish.

(3)

.....

.....

.....

.....

.....

.....



(b) Describe what the student should do to make his values for T as accurate as possible. (3)

.....

.....

.....

.....

.....

.....

.....

.....

(c) The relationship between T and h is given by

$$T^2 = \frac{4\pi^2 H}{g} - \frac{4\pi^2 h}{g}$$

Plotting T^2 against h gives a straight line graph.

(i) State an expression for the gradient of the graph of T^2 against h . (1)

.....

(ii) Show that a value for H can be obtained from the expression

$$H = \frac{\text{intercept}}{\text{gradient}} \quad (2)$$

.....

.....

.....

.....

.....

.....

.....


.....

.....

(Total for Question 2 = 9 marks)



- 3 An experiment is set up to show the diffraction of electrons. A beam of electrons is accelerated by a potential difference V in a vacuum tube and passes through a thin foil target. The diffracted electrons produce a ring pattern as shown below.



By measuring the diameter of the rings it is possible to calculate a value for the wavelength λ of the electrons from

$$V = k \lambda^{-2}$$

where k is a constant.

The following data were recorded for two different values of V .

V/kV	$\lambda/10^{-12} \text{ m}$	
200	2.51	
300	1.95	

- (a) (i) Calculate a value for k . You may add to the table if you wish.

(3)

.....

.....

.....

.....

.....

$k =$

- (ii) Estimate the percentage uncertainty in your value for k .

(1)

.....

.....

Percentage uncertainty =



(b) Theory suggests that

$$k = \frac{h^2}{2em_e}$$

where h is the Planck constant, e is the electron charge and m_e is the electron mass.

(i) Use your value for k to calculate a value for h .

(2)

.....

.....

.....

.....

$h =$

(ii) Estimate the percentage uncertainty in your value for h .

(1)

.....

.....

Percentage uncertainty =

(iii) Comment on the validity of your answer for h .

(2)

.....

.....

.....

.....

.....

.....

.....

.....

(Total for Question 3 = 9 marks)



BLANK PAGE



4 (a) Explain why the resistance of a thermistor decreases as its temperature increases.

(2)

.....

.....

.....

.....

(b) Plan an experiment to determine how the resistance of a thermistor changes as its temperature is increased from 0 °C to 100 °C.

Your plan should include:

(i) the apparatus required, (2)

(ii) how you would obtain the temperature range, (1)

(iii) the precautions you would take to ensure accurate measurements. (2)

You may draw a diagram if you wish.

.....

.....

.....

.....

.....

.....

.....

.....

.....

.....

.....

.....

.....

.....

.....

.....

.....

.....

.....

.....

.....

.....

.....

.....



(c) The resistance R of the thermistor is related to its temperature θ by

$$R = R_0 e^{-\alpha\theta}$$

where R_0 and α are constants.

(i) Show that a graph of $\ln R$ against θ should be a straight line.

(1)

(ii) In an experiment to measure R and θ the following data were recorded.

$\theta / ^\circ\text{C}$	$R / \text{k}\Omega$	
19	6.17	
30	4.35	
42	2.66	
50	1.96	
62	1.25	
70	0.906	

Use the grid opposite to draw a graph of $\ln R$ against θ . Use the column in the table for your processed data.


(4)

(iii) Use your graph to determine a value for α .

(3)

$\alpha =$





(Total for Question 4 = 15 marks)

TOTAL FOR PAPER = 40 MARKS



BLANK PAGE



List of data, formulae and relationships

Acceleration of free fall	$g = 9.81 \text{ m s}^{-2}$	(close to Earth's surface)
Boltzmann constant	$k = 1.38 \times 10^{-23} \text{ J K}^{-1}$	
Coulomb's law constant	$k = 1/4\pi\epsilon_0$ $= 8.99 \times 10^9 \text{ N m}^2 \text{ C}^{-2}$	
Electron charge	$e = -1.60 \times 10^{-19} \text{ C}$	
Electron mass	$m_e = 9.11 \times 10^{-31} \text{ kg}$	
Electronvolt	$1 \text{ eV} = 1.60 \times 10^{-19} \text{ J}$	
Gravitational constant	$G = 6.67 \times 10^{-11} \text{ N m}^2 \text{ kg}^{-2}$	
Gravitational field strength	$g = 9.81 \text{ N kg}^{-1}$	(close to Earth's surface)
Permittivity of free space	$\epsilon_0 = 8.85 \times 10^{-12} \text{ F m}^{-1}$	
Planck constant	$h = 6.63 \times 10^{-34} \text{ J s}$	
Proton mass	$m_p = 1.67 \times 10^{-27} \text{ kg}$	
Speed of light in a vacuum	$c = 3.00 \times 10^8 \text{ m s}^{-1}$	
Stefan-Boltzmann constant	$\sigma = 5.67 \times 10^{-8} \text{ W m}^{-2} \text{ K}^{-4}$	
Unified atomic mass unit	$u = 1.66 \times 10^{-27} \text{ kg}$	

Unit 1

Mechanics

Kinematic equations of motion	$v = u + at$ $s = ut + \frac{1}{2}at^2$ $v^2 = u^2 + 2as$
Forces	$\Sigma F = ma$ $g = F/m$ $W = mg$
Work and energy	$\Delta W = F\Delta s$ $E_k = \frac{1}{2}mv^2$ $\Delta E_{\text{grav}} = mg\Delta h$

Materials

Stokes' law	$F = 6\pi\eta rv$
Hooke's law	$F = k\Delta x$
Density	$\rho = m/V$
Pressure	$p = F/A$
Young modulus	$E = \sigma/\epsilon$ where Stress $\sigma = F/A$ Strain $\epsilon = \Delta x/x$
Elastic strain energy	$E_{\text{el}} = \frac{1}{2}F\Delta x$



Unit 2

Waves

Wave speed $v = f\lambda$

Refractive index ${}_1\mu_2 = \sin i / \sin r = v_1 / v_2$

Electricity

Potential difference $V = W/Q$

Resistance $R = V/I$

Electrical power, energy and efficiency
 $P = VI$
 $P = I^2R$
 $P = V^2/R$
 $W = VI t$

$$\% \text{ efficiency} = \frac{\text{useful energy output}}{\text{total energy input}} \times 100$$

$$\% \text{ efficiency} = \frac{\text{useful power output}}{\text{total power input}} \times 100$$

Resistivity $R = \rho l/A$

Current
 $I = \Delta Q / \Delta t$
 $I = nqvA$

Resistors in series $R = R_1 + R_2 + R_3$

Resistors in parallel $\frac{1}{R} = \frac{1}{R_1} + \frac{1}{R_2} + \frac{1}{R_3}$

Quantum physics

Photon model $E = hf$

Einstein's photoelectric equation
 $hf = \phi + \frac{1}{2}mv_{\max}^2$



Unit 4

Mechanics

Momentum	$p = mv$
Kinetic energy of a non-relativistic particle	$E_k = p^2/2m$
Motion in a circle	$v = \omega r$ $T = 2\pi/\omega$ $F = ma = mv^2/r$ $a = v^2/r$ $a = r\omega^2$

Fields

Coulomb's law	$F = kQ_1Q_2/r^2$ where $k = 1/4\pi\epsilon_0$
Electric field	$E = F/Q$ $E = kQ/r^2$ $E = V/d$
Capacitance	$C = Q/V$
Energy stored in capacitor	$W = \frac{1}{2}QV$
Capacitor discharge	$Q = Q_0 e^{-t/RC}$
In a magnetic field	$F = BIl \sin \theta$ $F = Bqv \sin \theta$ $r = p/BQ$
Faraday's and Lenz's Laws	$\epsilon = -d(N\phi)/dt$

Particle physics

Mass-energy	$\Delta E = c^2 \Delta m$
de Broglie wavelength	$\lambda = h/p$



Unit 5

Energy and matter

Heating $\Delta E = mc\Delta\theta$

Molecular kinetic theory $\frac{1}{2}m\langle c^2 \rangle = \frac{3}{2}kT$

Ideal gas equation $pV = NkT$

Nuclear Physics

Radioactive decay $dN/dt = -\lambda N$

$$\lambda = \ln 2/t_{1/2}$$

$$N = N_0 e^{-\lambda t}$$

Mechanics

Simple harmonic motion

$$a = -\omega^2 x$$
$$a = -A\omega^2 \cos \omega t$$
$$v = -A\omega \sin \omega t$$
$$x = A \cos \omega t$$
$$T = 1/f = 2\pi/\omega$$

Gravitational force $F = Gm_1 m_2 / r^2$

Observing the universe

Radiant energy flux $F = L/4\pi d^2$

Stefan-Boltzmann law

$$L = \sigma T^4 A$$
$$L = 4\pi r^2 \sigma T^4$$

Wien's Law $\lambda_{\max} T = 2.898 \times 10^{-3} \text{ m K}$

Redshift of electromagnetic radiation $z = \Delta\lambda/\lambda \approx \Delta f/f \approx v/c$

Cosmological expansion $v = H_0 d$

