



**Cambridge International Examinations**  
Cambridge International General Certificate of Secondary Education

CANDIDATE  
NAME

--

CENTRE  
NUMBER

--	--	--	--	--

CANDIDATE  
NUMBER

--	--	--	--

\* 0 1 2 3 4 5 6 7 8 9 \*



**CHEMISTRY**

**0620/04**

Paper 4 Theory (Extended)

**For Examination from 2016**

SPECIMEN PAPER

**1 hour 15 minutes**

Candidates answer on the Question Paper.

No Additional Materials are required.

**READ THESE INSTRUCTIONS FIRST**

Write your Centre number, candidate number and name on all the work you hand in.

Write in dark blue or black pen.

You may use an HB pencil for any diagrams, graphs or rough working.

Do not use staples, paper clips, glue or correction fluid.

DO **NOT** WRITE IN ANY BARCODES.

Answer **all** questions.

Electronic calculators may be used.

You may lose marks if you do not show your working or if you do not use appropriate units.

A copy of the Periodic Table is printed on page 20.

At the end of the examination, fasten all your work securely together.

The number of marks is given in brackets [ ] at the end of each question or part question.

The syllabus is accredited for use in England, Wales and Northern Ireland as a Cambridge International Level 1/Level 2 Certificate.

This document consists of **18** printed pages and **2** blank pages.

1 The following table gives information about six substances.

substance	melting point / °C	boiling point / °C	electrical conductivity as a solid	electrical conductivity as a liquid
<b>A</b>	839	1484	good	good
<b>B</b>	-188	-42	poor	poor
<b>C</b>	776	1497	poor	good
<b>D</b>	-117	78	poor	poor
<b>E</b>	1607	2227	poor	poor
<b>F</b>	-5	102	poor	good

(a) Which substance could be a metal?

..... [1]

(b) State **all** the substances that are liquid at room temperature?

..... [1]

(c) Which substance could have a macromolecular structure similar to that of silicon(IV) oxide?

..... [1]

(d) Which substance could be propane?

..... [1]

(e) Which substance could be sodium chloride?

..... [1]

[Total: 5]

2 The table gives the composition of three particles.

particle	number of protons	number of electrons	number of neutrons
<b>A</b>	15	15	16
<b>B</b>	15	18	16
<b>C</b>	15	15	17

(a) What is the evidence in the table for each of the following?

(i) Particle **A** is an atom.

.....  
 ..... [1]

(ii) **A**, **B** and **C** are all particles of the same element.

.....  
 ..... [1]

(iii) Particles **A** and **C** are isotopes of the same element.

.....  
 ..... [2]

(b) (i) What is the electronic structure of particle **A**?

..... [1]

(ii) Is element **A**, a metal or a non-metal? Give a reason for your choice.

.....  
 ..... [1]

[Total: 6]

3 Kinetic theory explains the properties of matter in terms of the arrangement and movement of particles.

(a) Nitrogen is a gas at room temperature. Nitrogen molecules,  $N_2$ , are spread far apart and move in a random manner at high speed.

(i) Draw the electronic structure of a nitrogen molecule.  
Show only the outer electron shells.

[2]

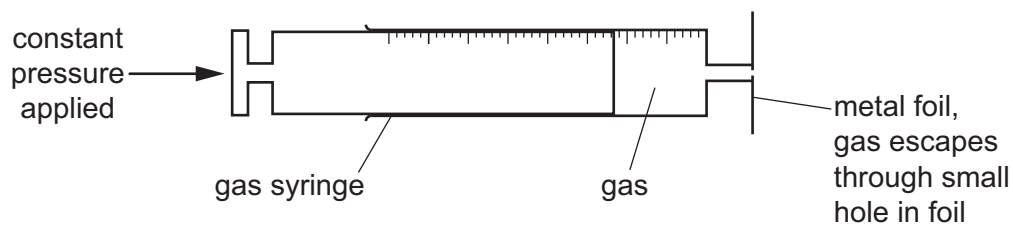
(ii) Compare the movement and arrangement of the molecules in solid nitrogen to those in nitrogen gas.

.....  
.....  
.....  
..... [3]

(b) A sealed container contains nitrogen gas. The pressure of the gas is due to the molecules of the gas hitting the walls of the container.  
Use the kinetic theory to explain why the pressure inside the container increases when the temperature is increased.

.....  
..... [2]

The following apparatus can be used to measure the rate of diffusion of a gas.



The following results were obtained.

gas	temperature / °C	rate of diffusion in cm <sup>3</sup> /min
nitrogen	25	1.00
chlorine	25	0.63
nitrogen	50	1.05

(c) (i) Explain why nitrogen gas diffuses faster than chlorine gas.

.....  
 ..... [2]

(ii) Explain why the nitrogen gas diffuses faster at the higher temperature.

..... [1]

[Total: 10]

4 Chromium is a transition element.

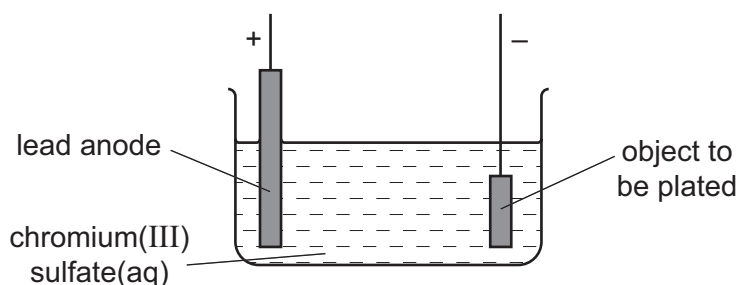
(a) (i) State **two** differences in the physical properties of chromium and sodium.

.....  
 ..... [2]

(ii) State **two** differences in the chemical properties of chromium and sodium.

.....  
 .....  
 ..... [2]

(b) Chromium is used to electroplate steel objects. The diagram shows how this could be done.



(i) Give **two** reasons why steel objects are plated with chromium.

.....  
 ..... [2]

(ii) The formula of the chromium(III) ion is  $\text{Cr}^{3+}$  and of the sulfate ion is  $\text{SO}_4^{2-}$ . Give the formula of chromium(III) sulfate.

..... [1]

(iii) Write the ionic half-equation for the reaction at the negative electrode (cathode).

..... [2]

(iv) A colourless gas, which relights a glowing splint, is formed at the positive electrode (anode).

State the name of this gas.

..... [1]

- (v) During electroplating, it is necessary to add more chromium(III) sulfate but during copper plating using a copper anode, it is not necessary to add more copper(II) sulfate.

Explain this difference.

.....

.....

..... [2]

[Total: 12]





**BLANK PAGE**

6 Soluble salts can be made using a base and an acid.

(a) Complete this method of preparing dry crystals of the soluble salt cobalt(II) chloride-6-water from the insoluble base cobalt(II) carbonate.

**step 1**

Add an excess of cobalt(II) carbonate to hot dilute hydrochloric acid.

**step 2**

.....  
.....

**step 3**

.....  
.....

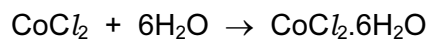
**step 4**

.....  
.....

[4]

- (b) (i) 5.95 g of cobalt(II) carbonate were added to 40 cm<sup>3</sup> of hydrochloric acid, concentration 2.0 mol/dm<sup>3</sup>.

Calculate the maximum yield of cobalt(II) chloride-6-water and show that the cobalt(II) carbonate was in excess.



**maximum yield:**

number of moles of HCl used = .....

number of moles of CoCl<sub>2</sub> formed = .....

number of moles of CoCl<sub>2</sub>·6H<sub>2</sub>O formed = .....

mass of one mole of CoCl<sub>2</sub>·6H<sub>2</sub>O = 238 g

maximum yield of CoCl<sub>2</sub>·6H<sub>2</sub>O = ..... g

**to show that cobalt(II) carbonate is in excess:**

number of moles of HCl used = ..... (use your value from above)

mass of one mole of CoCO<sub>3</sub> = 119 g

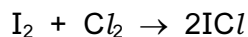
number of moles of CoCO<sub>3</sub> in 5.95 g of cobalt(II) carbonate = ..... [5]

- (ii) Explain how these calculations show that cobalt(II) carbonate is in excess.

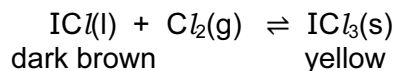
..... [1]

[Total: 10]

- 7 Iodine reacts with chlorine to form dark brown iodine monochloride.



This reacts with more chlorine to give yellow iodine trichloride.  
An equilibrium forms between these iodine chlorides.



- (a) What do you understand by the term *equilibrium*?

.....  
 .....  
 ..... [2]

- (b) When the equilibrium mixture is heated, it becomes a darker brown colour.  
Suggest if the reverse reaction is endothermic or exothermic. Give a reason for your choice.

.....  
 .....  
 ..... [1]

- (c) The pressure on the equilibrium mixture is decreased.

- (i) How would this affect the position of equilibrium? Give a reason for your choice.

It would move to the .....

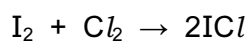
reason .....

..... [1]

- (ii) Describe what you would observe.

.....  
 ..... [1]

- (d) Calculate the overall energy change for the reaction between iodine and chlorine using the bond energy values shown.



Bond	Energy / kJ per mol
I–I	151
Cl–Cl	242
I–Cl	208

Show your working.

[3]

- (e) Draw a labelled energy level diagram for the reaction between iodine and chlorine using the information in (d).

[2]

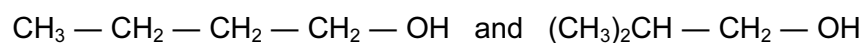
[Total: 10]

8 The alcohols form an homologous series.

(a) Give **three** characteristics of an homologous series.

.....  
.....  
.....  
..... [3]

(b) The following two alcohols are members of an homologous series and they are isomers.



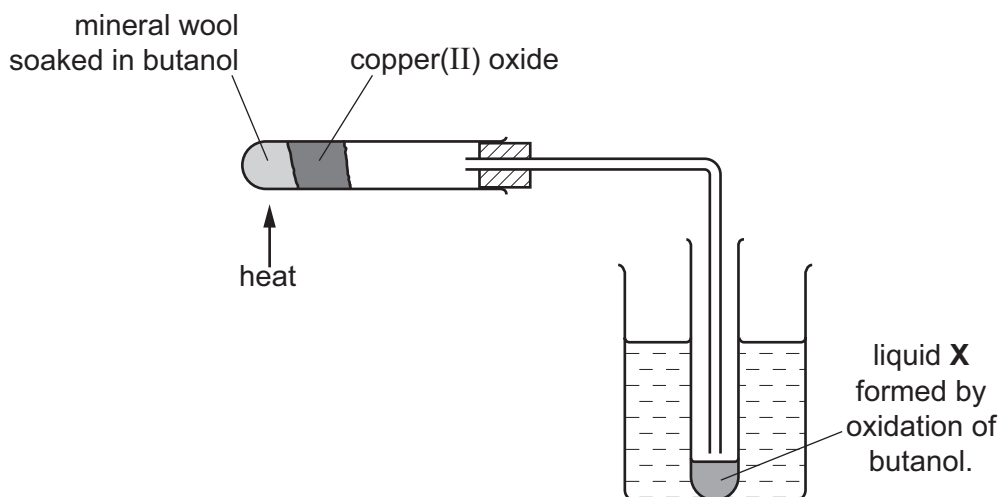
(i) Explain why they are isomers.

.....  
.....  
..... [2]

(ii) Deduce the structural formula of another alcohol which is also an isomer of these alcohols.

[1]

(c) Copper(II) oxide can oxidise butanol to liquid **X**, whose pH is 4.



(i) Give the name of another reagent which can oxidise butanol.

..... [1]

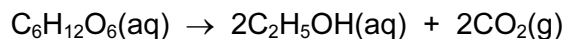
(ii) Which homologous series does liquid **X** belong to?

..... [1]

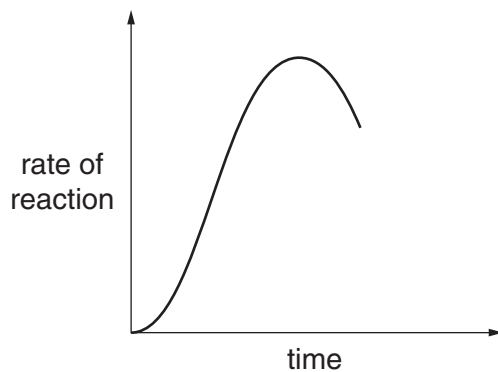
(iii) State the formula of liquid **X**.

..... [1]

(d) The alcohol ethanol can be made by fermentation. Yeast is added to aqueous glucose.



Carbon dioxide is given off and the mixture becomes warm, as the reaction is exothermic. The graph shows how the rate of reaction varies over several days.



(i) Suggest a method of measuring the rate of this reaction.

.....  
 ..... [2]

(ii) Why does the rate initially increase?

.....  
 ..... [1]

(iii) Suggest **two** reasons why the rate eventually decreases.

.....  
 ..... [2]

[Total: 14]



**BLANK PAGE**

9 There are two types of polymerisation, addition and condensation.

(a) Explain the difference between these two types of polymerisation.

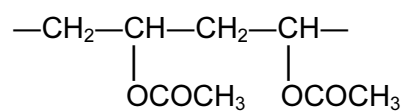
.....  
.....  
..... [2]

(b) Some plastics, formed by polymerisation, are non-biodegradable.

Describe **two** pollution problems that are caused by non-biodegradable plastics.

.....  
.....  
.....  
..... [2]

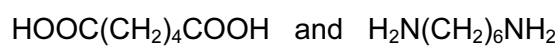
- (c) The polymer known as PVA is used in paints and adhesives. Its structural formula is shown below.



Deduce the structural formula of its monomer.

[1]

- (d) A condensation polymer can be made from the following monomers.



Draw the structural formula of this polymer.

[3]

[Total: 8]

Group																																																																																																																																																																																																																																																																																																																																																																																																													
I	II	III	IV	V	VI	VII	VIII																																																																																																																																																																																																																																																																																																																																																																																																						
		1 H hydrogen 1															2 He helium 4																																																																																																																																																																																																																																																																																																																																																																																												
3 Li lithium 7	4 Be beryllium 9	<b>Key</b> atomic number atomic symbol name relative atomic mass																5 B boron 11	6 C carbon 12	7 N nitrogen 14	8 O oxygen 16	9 F fluorine 19	10 Ne neon 20																																																																																																																																																																																																																																																																																																																																																																																						
11 Na sodium 23	12 Mg magnesium 24																	13 Al aluminium 27	14 Si silicon 28	15 P phosphorus 31	16 S sulfur 32	17 Cl chlorine 35.5	18 Ar argon 40	19 K potassium 39	20 Ca calcium 40	21 Sc scandium 45	22 Ti titanium 48	23 V vanadium 51	24 Cr chromium 52	25 Mn manganese 55	26 Fe iron 56	27 Co cobalt 59	28 Ni nickel 59	29 Cu copper 64	30 Zn zinc 65	31 Ga gallium 70	32 Ge germanium 73	33 As arsenic 75	34 Se selenium 79	35 Br bromine 80	36 Kr krypton 84																																																																																																																																																																																																																																																																																																																																																																				
37 Rb rubidium 85	38 Sr strontium 88	39 Y yttrium 89	40 Zr zirconium 91	41 Nb niobium 93	42 Mo molybdenum 96	43 Tc technetium —	44 Ru ruthenium 101	45 Rh rhodium 103	46 Pd palladium 106	47 Ag silver 108	48 Cd cadmium 112	49 In indium 115	50 Sn tin 117	51 Sb antimony 122	52 Te tellurium 128	53 I iodine 127	54 Xe xenon 131	55 Cs caesium 133	56 Ba barium 137	57–71 lanthanoids —	72 Hf hafnium 178	73 Ta tantalum 181	74 W tungsten 184	75 Re rhenium 186	76 Os osmium 190	77 Ir iridium 192	78 Pt platinum 195	79 Au gold 197	80 Hg mercury 201	81 Tl thallium 204	82 Pb lead 207	83 Bi bismuth 209	84 Po polonium —	85 At astatine —	86 Rn radon —																																																																																																																																																																																																																																																																																																																																																																										
87 Fr francium —	88 Ra radium —	89–103 actinoids —	104 Rf rutherfordium —	105 Db dubnium —	106 Sg seaborgium —	107 Bh bohrium —	108 Hs hassium —	109 Mt meitnerium —	110 Ds darmstadtium —	111 Rg roentgenium —	112 Cn copernicium —	114 Fl flerovium —	116 Lv livermorium —	117 Ts tennessine —	118 Og oganesson —	119 Uue unbinilium —	120 Uub unbinilium —	121 Uut ununilium —	122 Uuq ununilium —	123 Uup ununilium —	124 Uuq ununilium —	125 Uub unbinilium —	126 Uut ununilium —	127 Uuq ununilium —	128 Uup ununilium —	129 Uuq ununilium —	130 Uub unbinilium —	131 Uut ununilium —	132 Uuq ununilium —	133 Uup ununilium —	134 Uuq ununilium —	135 Uub unbinilium —	136 Uut ununilium —	137 Uuq ununilium —	138 Uup ununilium —	139 Uuq ununilium —	140 Uub unbinilium —	141 Uut ununilium —	142 Uuq ununilium —	143 Uub unbinilium —	144 Uut ununilium —	145 Uuq ununilium —	146 Uub unbinilium —	147 Uut ununilium —	148 Uuq ununilium —	149 Uub unbinilium —	150 Uut ununilium —	151 Uuq ununilium —	152 Uub unbinilium —	153 Uut ununilium —	154 Uuq ununilium —	155 Uub unbinilium —	156 Uut ununilium —	157 Uuq ununilium —	158 Uub unbinilium —	159 Uut ununilium —	160 Uuq ununilium —	161 Uub unbinilium —	162 Uut ununilium —	163 Uuq ununilium —	164 Uub unbinilium —	165 Uut ununilium —	166 Uuq ununilium —	167 Uub unbinilium —	168 Uut ununilium —	169 Uuq ununilium —	170 Uub unbinilium —	171 Uut ununilium —	172 Uuq ununilium —	173 Uub unbinilium —	174 Uut ununilium —	175 Uuq ununilium —	176 Uub unbinilium —	177 Uut ununilium —	178 Uuq ununilium —	179 Uub unbinilium —	180 Uut ununilium —	181 Uuq ununilium —	182 Uub unbinilium —	183 Uut ununilium —	184 Uuq ununilium —	185 Uub unbinilium —	186 Uut ununilium —	187 Uuq ununilium —	188 Uub unbinilium —	189 Uut ununilium —	190 Uuq ununilium —	191 Uub unbinilium —	192 Uut ununilium —	193 Uuq ununilium —	194 Uub unbinilium —	195 Uut ununilium —	196 Uuq ununilium —	197 Uub unbinilium —	198 Uut ununilium —	199 Uuq ununilium —	200 Uub unbinilium —	201 Uut ununilium —	202 Uuq ununilium —	203 Uub unbinilium —	204 Uut ununilium —	205 Uuq ununilium —	206 Uub unbinilium —	207 Uut ununilium —	208 Uuq ununilium —	209 Uub unbinilium —	210 Uut ununilium —	211 Uuq ununilium —	212 Uub unbinilium —	213 Uut ununilium —	214 Uuq ununilium —	215 Uub unbinilium —	216 Uut ununilium —	217 Uuq ununilium —	218 Uub unbinilium —	219 Uut ununilium —	220 Uuq ununilium —	221 Uub unbinilium —	222 Uut ununilium —	223 Uuq ununilium —	224 Uub unbinilium —	225 Uut ununilium —	226 Uuq ununilium —	227 Uub unbinilium —	228 Uut ununilium —	229 Uuq ununilium —	230 Uub unbinilium —	231 Uut ununilium —	232 Uuq ununilium —	233 Uub unbinilium —	234 Uut ununilium —	235 Uuq ununilium —	236 Uub unbinilium —	237 Uut ununilium —	238 Uuq ununilium —	239 Uub unbinilium —	240 Uut ununilium —	241 Uuq ununilium —	242 Uub unbinilium —	243 Uut ununilium —	244 Uuq ununilium —	245 Uub unbinilium —	246 Uut ununilium —	247 Uuq ununilium —	248 Uub unbinilium —	249 Uut ununilium —	250 Uuq ununilium —	251 Uub unbinilium —	252 Uut ununilium —	253 Uuq ununilium —	254 Uub unbinilium —	255 Uut ununilium —	256 Uuq ununilium —	257 Uub unbinilium —	258 Uut ununilium —	259 Uuq ununilium —	260 Uub unbinilium —	261 Uut ununilium —	262 Uuq ununilium —	263 Uub unbinilium —	264 Uut ununilium —	265 Uuq ununilium —	266 Uub unbinilium —	267 Uut ununilium —	268 Uuq ununilium —	269 Uub unbinilium —	270 Uut ununilium —	271 Uuq ununilium —	272 Uub unbinilium —	273 Uut ununilium —	274 Uuq ununilium —	275 Uub unbinilium —	276 Uut ununilium —	277 Uuq ununilium —	278 Uub unbinilium —	279 Uut ununilium —	280 Uuq ununilium —	281 Uub unbinilium —	282 Uut ununilium —	283 Uuq ununilium —	284 Uub unbinilium —	285 Uut ununilium —	286 Uuq ununilium —	287 Uub unbinilium —	288 Uut ununilium —	289 Uuq ununilium —	290 Uub unbinilium —	291 Uut ununilium —	292 Uuq ununilium —	293 Uub unbinilium —	294 Uut ununilium —	295 Uuq ununilium —	296 Uub unbinilium —	297 Uut ununilium —	298 Uuq ununilium —	299 Uub unbinilium —	300 Uut ununilium —	301 Uuq ununilium —	302 Uub unbinilium —	303 Uut ununilium —	304 Uuq ununilium —	305 Uub unbinilium —	306 Uut ununilium —	307 Uuq ununilium —	308 Uub unbinilium —	309 Uut ununilium —	310 Uuq ununilium —	311 Uub unbinilium —	312 Uut ununilium —	313 Uuq ununilium —	314 Uub unbinilium —	315 Uut ununilium —	316 Uuq ununilium —	317 Uub unbinilium —	318 Uut ununilium —	319 Uuq ununilium —	320 Uub unbinilium —	321 Uut ununilium —	322 Uuq ununilium —	323 Uub unbinilium —	324 Uut ununilium —	325 Uuq ununilium —	326 Uub unbinilium —	327 Uut ununilium —	328 Uuq ununilium —	329 Uub unbinilium —	330 Uut ununilium —	331 Uuq ununilium —	332 Uub unbinilium —	333 Uut ununilium —	334 Uuq ununilium —	335 Uub unbinilium —	336 Uut ununilium —	337 Uuq ununilium —	338 Uub unbinilium —	339 Uut ununilium —	340 Uuq ununilium —	341 Uub unbinilium —	342 Uut ununilium —	343 Uuq ununilium —	344 Uub unbinilium —	345 Uut ununilium —	346 Uuq ununilium —	347 Uub unbinilium —	348 Uut ununilium —	349 Uuq ununilium —	350 Uub unbinilium —	351 Uut ununilium —	352 Uuq ununilium —	353 Uub unbinilium —	354 Uut ununilium —	355 Uuq ununilium —	356 Uub unbinilium —	357 Uut ununilium —	358 Uuq ununilium —	359 Uub unbinilium —	360 Uut ununilium —	361 Uuq ununilium —	362 Uub unbinilium —	363 Uut ununilium —	364 Uuq ununilium —	365 Uub unbinilium —	366 Uut ununilium —	367 Uuq ununilium —	368 Uub unbinilium —	369 Uut ununilium —	370 Uuq ununilium —	371 Uub unbinilium —	372 Uut ununilium —	373 Uuq ununilium —	374 Uub unbinilium —	375 Uut ununilium —	376 Uuq ununilium —	377 Uub unbinilium —	378 Uut ununilium —	379 Uuq ununilium —	380 Uub unbinilium —	381 Uut ununilium —	382 Uuq ununilium —	383 Uub unbinilium —	384 Uut ununilium —	385 Uuq ununilium —	386 Uub unbinilium —	387 Uut ununilium —	388 Uuq ununilium —	389 Uub unbinilium —	390 Uut ununilium —	391 Uuq ununilium —	392 Uub unbinilium —	393 Uut ununilium —	394 Uuq ununilium —	395 Uub unbinilium —	396 Uut ununilium —	397 Uuq ununilium —	398 Uub unbinilium —	399 Uut ununilium —	400 Uuq ununilium —	401 Uub unbinilium —	402 Uut ununilium —	403 Uuq ununilium —	404 Uub unbinilium —	405 Uut ununilium —	406 Uuq ununilium —	407 Uub unbinilium —	408 Uut ununilium —	409 Uuq ununilium —	410 Uub unbinilium —	411 Uut ununilium —	412 Uuq ununilium —	413 Uub unbinilium —	414 Uut ununilium —	415 Uuq ununilium —	416 Uub unbinilium —	417 Uut ununilium —	418 Uuq ununilium —	419 Uub unbinilium —	420 Uut ununilium —	421 Uuq ununilium —	422 Uub unbinilium —	423 Uut ununilium —	424 Uuq ununilium —	425 Uub unbinilium —	426 Uut ununilium —	427 Uuq ununilium —	428 Uub unbinilium —	429 Uut ununilium —	430 Uuq ununilium —	431 Uub unbinilium —	432 Uut ununilium —	433 Uuq ununilium —	434 Uub unbinilium —	435 Uut ununilium —	436 Uuq ununilium —	437 Uub unbinilium —	438 Uut ununilium —	439 Uuq ununilium —	440 Uub unbinilium —	441 Uut ununilium —	442 Uuq ununilium —	443 Uub unbinilium —	444 Uut ununilium —	445 Uuq ununilium —	446 Uub unbinilium —	447 Uut ununilium —	448 Uuq ununilium —	449 Uub unbinilium —	450 Uut ununilium —	451 Uuq ununilium —	452 Uub unbinilium —	453 Uut ununilium —	454 Uuq ununilium —	455 Uub unbinilium —	456 Uut ununilium —	457 Uuq ununilium —	458 Uub unbinilium —	459 Uut ununilium —	460 Uuq ununilium —	461 Uub unbinilium —	462 Uut ununilium —	463 Uuq ununilium —	464 Uub unbinilium —	465 Uut ununilium —	466 Uuq ununilium —	467 Uub unbinilium —	468 Uut ununilium —	469 Uuq ununilium —	470 Uub unbinilium —	471 Uut ununilium —	472 Uuq ununilium —	473 Uub unbinilium —	474 Uut ununilium —	475 Uuq ununilium —	476 Uub unbinilium —	477 Uut ununilium —	478 Uuq ununilium —	479 Uub unbinilium —	480 Uut ununilium —	481 Uuq ununilium —	482 Uub unbinilium —	483 Uut ununilium —	484 Uuq ununilium —	485 Uub unbinilium —	486 Uut ununilium —	487 Uuq ununilium —	488 Uub unbinilium —	489 Uut ununilium —	490 Uuq ununilium —	491 Uub unbinilium —	492 Uut ununilium —	493 Uuq ununilium —	494 Uub unbinilium —	495 Uut ununilium —	496 Uuq ununilium —	497 Uub unbinilium —	498 Uut ununilium —	499 Uuq ununilium —	500 Uub unbinilium —

The volume of one mole of any gas is 24 dm<sup>3</sup> at room temperature and pressure (r.t.p.)

Permission to reproduce items where third-party owned material protected by copyright is included has been sought and cleared where possible. Every reasonable effort has been made by the publisher (UCLES) to trace copyright holders, but if any items requiring clearance have unwittingly been included, the publisher will be pleased to make amends at the earliest possible opportunity.

Cambridge International Examinations is part of the Cambridge Assessment Group. Cambridge Assessment is the brand name of University of Cambridge Local Examinations Syndicate (UCLES), which is itself a department of the University of Cambridge.