



\* 0 1 2 3 4 5 6 7 8 9 \*

---

**CHEMISTRY**

**0620/02**

Paper 2 Multiple Choice (Extended)

**For Examination from 2016**

SPECIMEN PAPER

**45 minutes**

Additional Materials:      Multiple Choice Answer Sheet  
   Soft clean eraser  
   Soft pencil (type B or HB is recommended)

---

**READ THESE INSTRUCTIONS FIRST**

Write in soft pencil.

Do not use staples, paper clips, glue or correction fluid.

Write your name, Centre number and candidate number on the Answer Sheet in the spaces provided unless this has been done for you.

**DO NOT WRITE IN ANY BARCODES.**

There are **forty** questions on this paper. Answer **all** questions. For each question there are four possible answers **A, B, C** and **D**.

Choose the **one** you consider correct and record your choice in **soft pencil** on the separate Answer Sheet.

**Read the instructions on the Answer Sheet very carefully.**

Each correct answer will score one mark. A mark will not be deducted for a wrong answer.

Any rough working should be done in this booklet.

A copy of the Periodic Table is printed on page 18.

Electronic calculators may be used.

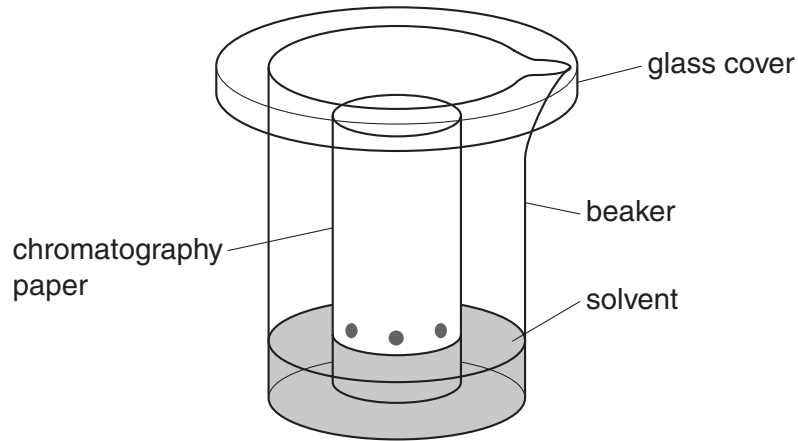
---

The syllabus is accredited for use in England, Wales and Northern Ireland as a Cambridge International Level 1/Level 2 Certificate.

---

This document consists of **18** printed pages.

- 1 Amino acids are colourless and can be separated and identified by chromatography.



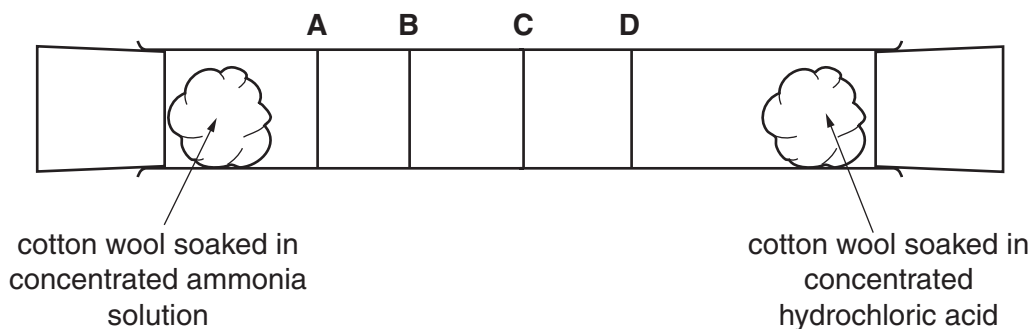
What additional apparatus is required to identify the amino acids present in a mixture?

- A a locating agent
  - B a ruler
  - C a ruler and a locating agent
  - D neither a ruler or a locating agent
- 2 The diagram shows the diffusion of hydrogen chloride and ammonia in a glass tube.

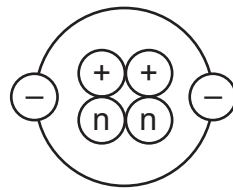
The gases are given off by the solutions at each end of the tube.

When hydrogen chloride and ammonia mix they produce a white solid, ammonium chloride.

Which line shows where the white solid is formed?



3 The diagram shows the structure of an atom.



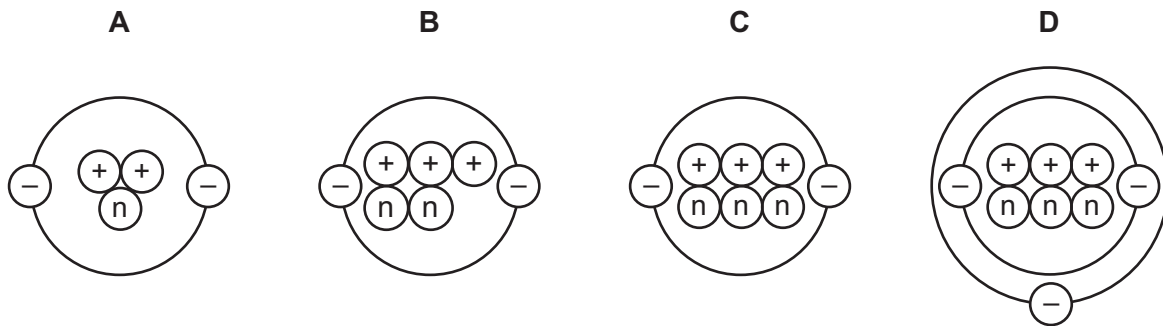
key

(+) = proton

(n) = neutron

(-) = electron

Which diagram shows the structure of an isotope of this atom?



4 The table shows the structure of different atoms and ions.

particle	proton number	nucleon number	number of protons	number of neutrons	number of electrons
Mg	12	24	12	W	12
Mg <sup>2+</sup>	X	24	12	12	10
F	9	19	9	Y	9
F <sup>-</sup>	9	19	9	10	Z

What are the values of W, X, Y and Z?

	W	X	Y	Z
<b>A</b>	10	10	9	9
<b>B</b>	10	12	10	9
<b>C</b>	12	10	9	10
<b>D</b>	12	12	10	10

5 Iron is a metal. The structure of iron is described as a lattice of positive ions in a sea of electrons.

Which of the following statements about iron are correct?

- 1 iron conducts electricity because the electrons are free to move
- 2 iron has a high melting point due to the strong covalent bonds
- 3 iron is an alloy
- 4 iron is malleable because the layers of atoms can slide over one another

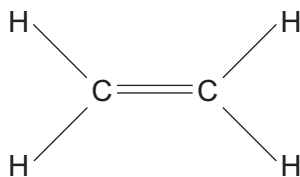
- A** 1 only  
**B** 1 and 3  
**C** 1 and 4  
**D** 2, 3 and 4

6 Which two elements react together to form an ionic compound?

element	electronic structure
R	2,4
T	2,8
X	2,8,1
Z	2,8,7

- A** R and T      **B** T and X      **C** X and Z      **D** Z and R

7 Ethene is an unsaturated hydrocarbon.



Which description of the bonding in ethene is correct?

- A** All atoms in the molecule have a share of eight electrons.  
**B** Each carbon atom shares two of its electrons with hydrogen atoms and two of its electrons with a carbon atom.  
**C** Each carbon atom shares two of its electrons with hydrogen atoms and one of its electrons with a carbon atom.  
**D** The two carbon atoms share a total of six electrons with other atoms.

8 What is the relative molecular mass,  $M_r$ , of butanol?

- A** 15      **B** 37      **C** 74      **D** 148

- 9 The chemical formulae of two substances, W and X, are given.



Which statements are correct?

- 1 W and X contain the same amount of oxygen.
- 2 W contains three times as much silicon as X.
- 3 X contains twice as much aluminium as W.

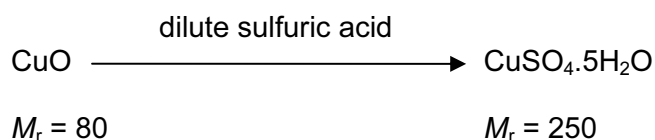
- A** 1 and 2      **B** 1 and 3      **C** 2 and 3      **D** 1, 2 and 3

- 10 What is the concentration of a solution containing 1.0g of sodium hydroxide in 250cm<sup>3</sup> of solution?

- A** 0.025 mol/dm<sup>3</sup>  
**B** 0.10 mol/dm<sup>3</sup>  
**C** 0.25 mol/dm<sup>3</sup>  
**D** 1.0 mol/dm<sup>3</sup>

- 11 Four students prepared hydrated copper(II) sulfate by adding an excess of dilute sulfuric acid to copper(II) oxide.

Each student used a different mass of copper(II) oxide.




After the copper(II) sulfate had crystallised the students dried and weighed the crystals.

Which student produced the highest percentage yield of hydrated copper(II) sulfate?

	mass of copper(II) oxide used / g	mass of crystals produced / g
<b>A</b>	4.0	11.5
<b>B</b>	8.0	23.5
<b>C</b>	12.0	35.0
<b>D</b>	16.0	46.5

- 12 20 cm<sup>3</sup> of ethyne, C<sub>2</sub>H<sub>2</sub>, are reacted with 500 cm<sup>3</sup> of oxygen.

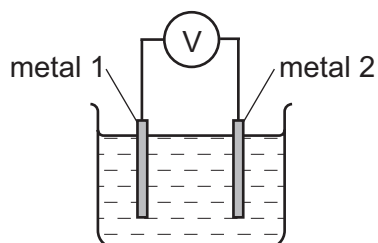
The equation for the reaction is



What is the total volume of gas remaining at the end of the reaction?

(all volumes are measured at room temperature and pressure)

- A 400 cm<sup>3</sup>  
 B 450 cm<sup>3</sup>  
 C 490 cm<sup>3</sup>  
 D 520 cm<sup>3</sup>
- 13 Different metals were tested using the apparatus shown.



Which pair of metals would produce the largest voltage?

- A copper and silver  
 B magnesium and silver  
 C magnesium and zinc  
 D zinc and copper
- 14 Three electrolysis cells are set up. Each cell has inert electrodes.

The electrolytes are listed below.

cell 1 aqueous sodium chloride

cell 2 dilute sulfuric acid

cell 3 molten lead(II) bromide

In which of these cells is a gas formed at **both** electrodes?

- A 1 and 2      B 1 and 3      C 2 only      D 3 only

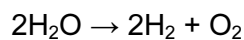
15 The statements refer to the electrolysis of concentrated copper(II) chloride solution.

- 1 Electrons are transferred from the cathode to the copper(II) ions.
- 2 Electrons move around the circuit from the cathode to the anode.
- 3 Chloride ions are attracted to the anode.
- 4 Hydroxide ions transfer electrons to the cathode.

Which statements about the electrolysis of concentrated copper(II) chloride are correct?

- A** 1 and 3  
**B** 1 and 4  
**C** 2 and 3  
**D** 2 and 4

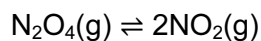
16 Water can be used to produce hydrogen gas.



Which row describes bond breaking in the reactant?

<b>A</b>	endothermic	heat absorbed
<b>B</b>	endothermic	heat released
<b>C</b>	exothermic	heat absorbed
<b>D</b>	exothermic	heat released

17 Dinitrogen tetroxide,  $\text{N}_2\text{O}_4$ , breaks down into nitrogen dioxide,  $\text{NO}_2$ .

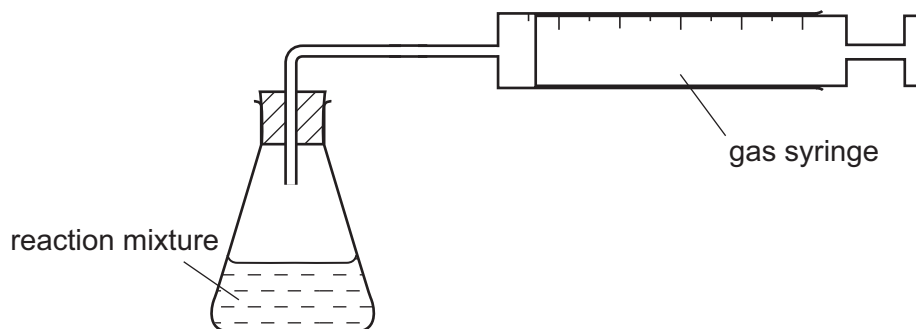


The reaction is reversible and endothermic.

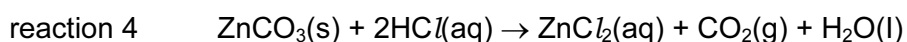
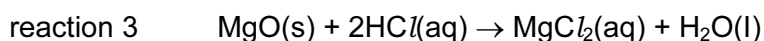
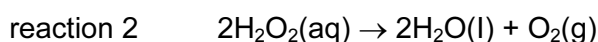
Which conditions will give the largest yield of nitrogen dioxide,  $\text{NO}_2$ ?

	temperature	pressure
<b>A</b>	high	high
<b>B</b>	high	low
<b>C</b>	low	high
<b>D</b>	low	low

18 The apparatus shown can be used to measure the rate of some chemical reactions.



For which two reactions would this apparatus be suitable?



A 1 and 2

B 1 and 3

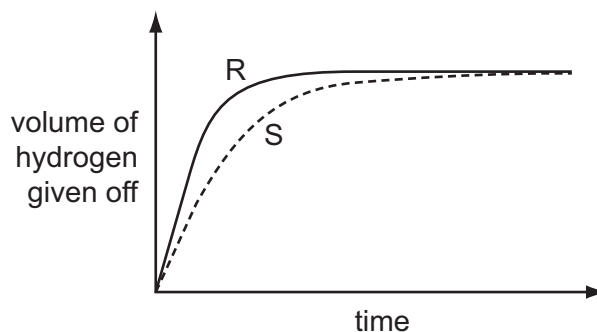
C 2 and 4

D 3 and 4

19 A student investigates the rate of reaction between magnesium and excess sulfuric acid.

The volume of hydrogen given off in the reaction is measured over time.

The graph shows the results of two experiments, R and S.



Which change in conditions would cause the difference between R and S?

A A catalyst is added in S.

B The acid is more concentrated in R than in S.

C The magnesium is less finely powdered in R than in S.

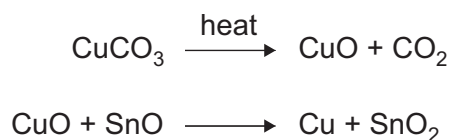
D The temperature in R is lower than in S.



20 Which of these reactions shows only reduction?

- A  $\text{Cu}^{2+} + 2\text{e}^{-} \rightarrow \text{Cu}$   
 B  $\text{Fe}_2\text{O}_3 + 3\text{CO} \rightarrow 2\text{Fe} + 3\text{CO}_2$   
 C  $\text{HCl} + \text{NaOH} \rightarrow \text{NaCl} + \text{H}_2\text{O}$   
 D  $\text{Mg} + \text{ZnSO}_4 \rightarrow \text{Zn} + \text{MgSO}_4$

21 The red colour in some pottery glazes may be formed as a result of the reactions shown.

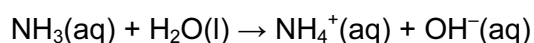


These equations show that .....1..... is oxidised and .....2..... is reduced.

Which substances correctly complete gaps 1 and 2 in the above sentence?

	1	2
<b>A</b>	$\text{CO}_2$	$\text{SnO}_2$
<b>B</b>	$\text{CuCO}_3$	$\text{CuO}$
<b>C</b>	$\text{CuO}$	$\text{SnO}$
<b>D</b>	$\text{SnO}$	$\text{CuO}$

22 Acids are compounds which donate protons (hydrogen ions).



Which compound in this equation is behaving as an acid?

- A ammonia  
 B ammonium hydroxide  
 C none of them  
 D water

23 The reactions of four different oxides W, X, Y and Z are shown.

W reacts with hydrochloric acid but not sodium hydroxide.

X reacts with both hydrochloric acid and sodium hydroxide.

Y does not react with either hydrochloric acid or sodium hydroxide.

Z reacts with sodium hydroxide but not hydrochloric acid.

Which row shows the correct types of oxide?

	acidic	basic	amphoteric	neutral
<b>A</b>	W	Z	X	Y
<b>B</b>	X	Y	W	Z
<b>C</b>	Z	X	Y	W
<b>D</b>	Z	W	X	Y

24 A solution contains barium ions and silver ions and one type of anion.

What could the anion be?

- A** chloride only
- B** nitrate only
- C** sulfate only
- D** chloride or nitrate or sulfate

25 A mixture containing two anions was tested and the results are shown below.

test	result
dilute nitric acid added	effervescence of a gas which turned limewater milky
dilute nitric acid added, followed by aqueous silver nitrate	yellow precipitate formed

Which anions were present?

- A** carbonate and chloride
- B** carbonate and iodide
- C** sulfate and chloride
- D** sulfate and iodide

26 Part of the Periodic Table is shown.

The letters are not the chemical symbols of the elements.

		W															X		
	Z																		

Which statement about the elements is **not** correct.

- A W has two electrons in the outermost shell.
- B Y is in Group IV of the Periodic Table.
- C X and Y bond covalently to form a molecule  $XY_4$ .
- D Z has more metallic character than Y.

27 Astatine is an element in Group VII of the Periodic Table. It has only ever been produced in very small amounts.

What are the likely properties of astatine?

	colour	state	reaction with aqueous potassium iodide
A	black	solid	no reaction
B	dark brown	gas	brown colour
C	green	solid	no reaction
D	yellow	liquid	brown colour

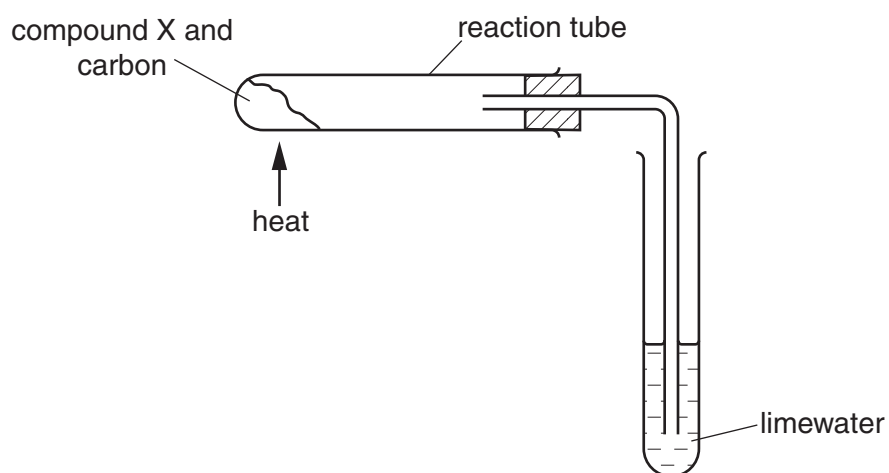
- 28 The table shows the results of adding three metals, P, Q and R, to dilute hydrochloric acid and to water.

metal	dilute hydrochloric acid	water
P	hydrogen produced	hydrogen produced
Q	no reaction	no reaction
R	hydrogen produced	no reaction

What is the order of reactivity of the metals?

	most reactive	→	least reactive
<b>A</b>	P		R Q
<b>B</b>	P		Q R
<b>C</b>	R		Q P
<b>D</b>	R		P Q

- 29 Compound X is heated with carbon using the apparatus shown.



A brown solid is formed in the reaction tube and the limewater turns cloudy.

What is compound X?

- A** calcium oxide
- B** copper(II) oxide
- C** magnesium oxide
- D** sodium oxide

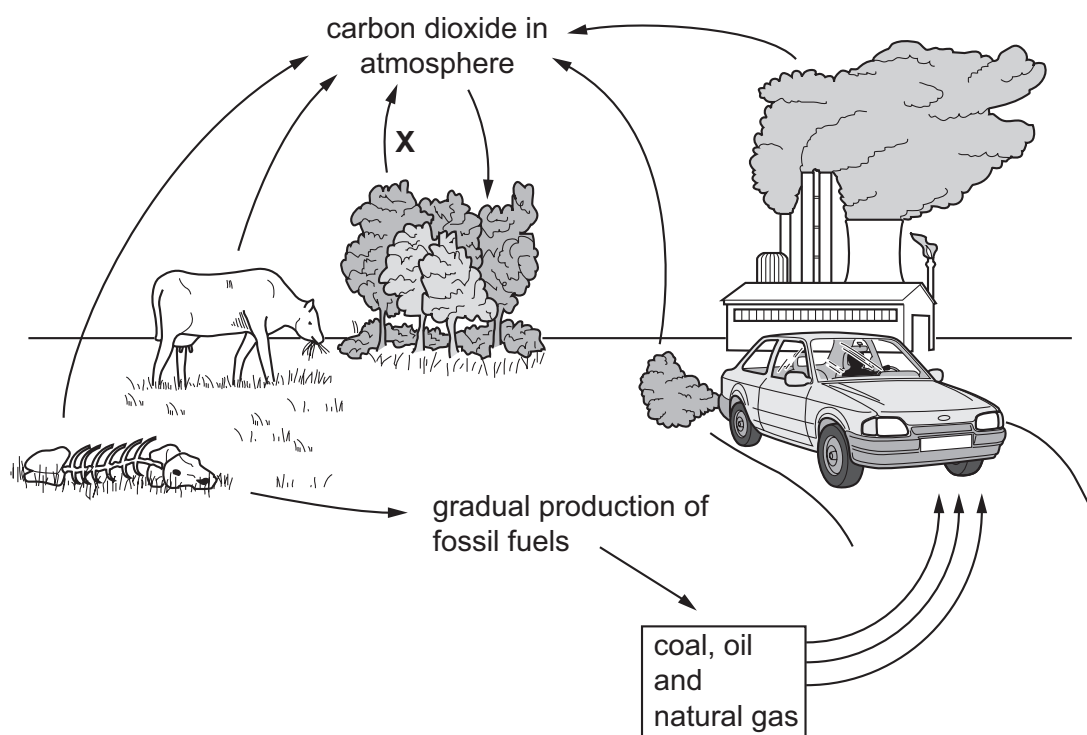
- 30 Zinc is extracted from zinc blende. Zinc blende is an ore of zinc and consists mainly of zinc sulfide.

One of the steps in the process involves zinc sulfide reacting with oxygen from the air.

What is the equation for this reaction?

- A  $2\text{ZnS} + 3\text{O}_2 \rightarrow 2\text{ZnO} + 2\text{SO}_2$   
 B  $2\text{ZnS} + \text{O}_2 \rightarrow 2\text{Zn} + \text{SO}_2$   
 C  $2\text{ZnS} + \text{O}_2 \rightarrow 2\text{ZnO} + \text{S}$   
 D  $\text{ZnS} + 2\text{O}_2 \rightarrow \text{ZnSO}_4$

- 31 The diagram shows the carbon cycle.



Which process is shown by the arrow marked X?

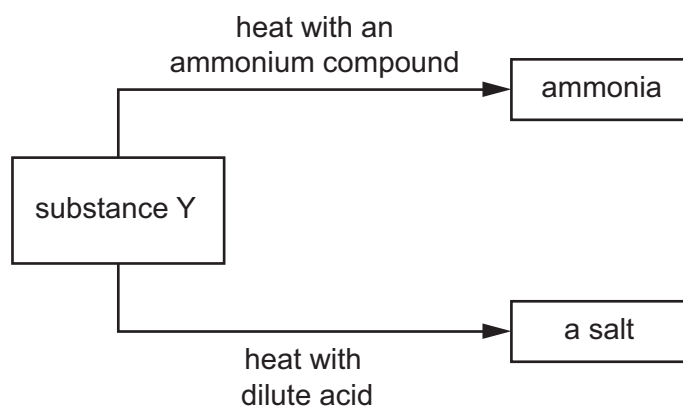
- A combustion  
 B photosynthesis  
 C respiration  
 D transpiration

32 A catalytic converter removes harmful gases from motor car exhausts.

Which reaction does **not** take place in a catalytic converter?

- A  $2\text{CO} + \text{O}_2 \rightarrow 2\text{CO}_2$
- B  $\text{N}_2 + 2\text{CO}_2 \rightarrow 2\text{NO} + 2\text{CO}$
- C  $2\text{NO}_2 \rightarrow \text{N}_2 + 2\text{O}_2$
- D  $2\text{NO}_2 + 4\text{CO} \rightarrow \text{N}_2 + 4\text{CO}_2$

33 The diagram shows some reactions of substance Y.



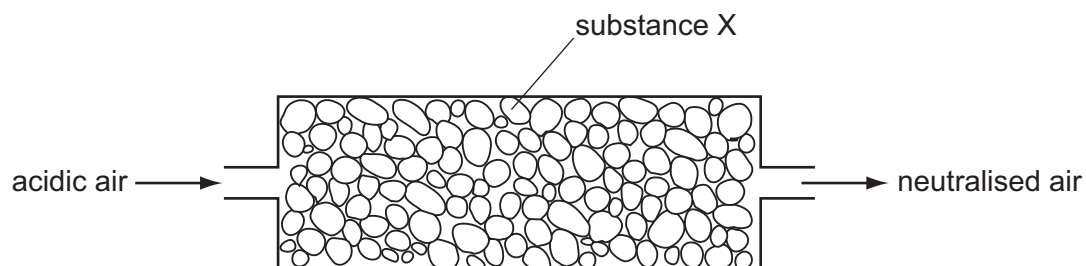
Which type of substance is Y?

- A an alcohol
- B a base
- C a catalyst
- D a metal

34 Which row shows the conditions for the manufacture of sulfuric acid?

	pressure / atm	temperature / °C	catalyst
<b>A</b>	2	450	vanadium(V) oxide
<b>B</b>	2	250	iron
<b>C</b>	200	450	iron
<b>D</b>	200	250	vanadium(V) oxide

35 Air containing an acidic impurity was neutralised by passing it through a column containing substance X.

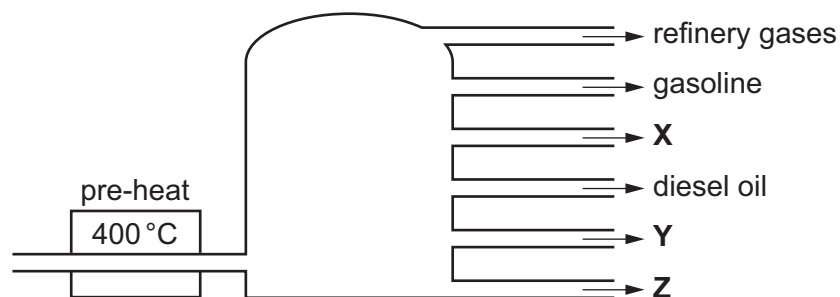


What is substance X?

- A** calcium oxide
- B** sand
- C** sodium chloride
- D** concentrated sulfuric acid

36 In an oil refinery, petroleum is separated into useful fractions.

The diagram shows some of these fractions.



What are fractions X, Y and Z?

	X	Y	Z
<b>A</b>	fuel oil	bitumen	paraffin (kerosene)
<b>B</b>	fuel oil	paraffin (kerosene)	bitumen
<b>C</b>	paraffin (kerosene)	bitumen	fuel oil
<b>D</b>	paraffin (kerosene)	fuel oil	bitumen

37 Which reaction does **not** take place in the dark?

- A**  $\text{CH}_4 + 2\text{O}_2 \rightarrow \text{CO}_2 + 2\text{H}_2\text{O}$
- B**  $\text{CH}_4 + \text{Cl}_2 \rightarrow \text{CH}_3\text{Cl} + \text{HCl}$
- C**  $\text{C}_2\text{H}_4 + \text{H}_2\text{O} \rightarrow \text{C}_2\text{H}_5\text{OH}$
- D**  $\text{C}_2\text{H}_4 + \text{H}_2 \rightarrow \text{C}_2\text{H}_6$

38 Ethane and ethene are both hydrocarbons.

Ethane reacts with chlorine and ethene reacts with bromine.

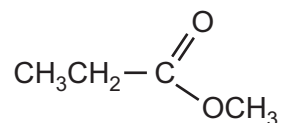
Which row describes the type of reaction that ethane and ethene undergo?

	ethane	ethene
<b>A</b>	addition	addition
<b>B</b>	addition	substitution
<b>C</b>	substitution	substitution
<b>D</b>	substitution	addition



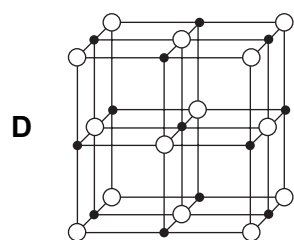
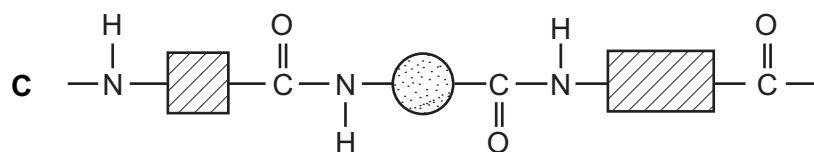
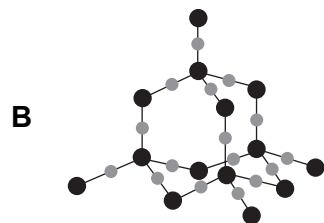
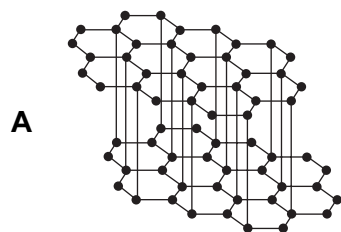
39 Esters are made by reacting an alcohol with a carboxylic acid.

Which acid and alcohol react together to form the following ester?



- A propanoic acid and ethanol
- B propanoic acid and methanol
- C ethanoic acid and ethanol
- D ethanoic acid and methanol

40 Which structure represents a polymer?



Group																																																																																																																																																																																																																																																																																																																																																																																																													
I	II	III	IV	V	VI	VII	VIII																																																																																																																																																																																																																																																																																																																																																																																																						
		1 H hydrogen 1															2 He helium 4																																																																																																																																																																																																																																																																																																																																																																																												
3 Li lithium 7	4 Be beryllium 9	<div style="border: 1px solid black; padding: 5px; display: inline-block;"> <b>Key</b>            atomic number            atomic symbol            name            relative atomic mass         </div>																5 B boron 11	6 C carbon 12	7 N nitrogen 14	8 O oxygen 16	9 F fluorine 19	10 Ne neon 20																																																																																																																																																																																																																																																																																																																																																																																						
11 Na sodium 23	12 Mg magnesium 24																	13 Al aluminium 27	14 Si silicon 28	15 P phosphorus 31	16 S sulfur 32	17 Cl chlorine 35.5	18 Ar argon 40	19 K potassium 39	20 Ca calcium 40	21 Sc scandium 45	22 Ti titanium 48	23 V vanadium 51	24 Cr chromium 52	25 Mn manganese 55	26 Fe iron 56	27 Co cobalt 59	28 Ni nickel 59	29 Cu copper 64	30 Zn zinc 65	31 Ga gallium 70	32 Ge germanium 73	33 As arsenic 75	34 Se selenium 79	35 Br bromine 80	36 Kr krypton 84																																																																																																																																																																																																																																																																																																																																																																				
37 Rb rubidium 85	38 Sr strontium 88	39 Y yttrium 89	40 Zr zirconium 91	41 Nb niobium 93	42 Mo molybdenum 96	43 Tc technetium —	44 Ru ruthenium 101	45 Rh rhodium 103	46 Pd palladium 106	47 Ag silver 108	48 Cd cadmium 112	49 In indium 115	50 Sn tin 117	51 Sb antimony 122	52 Te tellurium 128	53 I iodine 127	54 Xe xenon 131	55 Cs caesium 133	56 Ba barium 137	57–71 lanthanoids —	72 Hf hafnium 178	73 Ta tantalum 181	74 W tungsten 184	75 Re rhenium 186	76 Os osmium 190	77 Ir iridium 192	78 Pt platinum 195	79 Au gold 197	80 Hg mercury 201	81 Tl thallium 204	82 Pb lead 207	83 Bi bismuth 209	84 Po polonium —	85 At astatine —	86 Rn radon —																																																																																																																																																																																																																																																																																																																																																																										
87 Fr francium —	88 Ra radium —	89–103 actinoids —	104 Rf rutherfordium —	105 Db dubnium —	106 Sg seaborgium —	107 Bh bohrium —	108 Hs hassium —	109 Mt meitnerium —	110 Ds darmstadtium —	111 Rg roentgenium —	112 Cn copernicium —	114 Fl flerovium —	116 Lv livermorium —	117 Ts tennessine —	118 Og oganesson —	119 Uue unbinilium —	120 Uub unbinilium —	121 Uut ununilium —	122 Uuq ununilium —	123 Uup ununilium —	124 Uuq ununilium —	125 Uub unbinilium —	126 Uut ununilium —	127 Uuq ununilium —	128 Uup ununilium —	129 Uuq ununilium —	130 Uub unbinilium —	131 Uut ununilium —	132 Uuq ununilium —	133 Uup ununilium —	134 Uuq ununilium —	135 Uub unbinilium —	136 Uut ununilium —	137 Uuq ununilium —	138 Uup ununilium —	139 Uuq ununilium —	140 Uub unbinilium —	141 Uut ununilium —	142 Uuq ununilium —	143 Uub unbinilium —	144 Uut ununilium —	145 Uuq ununilium —	146 Uub unbinilium —	147 Uut ununilium —	148 Uuq ununilium —	149 Uub unbinilium —	150 Uut ununilium —	151 Uuq ununilium —	152 Uub unbinilium —	153 Uut ununilium —	154 Uuq ununilium —	155 Uub unbinilium —	156 Uut ununilium —	157 Uuq ununilium —	158 Uub unbinilium —	159 Uut ununilium —	160 Uuq ununilium —	161 Uub unbinilium —	162 Uut ununilium —	163 Uuq ununilium —	164 Uub unbinilium —	165 Uut ununilium —	166 Uuq ununilium —	167 Uub unbinilium —	168 Uut ununilium —	169 Uuq ununilium —	170 Uub unbinilium —	171 Uut ununilium —	172 Uuq ununilium —	173 Uub unbinilium —	174 Uut ununilium —	175 Uuq ununilium —	176 Uub unbinilium —	177 Uut ununilium —	178 Uuq ununilium —	179 Uub unbinilium —	180 Uut ununilium —	181 Uuq ununilium —	182 Uub unbinilium —	183 Uut ununilium —	184 Uuq ununilium —	185 Uub unbinilium —	186 Uut ununilium —	187 Uuq ununilium —	188 Uub unbinilium —	189 Uut ununilium —	190 Uuq ununilium —	191 Uub unbinilium —	192 Uut ununilium —	193 Uuq ununilium —	194 Uub unbinilium —	195 Uut ununilium —	196 Uuq ununilium —	197 Uub unbinilium —	198 Uut ununilium —	199 Uuq ununilium —	200 Uub unbinilium —	201 Uut ununilium —	202 Uuq ununilium —	203 Uub unbinilium —	204 Uut ununilium —	205 Uuq ununilium —	206 Uub unbinilium —	207 Uut ununilium —	208 Uuq ununilium —	209 Uub unbinilium —	210 Uut ununilium —	211 Uuq ununilium —	212 Uub unbinilium —	213 Uut ununilium —	214 Uuq ununilium —	215 Uub unbinilium —	216 Uut ununilium —	217 Uuq ununilium —	218 Uub unbinilium —	219 Uut ununilium —	220 Uuq ununilium —	221 Uub unbinilium —	222 Uut ununilium —	223 Uuq ununilium —	224 Uub unbinilium —	225 Uut ununilium —	226 Uuq ununilium —	227 Uub unbinilium —	228 Uut ununilium —	229 Uuq ununilium —	230 Uub unbinilium —	231 Uut ununilium —	232 Uuq ununilium —	233 Uub unbinilium —	234 Uut ununilium —	235 Uuq ununilium —	236 Uub unbinilium —	237 Uut ununilium —	238 Uuq ununilium —	239 Uub unbinilium —	240 Uut ununilium —	241 Uuq ununilium —	242 Uub unbinilium —	243 Uut ununilium —	244 Uuq ununilium —	245 Uub unbinilium —	246 Uut ununilium —	247 Uuq ununilium —	248 Uub unbinilium —	249 Uut ununilium —	250 Uuq ununilium —	251 Uub unbinilium —	252 Uut ununilium —	253 Uuq ununilium —	254 Uub unbinilium —	255 Uut ununilium —	256 Uuq ununilium —	257 Uub unbinilium —	258 Uut ununilium —	259 Uuq ununilium —	260 Uub unbinilium —	261 Uut ununilium —	262 Uuq ununilium —	263 Uub unbinilium —	264 Uut ununilium —	265 Uuq ununilium —	266 Uub unbinilium —	267 Uut ununilium —	268 Uuq ununilium —	269 Uub unbinilium —	270 Uut ununilium —	271 Uuq ununilium —	272 Uub unbinilium —	273 Uut ununilium —	274 Uuq ununilium —	275 Uub unbinilium —	276 Uut ununilium —	277 Uuq ununilium —	278 Uub unbinilium —	279 Uut ununilium —	280 Uuq ununilium —	281 Uub unbinilium —	282 Uut ununilium —	283 Uuq ununilium —	284 Uub unbinilium —	285 Uut ununilium —	286 Uuq ununilium —	287 Uub unbinilium —	288 Uut ununilium —	289 Uuq ununilium —	290 Uub unbinilium —	291 Uut ununilium —	292 Uuq ununilium —	293 Uub unbinilium —	294 Uut ununilium —	295 Uuq ununilium —	296 Uub unbinilium —	297 Uut ununilium —	298 Uuq ununilium —	299 Uub unbinilium —	300 Uut ununilium —	301 Uuq ununilium —	302 Uub unbinilium —	303 Uut ununilium —	304 Uuq ununilium —	305 Uub unbinilium —	306 Uut ununilium —	307 Uuq ununilium —	308 Uub unbinilium —	309 Uut ununilium —	310 Uuq ununilium —	311 Uub unbinilium —	312 Uut ununilium —	313 Uuq ununilium —	314 Uub unbinilium —	315 Uut ununilium —	316 Uuq ununilium —	317 Uub unbinilium —	318 Uut ununilium —	319 Uuq ununilium —	320 Uub unbinilium —	321 Uut ununilium —	322 Uuq ununilium —	323 Uub unbinilium —	324 Uut ununilium —	325 Uuq ununilium —	326 Uub unbinilium —	327 Uut ununilium —	328 Uuq ununilium —	329 Uub unbinilium —	330 Uut ununilium —	331 Uuq ununilium —	332 Uub unbinilium —	333 Uut ununilium —	334 Uuq ununilium —	335 Uub unbinilium —	336 Uut ununilium —	337 Uuq ununilium —	338 Uub unbinilium —	339 Uut ununilium —	340 Uuq ununilium —	341 Uub unbinilium —	342 Uut ununilium —	343 Uuq ununilium —	344 Uub unbinilium —	345 Uut ununilium —	346 Uuq ununilium —	347 Uub unbinilium —	348 Uut ununilium —	349 Uuq ununilium —	350 Uub unbinilium —	351 Uut ununilium —	352 Uuq ununilium —	353 Uub unbinilium —	354 Uut ununilium —	355 Uuq ununilium —	356 Uub unbinilium —	357 Uut ununilium —	358 Uuq ununilium —	359 Uub unbinilium —	360 Uut ununilium —	361 Uuq ununilium —	362 Uub unbinilium —	363 Uut ununilium —	364 Uuq ununilium —	365 Uub unbinilium —	366 Uut ununilium —	367 Uuq ununilium —	368 Uub unbinilium —	369 Uut ununilium —	370 Uuq ununilium —	371 Uub unbinilium —	372 Uut ununilium —	373 Uuq ununilium —	374 Uub unbinilium —	375 Uut ununilium —	376 Uuq ununilium —	377 Uub unbinilium —	378 Uut ununilium —	379 Uuq ununilium —	380 Uub unbinilium —	381 Uut ununilium —	382 Uuq ununilium —	383 Uub unbinilium —	384 Uut ununilium —	385 Uuq ununilium —	386 Uub unbinilium —	387 Uut ununilium —	388 Uuq ununilium —	389 Uub unbinilium —	390 Uut ununilium —	391 Uuq ununilium —	392 Uub unbinilium —	393 Uut ununilium —	394 Uuq ununilium —	395 Uub unbinilium —	396 Uut ununilium —	397 Uuq ununilium —	398 Uub unbinilium —	399 Uut ununilium —	400 Uuq ununilium —	401 Uub unbinilium —	402 Uut ununilium —	403 Uuq ununilium —	404 Uub unbinilium —	405 Uut ununilium —	406 Uuq ununilium —	407 Uub unbinilium —	408 Uut ununilium —	409 Uuq ununilium —	410 Uub unbinilium —	411 Uut ununilium —	412 Uuq ununilium —	413 Uub unbinilium —	414 Uut ununilium —	415 Uuq ununilium —	416 Uub unbinilium —	417 Uut ununilium —	418 Uuq ununilium —	419 Uub unbinilium —	420 Uut ununilium —	421 Uuq ununilium —	422 Uub unbinilium —	423 Uut ununilium —	424 Uuq ununilium —	425 Uub unbinilium —	426 Uut ununilium —	427 Uuq ununilium —	428 Uub unbinilium —	429 Uut ununilium —	430 Uuq ununilium —	431 Uub unbinilium —	432 Uut ununilium —	433 Uuq ununilium —	434 Uub unbinilium —	435 Uut ununilium —	436 Uuq ununilium —	437 Uub unbinilium —	438 Uut ununilium —	439 Uuq ununilium —	440 Uub unbinilium —	441 Uut ununilium —	442 Uuq ununilium —	443 Uub unbinilium —	444 Uut ununilium —	445 Uuq ununilium —	446 Uub unbinilium —	447 Uut ununilium —	448 Uuq ununilium —	449 Uub unbinilium —	450 Uut ununilium —	451 Uuq ununilium —	452 Uub unbinilium —	453 Uut ununilium —	454 Uuq ununilium —	455 Uub unbinilium —	456 Uut ununilium —	457 Uuq ununilium —	458 Uub unbinilium —	459 Uut ununilium —	460 Uuq ununilium —	461 Uub unbinilium —	462 Uut ununilium —	463 Uuq ununilium —	464 Uub unbinilium —	465 Uut ununilium —	466 Uuq ununilium —	467 Uub unbinilium —	468 Uut ununilium —	469 Uuq ununilium —	470 Uub unbinilium —	471 Uut ununilium —	472 Uuq ununilium —	473 Uub unbinilium —	474 Uut ununilium —	475 Uuq ununilium —	476 Uub unbinilium —	477 Uut ununilium —	478 Uuq ununilium —	479 Uub unbinilium —	480 Uut ununilium —	481 Uuq ununilium —	482 Uub unbinilium —	483 Uut ununilium —	484 Uuq ununilium —	485 Uub unbinilium —	486 Uut ununilium —	487 Uuq ununilium —	488 Uub unbinilium —	489 Uut ununilium —	490 Uuq ununilium —	491 Uub unbinilium —	492 Uut ununilium —	493 Uuq ununilium —	494 Uub unbinilium —	495 Uut ununilium —	496 Uuq ununilium —	497 Uub unbinilium —	498 Uut ununilium —	499 Uuq ununilium —	500 Uub unbinilium —

The volume of one mole of any gas is 24 dm<sup>3</sup> at room temperature and pressure (r.t.p.)

Permission to reproduce items where third-party owned material protected by copyright is included has been sought and cleared where possible. Every reasonable effort has been made by the publisher (UCLES) to trace copyright holders, but if any items requiring clearance have unwittingly been included, the publisher will be pleased to make amends at the earliest possible opportunity.

Cambridge International Examinations is part of the Cambridge Assessment Group. Cambridge Assessment is the brand name of University of Cambridge Local Examinations Syndicate (UCLES), which is itself a department of the University of Cambridge.