



Cambridge International Examinations
Cambridge International General Certificate of Secondary Education

CHEMISTRY

0620/13

Paper 1 Multiple Choice

October/November 2015

45 Minutes

Additional Materials: Multiple Choice Answer Sheet
 Soft clean eraser
 Soft pencil (type B or HB is recommended)

* 0 9 7 7 5 1 7 4 1 6 *

READ THESE INSTRUCTIONS FIRST

Write in soft pencil.

Do not use staples, paper clips, glue or correction fluid.

Write your name, Centre number and candidate number on the Answer Sheet in the spaces provided unless this has been done for you.

DO NOT WRITE IN ANY BARCODES.

There are **forty** questions on this paper. Answer **all** questions. For each question there are four possible answers **A, B, C** and **D**.

Choose the **one** you consider correct and record your choice in **soft pencil** on the separate Answer Sheet.

Read the instructions on the Answer Sheet very carefully.

Each correct answer will score one mark. A mark will not be deducted for a wrong answer.

Any rough working should be done in this booklet.

A copy of the Periodic Table is printed on page 16.

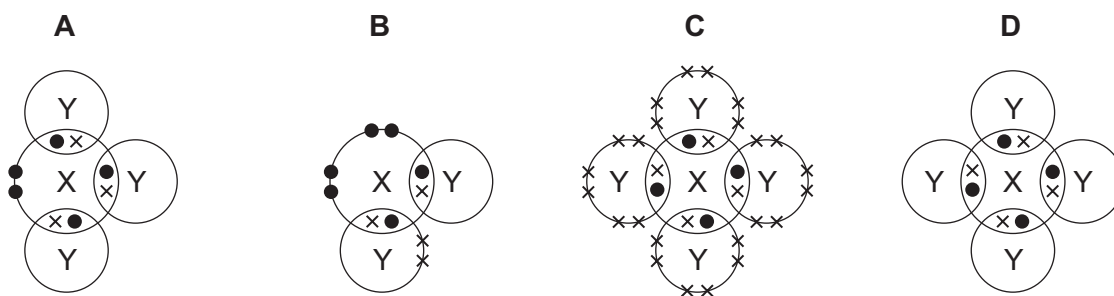
Electronic calculators may be used.

The syllabus is approved for use in England, Wales and Northern Ireland as a Cambridge International Level 1/Level 2 Certificate.

This document consists of **16** printed pages.

4 In the following diagrams, X and Y are atoms of different elements.

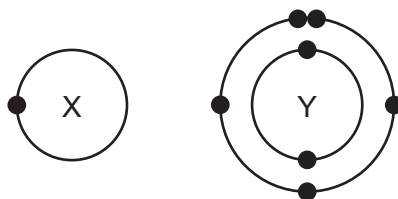
Which diagram correctly shows the arrangement of outer electrons in a molecule of methane?



5 What do the nuclei of ${}^1_1\text{H}$ hydrogen atoms contain?

- A electrons and neutrons
- B electrons and protons
- C neutrons only
- D protons only

6 The electronic structures of atoms X and Y are shown.



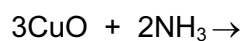
X and Y form a covalent compound.

What is its formula?

- A XY_5
- B XY_3
- C XY
- D X_3Y

7 Copper(II) oxide reacts with ammonia.

The left hand side of the balanced equation for this reaction is:



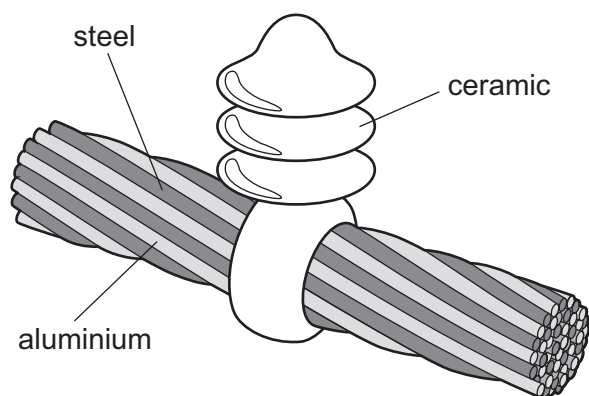
What completes the equation?

- A $3\text{Cu} + 2\text{HNO}_3$
- B $3\text{Cu} + 2\text{N} + 3\text{H}_2\text{O}$
- C $3\text{Cu} + \text{N}_2 + 3\text{H}_2\text{O}$
- D $3\text{Cu} + 2\text{NO} + 3\text{H}_2\text{O}$

- 8 What are the electrode products when molten silver iodide is electrolysed between inert electrodes?

	cathode	anode
A	hydrogen	iodine
B	iodine	silver
C	silver	iodine
D	silver	oxygen

- 9 The diagram shows a section of an overhead power cable.

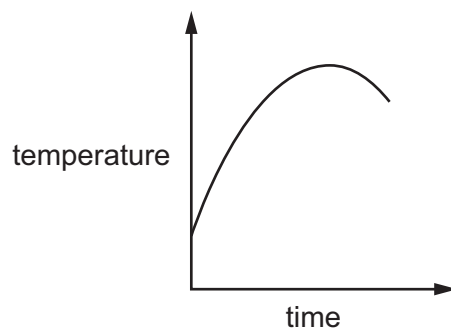


Which statement explains why a particular substance is used?

- A** Aluminium has a low density and is a good conductor of electricity.
- B** Ceramic is a good conductor of electricity.
- C** Steel can rust in damp air.
- D** Steel is more dense than aluminium.
- 10** Which reaction is endothermic?
- A** the burning of magnesium ribbon
- B** the combustion of methane
- C** the decomposition of calcium carbonate
- D** the reaction of water with anhydrous copper(II) sulfate

11 A metal reacts with an aqueous solution.

The graph shows the temperature before, during and after the reaction.



Which row describes the reaction?

	reaction	energy change
A	combustion	endothermic
B	combustion	exothermic
C	thermal decomposition	endothermic
D	thermal decomposition	exothermic

12 Which of the following changes decreases the rate of the reaction between magnesium and dilute hydrochloric acid?

- 1 diluting the acid
- 2 using larger pieces of magnesium
- 3 cooling the mixture

- A** 1, 2 and 3
B 1 and 2 only
C 1 and 3 only
D 2 and 3 only

13 The element vanadium, V, forms several oxides.

In which change is oxidation taking place?

- A** $\text{VO}_2 \rightarrow \text{V}_2\text{O}_3$
B $\text{V}_2\text{O}_5 \rightarrow \text{VO}_2$
C $\text{V}_2\text{O}_3 \rightarrow \text{VO}$
D $\text{V}_2\text{O}_3 \rightarrow \text{V}_2\text{O}_5$

14 If anhydrous copper(II) sulfate is added to water, which colour change is observed?

- A blue to pink
- B blue to white
- C pink to blue
- D white to blue

15 Element X is in Group I of the Periodic Table.

Which row shows the type of oxide and whether element X is metallic or non-metallic?

	type of oxide	metallic or non-metallic
A	acidic	metallic
B	acidic	non-metallic
C	basic	metallic
D	basic	non-metallic

16 Three liquids, P, Q and R, are added to a mixture of hydrochloric acid and Universal Indicator solution.

The following observations are made.

- P the colour of the indicator turns purple.
- Q the colour of the indicator does not change.
- R there is effervescence and the indicator turns blue.

What are P, Q and R?

	P	Q	R
A	sodium carbonate solution	water	sodium hydroxide solution
B	sodium hydroxide solution	water	sodium carbonate solution
C	water	sodium carbonate solution	sodium hydroxide solution
D	water	sodium hydroxide solution	sodium carbonate solution

20 J and K are two elements from the same period in the Periodic Table.

The table gives some properties of J and K.

	J	K
appearance	shiny grey	dull yellow
electrical conductivity when solid	good	poor
malleability	malleable	brittle

Which statement about J and K is correct?

- A J forms an acidic oxide.
- B J is found to the left of K in the Periodic Table.
- C K forms positive ions when it reacts.
- D K is more metallic than J.

21 The table gives information about four elements.

Which element is a transition metal?

	electrical conductivity	density in g/cm^3	melting point in $^{\circ}\text{C}$
A	good	0.97	98
B	good	7.86	1535
C	poor	2.33	1410
D	poor	3.12	-7

22 Hydrogen and helium have both been used to fill balloons.

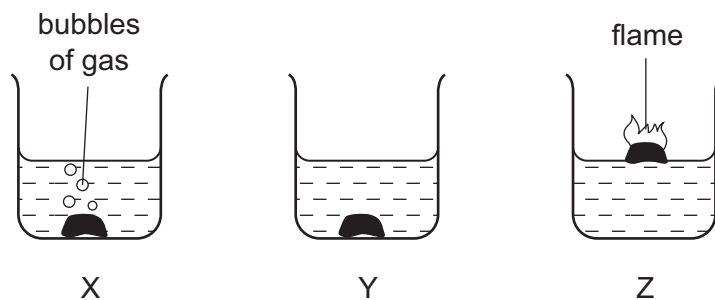
Which property of helium makes it the preferred choice to hydrogen?

- A easily compressed into a gas cylinder
- B forms monatomic molecules
- C lower density
- D unreactive

23 Which statement is true for **all** metals?

- A Their atoms lose one or more electrons when they react.
- B They are brittle.
- C They do not conduct electricity when solid.
- D They melt at low temperatures when they are heated.

24 The diagrams show what happens when three different metals are added to water.



What are X, Y and Z?

	X	Y	Z
A	calcium	copper	potassium
B	copper	calcium	potassium
C	potassium	calcium	copper
D	potassium	copper	calcium

25 The table show three uses of aluminium and a reason why aluminium is used for that purpose.

	use	reason
1	aircraft manufacture	high tensile strength
2	overhead electricity cables	low density
3	food containers	resistance to corrosion

Which reasons explain the use?

- A 1, 2 and 3
- B 1 and 2 only
- C 1 and 3 only
- D 2 and 3 only

26 Which conditions are necessary to make mild steel from iron?

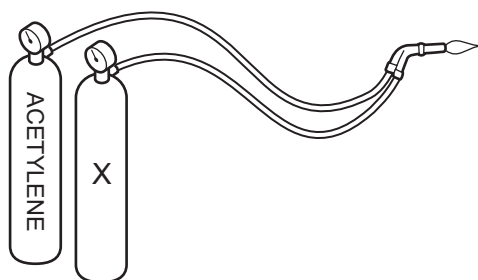
- A add calcium oxide and blow oxygen through it
- B heat with calcium oxide
- C heat with carbon and limestone
- D heat with nickel and chromium

27 Which statements about water are correct?

- 1 Household water may contain salts in solution.
- 2 Water for household use is filtered to remove soluble impurities.
- 3 Water is treated with chlorine to kill bacteria.
- 4 Water is used in industry for cooling.

- A 1, 2, 3 and 4
- B 1, 2 and 3 only
- C 1, 3 and 4 only
- D 2, 3 and 4 only

28 The diagram shows the flame produced from burning a hydrocarbon, acetylene, in a welding torch.



Which gas is X?

- A hydrogen
- B methane
- C nitrogen
- D oxygen

29 Carbon monoxide is an air pollutant produced when petrol is burned in a car engine.

Why is carbon monoxide considered to be an air pollutant?

- A It causes climate change.
- B It causes the corrosion of buildings.
- C It is a significant greenhouse gas.
- D It is poisonous.

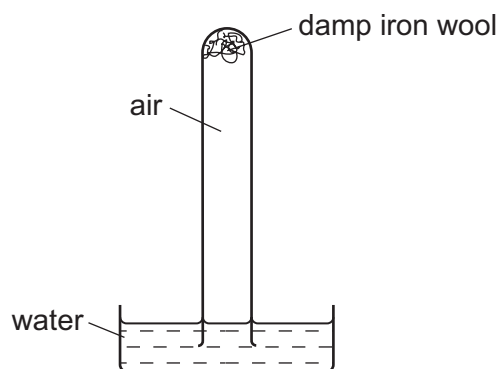
30 Which compound is **not** a fertiliser?

- A ammonium sulfate, $(\text{NH}_4)_2\text{SO}_4$
- B calcium hydroxide, $\text{Ca}(\text{OH})_2$
- C potassium chloride, KCl
- D urea, $\text{CO}(\text{NH}_2)_2$

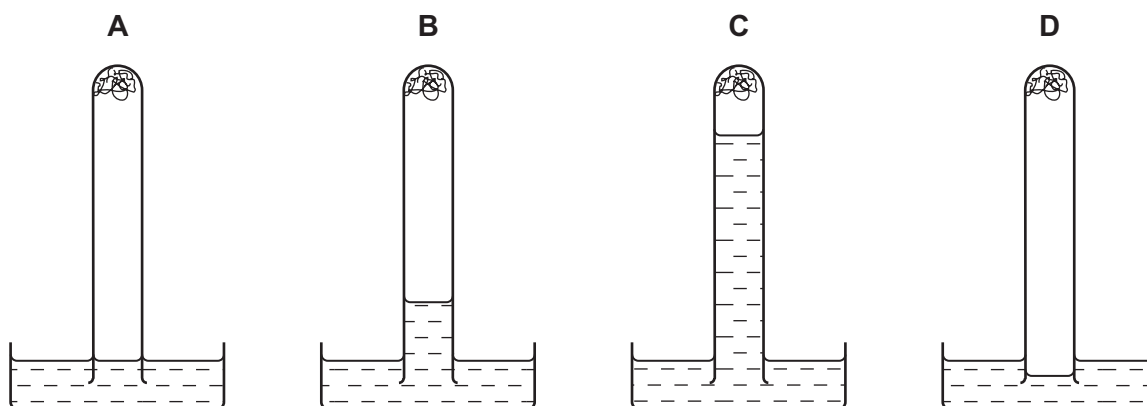
31 In which reaction is carbon dioxide **not** produced?

- A complete combustion of petrol
- B hydrochloric acid reacting with magnesium
- C respiration
- D thermal decomposition of limestone

32 The apparatus shown is set up and left for a week.



Which diagram shows the level of the water at the end of the week?

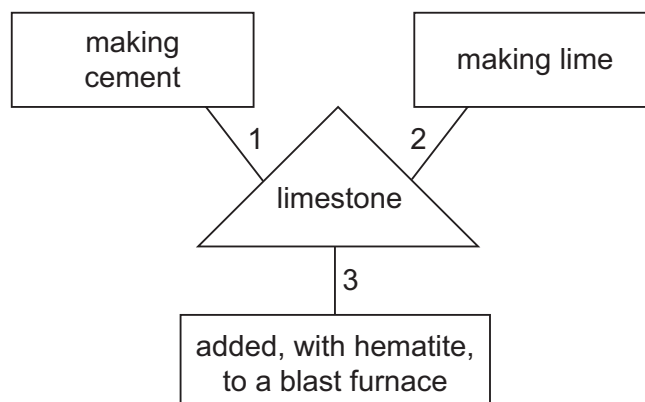


33 Unwanted vegetation is sometimes placed in a bin where it decays to form compost. This compost can be used to fertilise soils.

Which gas is likely to be present in a higher percentage inside the bin than in the air outside the bin?

- A carbon monoxide
- B methane
- C oxygen
- D sulfur dioxide

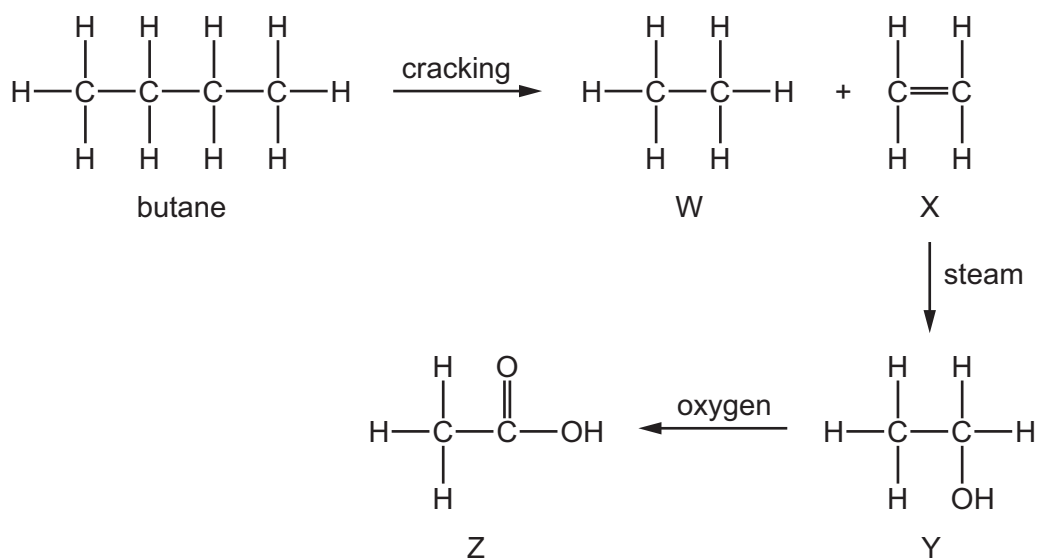
34 A student is asked to draw a diagram showing the uses of limestone.



Which numbered lines show a correct use of limestone?

- A 1, 2 and 3
- B 1 and 2 only
- C 1 and 3 only
- D 2 and 3 only

35 What are the names of the compounds shown in the reaction scheme below?



	W	X	Y	Z
A	ethane	ethene	ethanol	ethanoic acid
B	ethane	ethene	ethanoic acid	ethanol
C	ethene	ethane	ethanol	ethanoic acid
D	ethene	ethane	ethanoic acid	ethanol

36 Which row describes the formation of a polymer?

	monomer	polymer
A	ethane	poly(ethane)
B	ethane	poly(ethene)
C	ethene	poly(ethane)
D	ethene	poly(ethene)

37 Which row shows the correct use of a fraction obtained by the fractional distillation of petroleum?

	fraction	use
A	bitumen	making waxes and polishes
B	fuel oil	aircraft fuel
C	kerosene	fuel for ships
D	naphtha	making chemicals

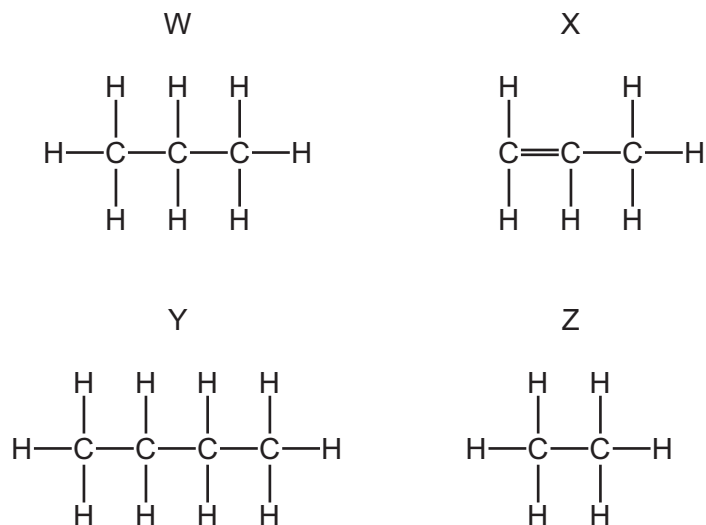
38 Ethanol can be formed by

- 1 fermentation
- 2 reaction between steam and ethene

Which of these processes uses a catalyst?

	1	2
A	✓	✓
B	✓	x
C	x	✓
D	x	x

39 The structures of four compounds are shown.



Which are members of the same homologous series?

- A W, X, Y and Z
- B W and X only
- C W, Y and Z only
- D X and Z only

40 During the process of cracking hydrocarbons, an 1 is converted into an 2

The presence of an 3 can be shown by a visible reaction with 4

Which words complete gaps 1, 2, 3 and 4?

	1	2	3	4
A	alkane	alkene	alkene	bromine
B	alkane	alkene	alkene	steam
C	alkene	alkane	alkane	bromine
D	alkene	alkane	alkane	steam

DATA SHEET
The Periodic Table of the Elements

		Group											
I	II	III	IV	V	VI	VII	0						
		1 H Hydrogen 1							4 He Helium 2				
7 Li Lithium 3	9 Be Beryllium 4							20 Ne Neon 10					
23 Na Sodium 11	24 Mg Magnesium 12	27 Al Aluminium 13	28 Si Silicon 14	31 P Phosphorus 15	32 S Sulfur 16	35.5 Cl Chlorine 17	40 Ar Argon 18						
39 K Potassium 19	40 Ca Calcium 20	70 Ga Gallium 31	73 Ge Germanium 32	75 As Arsenic 33	79 Se Selenium 34	80 Br Bromine 35	84 Kr Krypton 36						
85 Rb Rubidium 37	88 Sr Strontium 38	64 Cu Copper 29	65 Zn Zinc 30	106 Pd Palladium 46	108 Ag Silver 47	127 I Iodine 53	131 Xe Xenon 54						
133 Cs Caesium 55	137 Ba Barium 56	59 Ni Nickel 28	59 Co Cobalt 27	103 Rh Rhodium 45	106 Pd Palladium 46	204 Pb Lead 82	209 Bi Bismuth 83						
226 Ra Radium 88	227 Ac Actinium 89	56 Fe Iron 26	55 Mn Manganese 25	101 Ru Ruthenium 44	101 Rh Rhodium 45	201 Hg Mercury 80	210 Po Polonium 84						
		48 Ti Titanium 22	45 Sc Scandium 21	91 Zr Zirconium 40	91 Nb Niobium 41	197 Au Gold 79	208 Rn Radon 86						
		51 V Vanadium 23	52 Cr Chromium 24	101 Ru Ruthenium 44	101 Rh Rhodium 45	197 Au Gold 79	208 Rn Radon 86						
		56 Fe Iron 26	55 Mn Manganese 25	101 Ru Ruthenium 44	101 Rh Rhodium 45	197 Au Gold 79	208 Rn Radon 86						
		59 Co Cobalt 27	59 Ni Nickel 28	103 Rh Rhodium 45	103 Rh Rhodium 45	197 Au Gold 79	208 Rn Radon 86						
		64 Cu Copper 29	64 Zn Zinc 30	106 Pd Palladium 46	106 Pd Palladium 46	197 Au Gold 79	208 Rn Radon 86						
		70 Ga Gallium 31	70 Zn Zinc 30	106 Pd Palladium 46	106 Pd Palladium 46	197 Au Gold 79	208 Rn Radon 86						
		73 Ge Germanium 32	73 Zn Zinc 30	106 Pd Palladium 46	106 Pd Palladium 46	197 Au Gold 79	208 Rn Radon 86						
		75 As Arsenic 33	75 Zn Zinc 30	106 Pd Palladium 46	106 Pd Palladium 46	197 Au Gold 79	208 Rn Radon 86						
		79 Se Selenium 34	79 Zn Zinc 30	106 Pd Palladium 46	106 Pd Palladium 46	197 Au Gold 79	208 Rn Radon 86						
		80 Br Bromine 35	80 Zn Zinc 30	106 Pd Palladium 46	106 Pd Palladium 46	197 Au Gold 79	208 Rn Radon 86						
		82 Pb Lead 82	82 Zn Zinc 30	106 Pd Palladium 46	106 Pd Palladium 46	197 Au Gold 79	208 Rn Radon 86						
		83 Bi Bismuth 83	83 Zn Zinc 30	106 Pd Palladium 46	106 Pd Palladium 46	197 Au Gold 79	208 Rn Radon 86						
		84 Po Polonium 84	84 Zn Zinc 30	106 Pd Palladium 46	106 Pd Palladium 46	197 Au Gold 79	208 Rn Radon 86						
		85 At Astatine 85	85 Zn Zinc 30	106 Pd Palladium 46	106 Pd Palladium 46	197 Au Gold 79	208 Rn Radon 86						
		86 Rn Radon 86	86 Zn Zinc 30	106 Pd Palladium 46	106 Pd Palladium 46	197 Au Gold 79	208 Rn Radon 86						
		87 Fr Francium 87	87 Zn Zinc 30	106 Pd Palladium 46	106 Pd Palladium 46	197 Au Gold 79	208 Rn Radon 86						
		88 Ra Radium 88	88 Zn Zinc 30	106 Pd Palladium 46	106 Pd Palladium 46	197 Au Gold 79	208 Rn Radon 86						
		89 Ac Actinium 89	89 Zn Zinc 30	106 Pd Palladium 46	106 Pd Palladium 46	197 Au Gold 79	208 Rn Radon 86						
		90 Th Thorium 90	90 Zn Zinc 30	106 Pd Palladium 46	106 Pd Palladium 46	197 Au Gold 79	208 Rn Radon 86						
		91 Pa Protactinium 91	91 Zn Zinc 30	106 Pd Palladium 46	106 Pd Palladium 46	197 Au Gold 79	208 Rn Radon 86						
		92 U Uranium 92	92 Zn Zinc 30	106 Pd Palladium 46	106 Pd Palladium 46	197 Au Gold 79	208 Rn Radon 86						
		93 Np Neptunium 93	93 Zn Zinc 30	106 Pd Palladium 46	106 Pd Palladium 46	197 Au Gold 79	208 Rn Radon 86						
		94 Pu Plutonium 94	94 Zn Zinc 30	106 Pd Palladium 46	106 Pd Palladium 46	197 Au Gold 79	208 Rn Radon 86						
		95 Am Americium 95	95 Zn Zinc 30	106 Pd Palladium 46	106 Pd Palladium 46	197 Au Gold 79	208 Rn Radon 86						
		96 Cm Curium 96	96 Zn Zinc 30	106 Pd Palladium 46	106 Pd Palladium 46	197 Au Gold 79	208 Rn Radon 86						
		97 Bk Berkelium 97	97 Zn Zinc 30	106 Pd Palladium 46	106 Pd Palladium 46	197 Au Gold 79	208 Rn Radon 86						
		98 Cf Californium 98	98 Zn Zinc 30	106 Pd Palladium 46	106 Pd Palladium 46	197 Au Gold 79	208 Rn Radon 86						
		99 Es Einsteinium 99	99 Zn Zinc 30	106 Pd Palladium 46	106 Pd Palladium 46	197 Au Gold 79	208 Rn Radon 86						
		100 Fm Fermium 100	100 Zn Zinc 30	106 Pd Palladium 46	106 Pd Palladium 46	197 Au Gold 79	208 Rn Radon 86						
		101 Md Mendelevium 101	101 Zn Zinc 30	106 Pd Palladium 46	106 Pd Palladium 46	197 Au Gold 79	208 Rn Radon 86						
		102 No Nobelium 102	102 Zn Zinc 30	106 Pd Palladium 46	106 Pd Palladium 46	197 Au Gold 79	208 Rn Radon 86						
		103 Lr Lawrencium 103	103 Zn Zinc 30	106 Pd Palladium 46	106 Pd Palladium 46	197 Au Gold 79	208 Rn Radon 86						
		104 Rf Rutherfordium 104	104 Zn Zinc 30	106 Pd Palladium 46	106 Pd Palladium 46	197 Au Gold 79	208 Rn Radon 86						
		105 Db Dubnium 105	105 Zn Zinc 30	106 Pd Palladium 46	106 Pd Palladium 46	197 Au Gold 79	208 Rn Radon 86						
		106 Sg Seaborgium 106	106 Zn Zinc 30	106 Pd Palladium 46	106 Pd Palladium 46	197 Au Gold 79	208 Rn Radon 86						
		107 Bh Bohrium 107	107 Zn Zinc 30	106 Pd Palladium 46	106 Pd Palladium 46	197 Au Gold 79	208 Rn Radon 86						
		108 Hs Hassium 108	108 Zn Zinc 30	106 Pd Palladium 46	106 Pd Palladium 46	197 Au Gold 79	208 Rn Radon 86						
		109 Mt Meitnerium 109	109 Zn Zinc 30	106 Pd Palladium 46	106 Pd Palladium 46	197 Au Gold 79	208 Rn Radon 86						
		110 Ds Darmstadtium 110	110 Zn Zinc 30	106 Pd Palladium 46	106 Pd Palladium 46	197 Au Gold 79	208 Rn Radon 86						
		111 Rg Roentgenium 111	111 Zn Zinc 30	106 Pd Palladium 46	106 Pd Palladium 46	197 Au Gold 79	208 Rn Radon 86						
		112 Cn Copernicium 112	112 Zn Zinc 30	106 Pd Palladium 46	106 Pd Palladium 46	197 Au Gold 79	208 Rn Radon 86						
		113 Nh Nihonium 113	113 Zn Zinc 30	106 Pd Palladium 46	106 Pd Palladium 46	197 Au Gold 79	208 Rn Radon 86						
		114 Fl Flerovium 114	114 Zn Zinc 30	106 Pd Palladium 46	106 Pd Palladium 46	197 Au Gold 79	208 Rn Radon 86						
		115 Mc Moscovium 115	115 Zn Zinc 30	106 Pd Palladium 46	106 Pd Palladium 46	197 Au Gold 79	208 Rn Radon 86						
		116 Lv Livermorium 116	116 Zn Zinc 30	106 Pd Palladium 46	106 Pd Palladium 46	197 Au Gold 79	208 Rn Radon 86						
		117 Ts Tennessine 117	117 Zn Zinc 30	106 Pd Palladium 46	106 Pd Palladium 46	197 Au Gold 79	208 Rn Radon 86						
		118 Og Oganesson 118	118 Zn Zinc 30	106 Pd Palladium 46	106 Pd Palladium 46	197 Au Gold 79	208 Rn Radon 86						
		119 Uu Ununennium 119	119 Zn Zinc 30	106 Pd Palladium 46	106 Pd Palladium 46	197 Au Gold 79	208 Rn Radon 86						
		120 Uub Unbibium 120	120 Zn Zinc 30	106 Pd Palladium 46	106 Pd Palladium 46	197 Au Gold 79	208 Rn Radon 86						
		121 Uut Untrium 121	121 Zn Zinc 30	106 Pd Palladium 46	106 Pd Palladium 46	197 Au Gold 79	208 Rn Radon 86						
		122 Uuq Unquadium 122	122 Zn Zinc 30	106 Pd Palladium 46	106 Pd Palladium 46	197 Au Gold 79	208 Rn Radon 86						
		123 Uuq Unquadium 123	123 Zn Zinc 30	106 Pd Palladium 46	106 Pd Palladium 46	197 Au Gold 79	208 Rn Radon 86						
		124 Uuq Unquadium 124	124 Zn Zinc 30	106 P									