

Please check the examination details below before entering your candidate information

Candidate surname

Other names

Centre Number

Candidate Number

--	--	--	--	--

--	--	--	--

Pearson Edexcel International Advanced Level

Time 1 hour 45 minutes

Paper
reference

WCH15/01

Chemistry

International Advanced Level

UNIT 5: Transition Metals and Organic

Nitrogen Chemistry

You must have:

Scientific calculator, Data Booklet, ruler

Total Marks

Instructions

- Use **black** ink or **black** ball-point pen.
- **Fill in the boxes** at the top of this page with your name, centre number and candidate number.
- Answer **all** questions.
- Answer the questions in the spaces provided
– *there may be more space than you need.*

Information

- The total mark for this paper is 90.
- The marks for **each** question are shown in brackets
– *use this as a guide as to how much time to spend on each question.*
- In the question marked with an **asterisk (*)**, marks will be awarded for your ability to structure your answer logically, showing how the points that you make are related or follow on from each other where appropriate.
- A Periodic Table is printed on the back cover of this paper.

Advice

- Read each question carefully before you start to answer it.
- Show all your working in calculations and include units where appropriate.
- Check your answers if you have time at the end.

Turn over ►

P69508A

©2022 Pearson Education Ltd.

L:1/1/1/1/



Pearson

SECTION A

Answer ALL the questions in this section.

You should aim to spend no more than 20 minutes on this section.

For each question, select one answer from A to D and put a cross in the box . If you change your mind, put a line through the box and then mark your new answer with a cross .

1 This question is about transition metal complexes.

(a) The bonding **within** the complex $[\text{Cu}(\text{NH}_3)_4(\text{H}_2\text{O})_2]^{2+}$ is (1)

- A covalent, dative covalent and ionic
- B covalent and dative covalent only
- C covalent only
- D dative covalent only

(b) Which complex is tetrahedral? (1)

- A $[\text{Pt}(\text{NH}_3)_2\text{Cl}_2]$
- B $[\text{Cu}(\text{H}_2\text{O})_4(\text{OH})_2]$
- C $[\text{Cu}(\text{NH}_3)_4(\text{H}_2\text{O})_2]^{2+}$
- D $[\text{CoCl}_4]^{2-}$

(c) Which complex contains a bidentate ligand? (1)

- A $[\text{Co}(\text{NH}_2\text{CH}_2\text{CH}_2\text{NHCH}_2\text{CH}_2\text{NH}_2)_2]^{3+}$
- B $[\text{Cu}(\text{NH}_3)_4(\text{H}_2\text{O})_2]^{2+}$
- C $[\text{Ni}(\text{NH}_2\text{CH}_2\text{CH}_2\text{NH}_2)_3]^{2+}$
- D $[\text{Mn}(\text{EDTA})]^{2-}$

(Total for Question 1 = 3 marks)

Use this space for rough working. Anything you write in this space will gain no credit.



2 A hydrogen-oxygen fuel cell is used to provide electrical energy for an electric motor in a car.

(a) The electrolyte in the fuel cell is acidic. What is the half-equation at the anode? (1)

- A $\frac{1}{2}\text{O}_2(\text{g}) + 2\text{H}^+(\text{aq}) + 2\text{e}^- \rightarrow \text{H}_2\text{O}(\text{l})$
- B $\text{H}_2\text{O}(\text{l}) \rightarrow \frac{1}{2}\text{O}_2(\text{g}) + 2\text{H}^+(\text{aq}) + 2\text{e}^-$
- C $\text{H}_2(\text{g}) \rightarrow 2\text{H}^+(\text{aq}) + 2\text{e}^-$
- D $2\text{H}^+(\text{aq}) + 2\text{e}^- \rightarrow \text{H}_2(\text{g})$

(b) Hydrogen-oxygen fuel cells have advantages over methanol-oxygen fuel cells in vehicles.

Which of these is an advantage of the hydrogen-oxygen fuel cell? (1)

- A more energy is released per mole of fuel used
- B emissions do not contribute to climate change
- C hydrogen is easier to store than methanol
- D only hydrogen can be obtained from renewable resources

(Total for Question 2 = 2 marks)

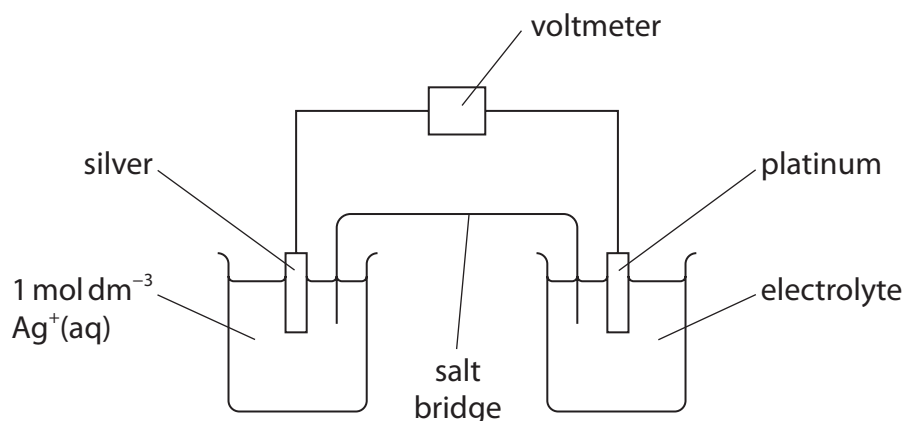
Use this space for rough working. Anything you write in this space will gain no credit.



- 3 An electrochemical cell is made from the electrode systems shown by these half-equations.



The apparatus used to measure the value for E_{cell}^\ominus under standard conditions is shown.



- (a) Which silver compound could be used as the electrolyte in the left-hand half-cell? (1)

- A silver nitrate
- B silver hydroxide
- C silver chloride
- D silver carbonate

- (b) The electrolyte in the right-hand half-cell is prepared using equal volumes of (1)

- A 1 mol dm⁻³ acidified VO₂⁺(aq) and 1 mol dm⁻³ acidified VO²⁺(aq)
- B 2 mol dm⁻³ acidified VO₂⁺(aq) and 2 mol dm⁻³ acidified VO²⁺(aq)
- C 1 mol dm⁻³ VO₂⁺(aq) and 1 mol dm⁻³ HCl(aq)
- D 1 mol dm⁻³ VO²⁺(aq) and 1 mol dm⁻³ HCl(aq)



(c) Which is the equation for the overall cell reaction under standard conditions?

(1)

- A** $\text{VO}^{2+}(\text{aq}) + \text{Ag}^+(\text{aq}) + \text{H}_2\text{O}(\text{l}) \rightarrow \text{VO}_2^+(\text{aq}) + \text{Ag}(\text{s}) + 2\text{H}^+(\text{aq})$
- B** $\text{VO}_2^+(\text{aq}) + \text{Ag}(\text{s}) + 2\text{H}^+(\text{aq}) \rightarrow \text{VO}^{2+}(\text{aq}) + \text{Ag}^+(\text{aq}) + \text{H}_2\text{O}(\text{l})$
- C** $\text{VO}^{2+}(\text{aq}) + 3\text{Ag}(\text{s}) + 2\text{H}^+(\text{aq}) \rightarrow \text{VO}_2^+(\text{aq}) + 3\text{Ag}^+(\text{aq}) + \text{H}_2\text{O}(\text{l})$
- D** $\text{VO}_2^+(\text{aq}) + 3\text{Ag}^+(\text{aq}) + \text{H}_2\text{O}(\text{l}) \rightarrow \text{VO}^{2+}(\text{aq}) + 3\text{Ag}(\text{s}) + 2\text{H}^+(\text{aq})$

(d) Which is the value of $E_{\text{cell}}^{\ominus}$ in volts?

(1)

- A** -1.80
- B** -0.20
- C** $+0.20$
- D** $+1.80$

(e) Which is the cell diagram for this cell, using the conventional representation of half-cells?

(1)

- A** $\text{Ag}(\text{s}) \mid \text{Ag}^+(\text{aq}) \parallel [\text{VO}_2^+(\text{aq}) + 2\text{H}^+(\text{aq})] \mid [\text{VO}^{2+}(\text{aq}) + \text{H}_2\text{O}(\text{l})] \mid \text{Pt}(\text{s})$
- B** $\text{Ag}(\text{s}) \mid \text{Ag}^+(\text{aq}) \parallel [\text{VO}_2^+(\text{aq}) + 2\text{H}^+(\text{aq})], [\text{VO}^{2+}(\text{aq}) + \text{H}_2\text{O}(\text{l})] \mid \text{Pt}(\text{s})$
- C** $\text{Ag}(\text{s}) \mid \text{Ag}^+(\text{aq}) \parallel [\text{VO}^{2+}(\text{aq}) + \text{H}_2\text{O}(\text{l})] \mid [\text{VO}_2^+(\text{aq}) + 2\text{H}^+(\text{aq})] \mid \text{Pt}(\text{s})$
- D** $\text{Ag}(\text{s}) \mid \text{Ag}^+(\text{aq}) \parallel [\text{VO}^{2+}(\text{aq}) + \text{H}_2\text{O}(\text{l})], [\text{VO}_2^+(\text{aq}) + 2\text{H}^+(\text{aq})] \mid \text{Pt}(\text{s})$

(Total for Question 3 = 5 marks)

Use this space for rough working. Anything you write in this space will gain no credit.



- 4 A mass of 4.179 g of hydrated iron(III) sulfate, $\text{Fe}_2(\text{SO}_4)_3 \cdot \text{H}_2\text{O}$, was dissolved in deionised water and the solution made up to 200 cm^3 .

What is the concentration of sulfate ions, SO_4^{2-} , in the solution, in mol dm^{-3} ?

[Molar mass of $\text{Fe}_2(\text{SO}_4)_3 \cdot \text{H}_2\text{O} = 417.9 \text{ g mol}^{-1}$]

- A 0.01
- B 0.05
- C 0.10
- D 0.15

(Total for Question 4 = 1 mark)

Use this space for rough working. Anything you write in this space will gain no credit.

DO NOT WRITE IN THIS AREA

DO NOT WRITE IN THIS AREA

DO NOT WRITE IN THIS AREA

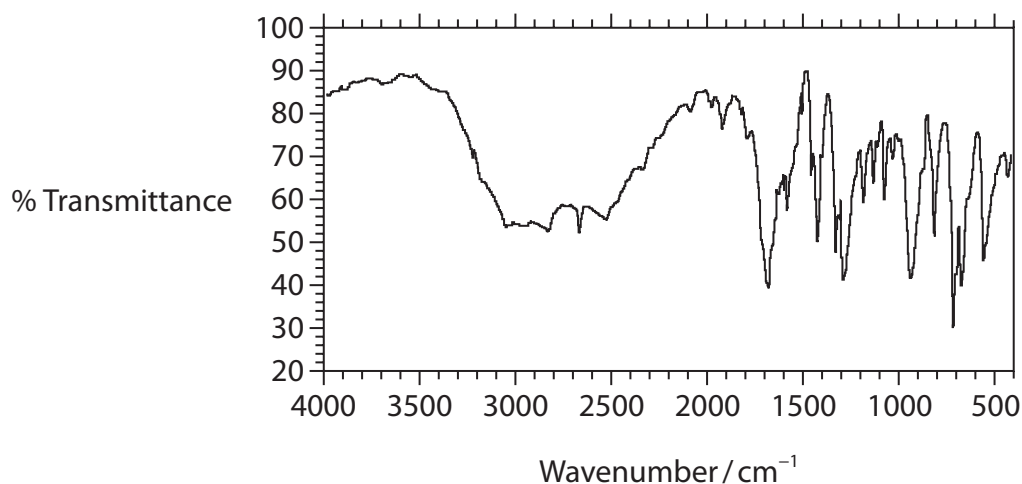


DO NOT WRITE IN THIS AREA

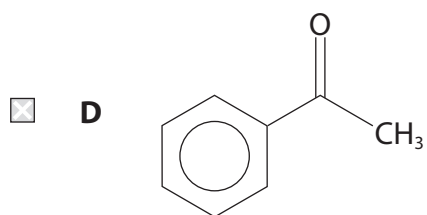
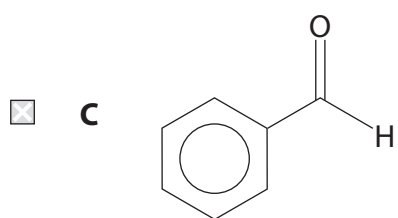
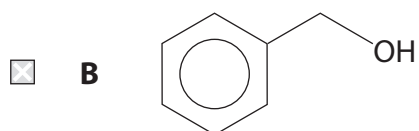
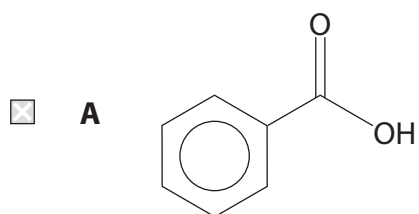
DO NOT WRITE IN THIS AREA

DO NOT WRITE IN THIS AREA

5 The infrared spectrum of a compound **X** is shown.



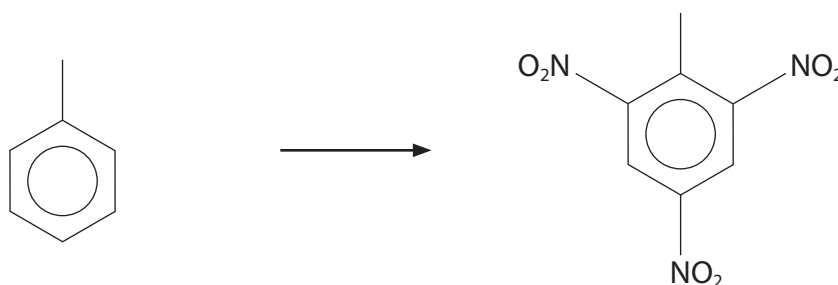
Which could be compound **X**?



(Total for Question 5 = 1 mark)



- 6 Methylbenzene reacts with a mixture of concentrated nitric acid and concentrated sulfuric acid to form 2,4,6-trinitromethylbenzene.

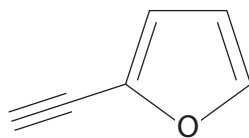


- (a) What is the number of peaks in the ^{13}C NMR spectrum of methylbenzene? (1)
- A seven
- B six
- C five
- D four
- (b) What type of reaction takes place? (1)
- A nucleophilic addition
- B nucleophilic substitution
- C electrophilic addition
- D electrophilic substitution
- (c) Which expression shows the mass in grams of 2,4,6-trinitromethylbenzene formed from 10 g of methylbenzene if the yield of the reaction is 85%? (1)
- [M_r values: methylbenzene = 92 2,4,6-trinitromethylbenzene = 227]
- A $(10 \times 85 \times 227) \div (92 \times 100)$
- B $(10 \times 100 \times 227) \div (92 \times 85)$
- C $(10 \times 100 \times 227) \div (92 \times 115)$
- D $(10 \times 115 \times 227) \div (92 \times 100)$

(Total for Question 6 = 3 marks)



- 7 The mass spectrum of the compound shown is obtained using a high resolution mass spectrometer.



What is the mass to charge ratio, m/z , of the molecular ion of this compound?

[A_r values: H = 1.0078 C = 12.0000 O = 15.9949]

- A 92.0261
- B 92.0312
- C 93.0339
- D 93.0390

(Total for Question 7 = 1 mark)

Use this space for rough working. Anything you write in this space will gain no credit.

DO NOT WRITE IN THIS AREA

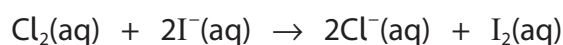
DO NOT WRITE IN THIS AREA

DO NOT WRITE IN THIS AREA

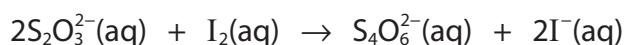


- 8 A group of students carry out an experiment to find the concentration of chlorine, $\text{Cl}_2(\text{aq})$, in a solution.

Excess potassium iodide solution is added to a 10.0 cm^3 sample of the chlorine solution.



The iodine produced is titrated with a solution of thiosulfate ions of known concentration, using starch indicator.



The concentration of the $\text{Cl}_2(\text{aq})$ is between 0.038 and $0.042 \text{ mol dm}^{-3}$.

- (a) What concentration of thiosulfate ions, in mol dm^{-3} , is required to give a titre of approximately 20 cm^3 ? (1)

- A 0.010
 B 0.020
 C 0.040
 D 0.080

- (b) What is the most suitable volume of 0.1 mol dm^{-3} potassium iodide solution, in cm^3 , to add to the 10.0 cm^3 of chlorine solution? (1)

- A 7.6
 B 8.0
 C 8.4
 D 10.0

- (c) What is the colour change at the end-point of the titration? (1)

- A colourless to pale yellow
 B pale yellow to colourless
 C colourless to blue-black
 D blue-black to colourless

(Total for Question 8 = 3 marks)



9 The formulae of four ions are shown.

Formula of ion
CrO_4^{2-}
AlO_2^-
$[\text{Fe}(\text{CN})_6]^{4-}$
$[\text{CrCl}_2(\text{H}_2\text{O})_4]^+$

How many of these ions contain a metal with an oxidation number of +3?

- A one
- B two
- C three
- D four

(Total for Question 9 = 1 mark)

TOTAL FOR SECTION A = 20 MARKS



SECTION B

Answer ALL the questions. Write your answers in the spaces provided.

10 This question is about silver and silver compounds.

Glass decorations are made reflective by coating their inner surface with silver. This is achieved by using the reaction between silver nitrate solution, ammonia and glucose, under alkaline conditions.

Initially the colourless complex ion diamminesilver(I), $[\text{Ag}(\text{NH}_3)_2]^+$, forms.

(a) (i) Explain the shape of $[\text{Ag}(\text{NH}_3)_2]^+$.

(3)

.....

.....

.....

.....

.....

.....

.....

(ii) Explain why $[\text{Ag}(\text{NH}_3)_2]^+$ is colourless.

(2)

.....

.....

.....

.....

.....

.....

.....

DO NOT WRITE IN THIS AREA

DO NOT WRITE IN THIS AREA


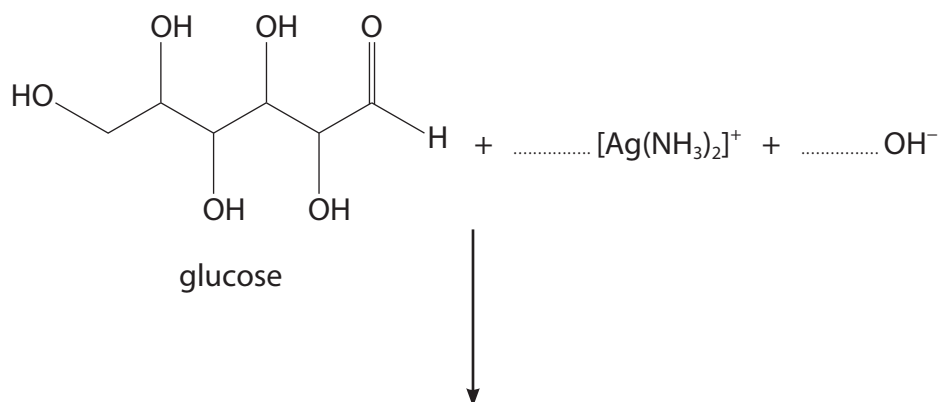
DO NOT WRITE IN THIS AREA



(b) The diamminesilver(I) complex then reacts with glucose forming silver and an organic compound, **Y**. Two other products also form.

(i) Complete the equation for the reaction.

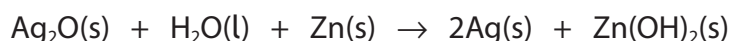
(2)



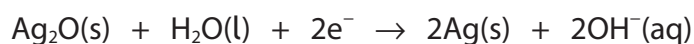
(ii) Draw the structure of **Y**.

(1)

(c) The overall reaction in a silver cell used in watch batteries is



The half-equation for the reaction at the positive electrode is



Deduce the half-equation for the reaction at the negative electrode.
State symbols are **not** required.

(1)

(Total for Question 10 = 9 marks)

DO NOT WRITE IN THIS AREA

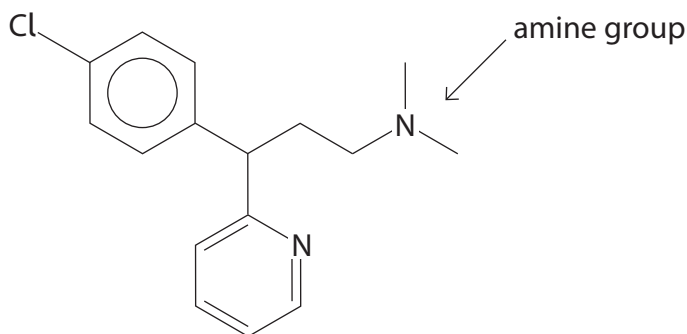
DO NOT WRITE IN THIS AREA

DO NOT WRITE IN THIS AREA



P 6 9 5 0 8 A 0 1 3 3 2

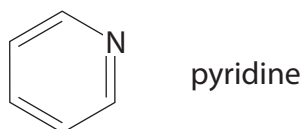
11 Chlorpheniramine is an amine used in the treatment of hayfever.



(a) Deduce the classification of the labelled amine group.

(1)

(b) The compound pyridine is used in the synthesis of chlorpheniramine.



Like many amines, pyridine is miscible with water and the solution formed is alkaline.

Explain **each** of these properties of pyridine.

(4)

DO NOT WRITE IN THIS AREA

DO NOT WRITE IN THIS AREA

DO NOT WRITE IN THIS AREA

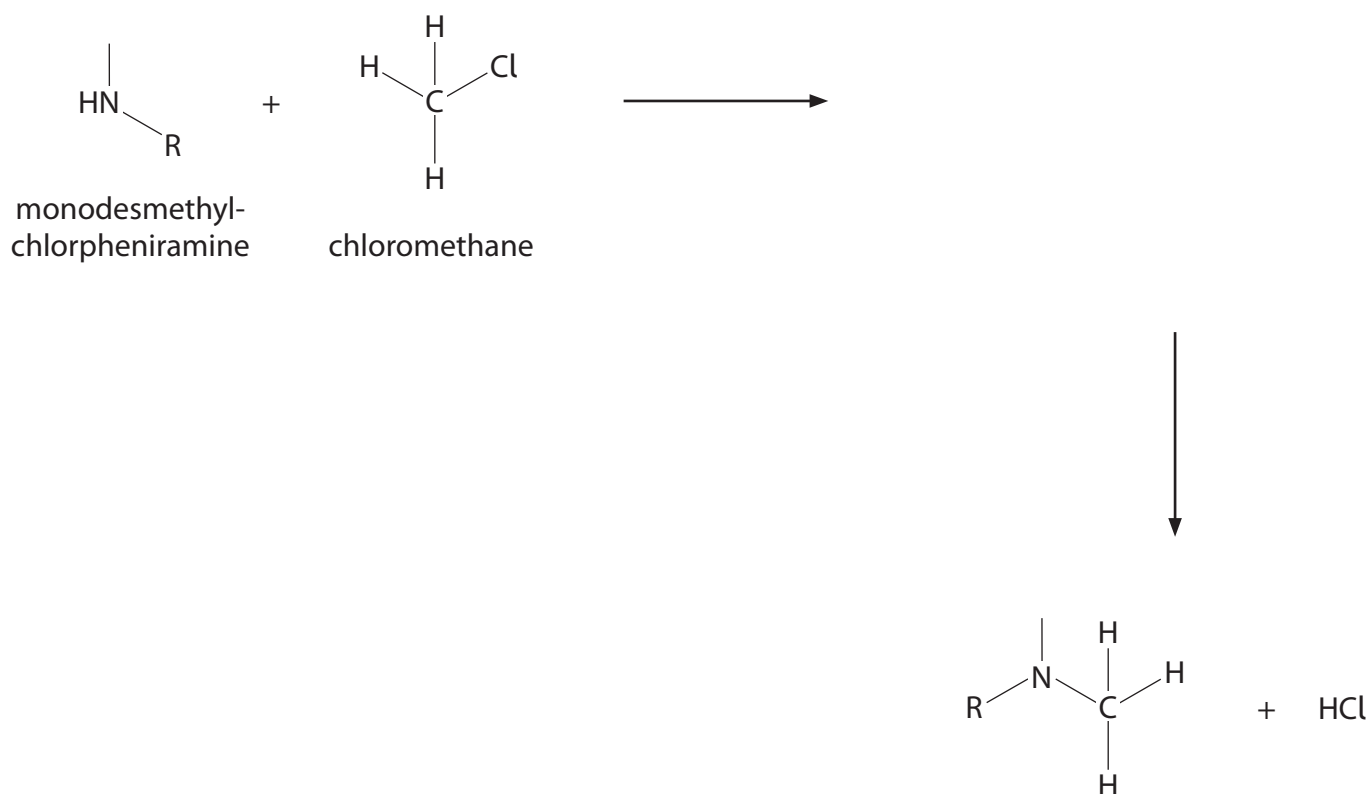


(c) A student suggested that the final step in the synthesis of chlorpheniramine starts with the reaction between monodesmethylchlorpheniramine and chloromethane.

Assuming the reaction is similar to that between ammonia and chloromethane, complete the mechanism for this proposed reaction. Some of the organic structures shown have been simplified.

Include curly arrows, and any relevant dipoles and lone pairs of electrons.

(4)



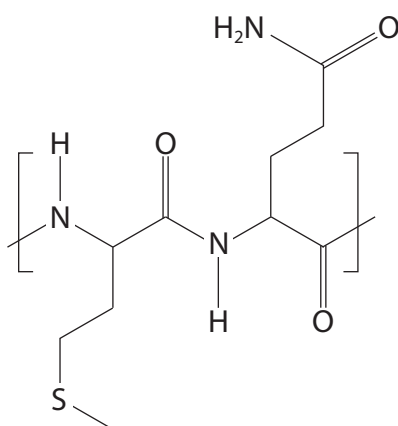
(Total for Question 11 = 9 marks)



P 6 9 5 0 8 A 0 1 5 3 2

12 This question is about polymers.

- (a) The diagram shows part of the structure of a polymer formed by a **condensation** reaction between two amino acids.



Predict the structures of the two monomers that produce this polymer.

(2)

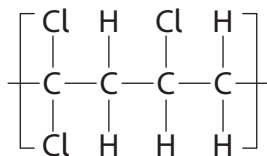
DO NOT WRITE IN THIS AREA

DO NOT WRITE IN THIS AREA

DO NOT WRITE IN THIS AREA



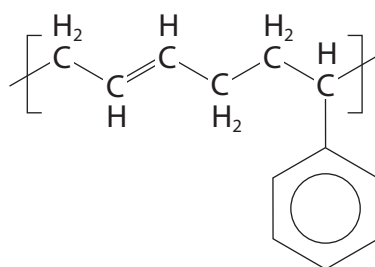
- (b) The diagram shows a repeat unit of an addition polymer used in some food wraps. It is formed from two different monomers.



Deduce the structures of the two monomers that produce this polymer.

(2)

- (c) A synthetic rubber polymer has the structure shown.



The molar mass of the synthetic rubber is approximately $300\,000\text{ g mol}^{-1}$.

Calculate the approximate number of repeat units in the polymer.

(2)

(Total for Question 12 = 6 marks)



13 The hydride of arsenic, arsine, is a toxic gas used in the production of semiconductors.

(a) Draw a dot-and-cross diagram for arsine, AsH_3 .

(1)

(b) Arsine is a reducing agent and reacts with cerium(IV) sulfate solution, forming arsenic.

The data from an experiment are shown.

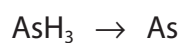
Volume of arsine gas = 350 cm^3 at 115 000 Pa and 20°C

Volume of cerium(IV) sulfate solution = 488 cm^3

Concentration of cerium(IV) sulfate solution = $0.102 \text{ mol dm}^{-3}$

(i) Complete the half-equation.

(1)



(ii) Calculate the final oxidation state of the cerium ion formed in the reaction.

(6)

DO NOT WRITE IN THIS AREA

DO NOT WRITE IN THIS AREA

DO NOT WRITE IN THIS AREA

(Total for Question 13 = 8 marks)



P 6 9 5 0 8 A 0 1 9 3 2

***14** Describe the reactions of separate samples of aqueous cobalt(II) sulfate with aqueous sodium hydroxide, excess aqueous ammonia and concentrated hydrochloric acid.

For each reaction, link your description to an appropriate equation.
State symbols are not required.

(6)

Dotted lines for writing answers.

DO NOT WRITE IN THIS AREA

DO NOT WRITE IN THIS AREA

DO NOT WRITE IN THIS AREA



DO NOT WRITE IN THIS AREA

DO NOT WRITE IN THIS AREA

DO NOT WRITE IN THIS AREA

(Total for Question 14 = 6 marks)



P 6 9 5 0 8 A 0 2 1 3 2

DO NOT WRITE IN THIS AREA

DO NOT WRITE IN THIS AREA

DO NOT WRITE IN THIS AREA

BLANK PAGE



DO NOT WRITE IN THIS AREA

DO NOT WRITE IN THIS AREA

DO NOT WRITE IN THIS AREA

15 A compound **Q** contains the elements carbon, hydrogen and oxygen only.

- (a) Combustion analysis of 4.91 g of **Q** produces 14.6 g of carbon dioxide and 3.58 g of water.

Show that the molecular formula of **Q** is $C_{10}H_{12}O$.

You **must** show all your working.

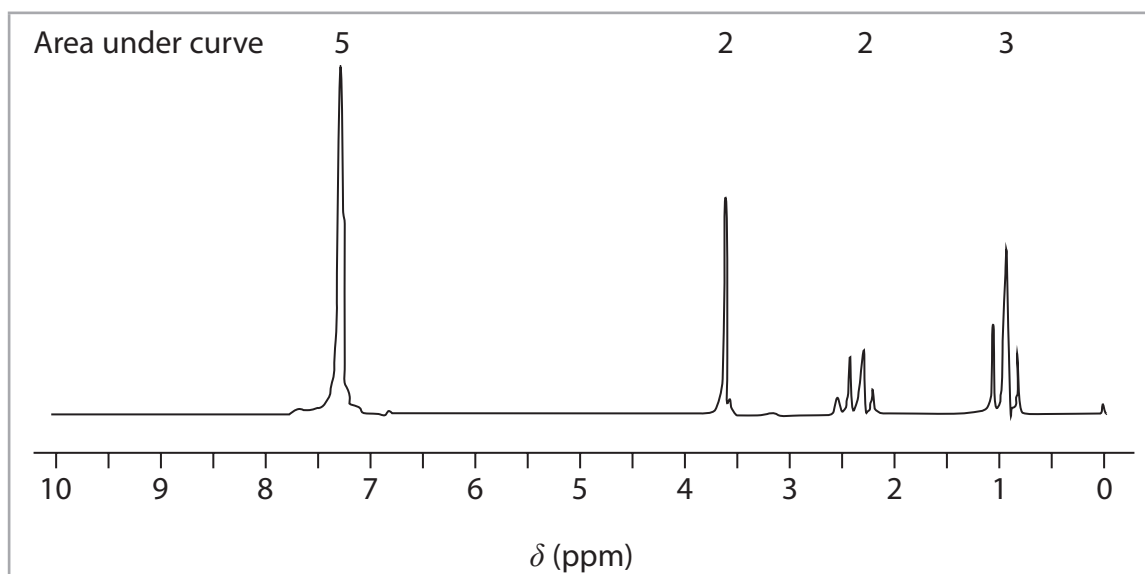
[M_r of **Q** = 148]

(4)



P 6 9 5 0 8 A 0 2 3 3 2

(b) The high resolution proton NMR spectrum of **Q** is shown.



Deduce the structure of **Q**. Justify your answer by considering the relative peak areas, the chemical shifts and the splitting patterns.

You will find it helpful to refer to page 8 of the Data Booklet.

The peak at 3.6 ppm is due to a proton environment on a carbon bonded to the benzene ring. The peak is not where it might be expected from the general values in the Data Booklet.

(7)



DO NOT WRITE IN THIS AREA

DO NOT WRITE IN THIS AREA

DO NOT WRITE IN THIS AREA

(Total for Question 15 = 11 marks)

TOTAL FOR SECTION B = 49 MARKS

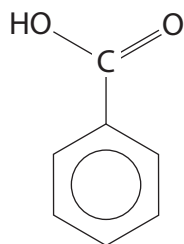


P 6 9 5 0 8 A 0 2 5 3 2

SECTION C

Answer ALL the questions. Write your answers in the spaces provided.

16 Benzoic acid is a white crystalline solid with the structure shown.



It is found in many plants as it is an important building block for the biosynthesis of a variety of compounds, such as plant hormones and attractants for pollinators.

The role of benzoic acid in the chemical industry is also widespread and approximately 500 000 tonnes are produced annually. It is used in the synthesis of many compounds, including medicines, dyes and insect repellents.

Such synthetic dyes are often classified as aryl azo dyes. These dyes have a range of vivid colours and a wide range of uses in many industries, including food and textiles. Their synthesis involves the formation of a diazonium ion. This ion then reacts with a phenol in a coupling reaction, to form the dye. The relative simplicity of the reactions involved and ready availability of starting materials make azo dyes cheap to produce.

Salts of benzoic acid, such as calcium benzoate and sodium benzoate, are used in the food industry as preservatives.

DO NOT WRITE IN THIS AREA

DO NOT WRITE IN THIS AREA

DO NOT WRITE IN THIS AREA



- (a) Devise a reaction scheme to produce benzoic acid from benzene, via bromobenzene and then a Grignard reagent.

Include the reagents and essential conditions for each step and give the name or structure of each of the intermediate compounds.

Details of practical procedures and reaction mechanisms are **not** required.

(6)

DO NOT WRITE IN THIS AREA

DO NOT WRITE IN THIS AREA

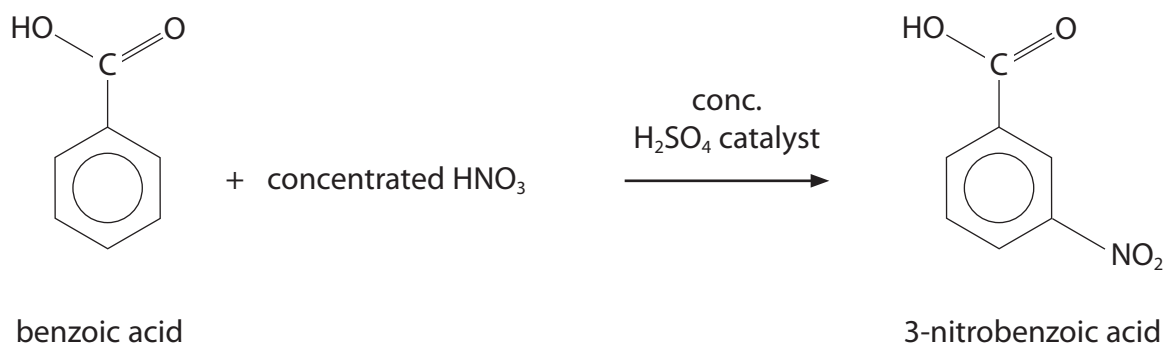
DO NOT WRITE IN THIS AREA



P 6 9 5 0 8 A 0 2 7 3 2

(b) Benzoic acid can be used in the synthesis of azo dyes.

- (i) In Step 1, benzoic acid reacts with concentrated nitric acid to form 3-nitrobenzoic acid.



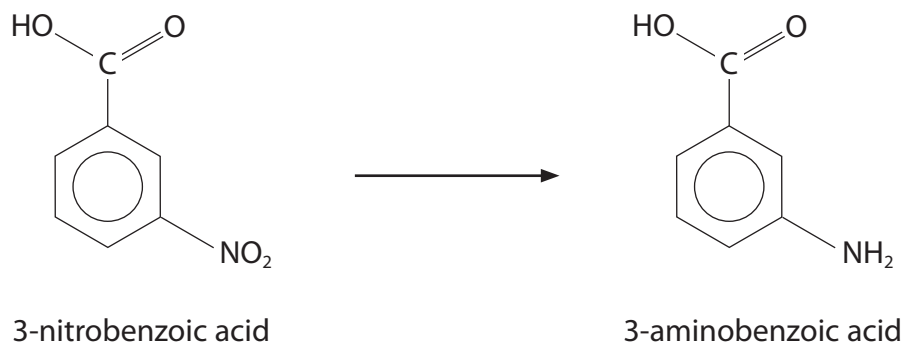
Draw the mechanism for the reaction, using appropriate curly arrows.

Include equations showing the role of the catalyst and how it is regenerated.

(5)



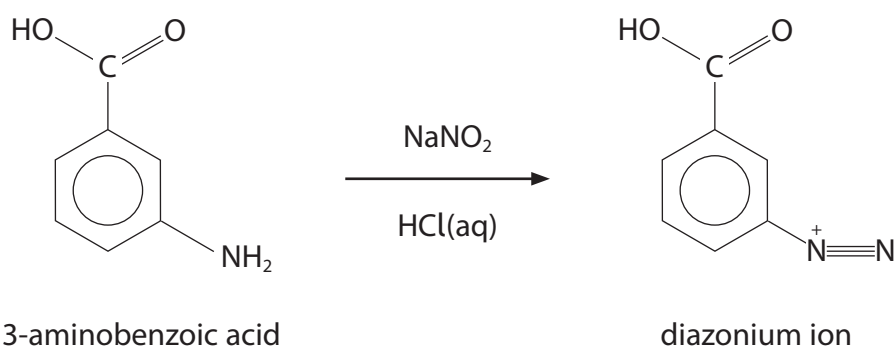
(ii) In Step 2, the 3-nitrobenzoic acid reacts to form 3-aminobenzoic acid.



State the reagents required for this reaction.

(1)

(iii) In Step 3, the 3-aminobenzoic acid reacts with sodium nitrite and dilute hydrochloric acid, forming a diazonium ion.



State a temperature at which this reaction should take place, giving **one** reason for your answer.

(2)

DO NOT WRITE IN THIS AREA

DO NOT WRITE IN THIS AREA

DO NOT WRITE IN THIS AREA



(iv) Draw the structure of the azo dye formed when the diazonium ion reacts with phenol.

(1)

DO NOT WRITE IN THIS AREA

DO NOT WRITE IN THIS AREA

DO NOT WRITE IN THIS AREA



- (c) Hydrated calcium benzoate is used as a preservative in soft drinks.
It has the formula $\text{Ca}(\text{C}_6\text{H}_5\text{COO})_2 \cdot x\text{H}_2\text{O}$.

2.60 g of hydrated calcium benzoate was dissolved in deionised water.
Excess lead(II) nitrate solution was added, forming a precipitate of
lead(II) benzoate, $\text{Pb}(\text{C}_6\text{H}_5\text{COO})_2(\text{s})$. This precipitate was removed and dried.
The mass of the dry solid was 3.89 g.

Calculate the molar mass of hydrated calcium benzoate and hence deduce the
value of x .

(6)

(Total for Question 16 = 21 marks)

TOTAL FOR SECTION C = 21 MARKS
TOTAL FOR PAPER = 90 MARKS

DO NOT WRITE IN THIS AREA

DO NOT WRITE IN THIS AREA

DO NOT WRITE IN THIS AREA



P 6 9 5 0 8 A 0 3 1 3 2

The Periodic Table of Elements

1 2 3 4 5 6 7 0 (8) (18)

1.0
H
hydrogen
1

Key

relative atomic mass
atomic symbol
name
atomic (proton) number

(1) (2)

6.9
Li
lithium
3

9.0
Be
beryllium
4

23.0
Na
sodium
11

24.3
Mg
magnesium
12

39.1
K
potassium
19

85.5
Rb
rubidium
37

132.9
Cs
caesium
55

[223]
Fr
francium
87

40.1
Ca
calcium
20

87.6
Sr
strontium
38

137.3
Ba
barium
56

[226]
Ra
radium
88

45.0
Sc
scandium
21

88.9
Y
yttrium
39

138.9
La*
lanthanum
57

[227]
Ac*
actinium
89

47.9
Ti
titanium
22

91.2
Zr
zirconium
40

178.5
Hf
hafnium
72

[261]
Rf
rutherfordium
104

50.9
V
vanadium
23

92.9
Nb
niobium
41

180.9
Ta
tantalum
73

[262]
Db
dubnium
105

52.0
Cr
chromium
24

95.9
Mo
molybdenum
42

183.8
W
tungsten
74

[266]
Sg
seaborgium
106

54.9
Mn
manganese
25

[98]
Tc
technetium
43

186.2
Re
rhenium
75

[264]
Bh
bohrium
107

55.8
Fe
iron
26

101.1
Ru
ruthenium
44

190.2
Os
osmium
76

[277]
Hs
hassium
108

58.9
Co
cobalt
27

102.9
Rh
rhodium
45

192.2
Ir
iridium
77

[268]
Mt
meitnerium
109

58.7
Ni
nickel
28

106.4
Pd
palladium
46

195.1
Pt
platinum
78

[271]
Ds
darmstadtium
110

63.5
Cu
copper
29

107.9
Ag
silver
47

197.0
Au
gold
79

[272]
Rg
roentgenium
111

65.4
Zn
zinc
30

112.4
Cd
cadmium
48

200.6
Hg
mercury
80

69.7
Ga
gallium
31

114.8
In
indium
49

204.4
Tl
thallium
81

72.6
Ge
germanium
32

118.7
Sn
tin
50

207.2
Pb
lead
82

74.9
As
arsenic
33

121.8
Sb
antimony
51

209.0
Bi
bismuth
83

79.0
Se
selenium
34

127.6
Te
tellurium
52

[209]
Po
polonium
84

79.9
Br
bromine
35

126.9
I
iodine
53

[210]
At
astatine
85

83.8
Kr
krypton
36

131.3
Xe
xenon
54

[222]
Rn
radon
86

10.8
B
boron
5

27.0
Al
aluminium
13

12.0
C
carbon
6

28.1
Si
silicon
14

14.0
N
nitrogen
7

31.0
P
phosphorus
15

16.0
O
oxygen
8

32.1
S
sulfur
16

19.0
F
fluorine
9

35.5
Cl
chlorine
17

20.2
Ne
neon
10

39.9
Ar
argon
18

4.0
He
helium
2

Elements with atomic numbers 112-116 have been reported but not fully authenticated

140 Ce cerium 58	141 Pr praseodymium 59	144 Nd neodymium 60	[147] Pm promethium 61	150 Sm samarium 62	152 Eu europium 63	157 Gd gadolinium 64	159 Tb terbium 65	163 Dy dysprosium 66	165 Ho holmium 67	167 Er erbium 68	169 Tm thulium 69	173 Yb ytterbium 70	175 Lu lutetium 71
232 Th thorium 90	[231] Pa protactinium 91	238 U uranium 92	[237] Np neptunium 93	[242] Pu plutonium 94	[243] Am americium 95	[247] Cm curium 96	[245] Bk berkelium 97	[251] Cf californium 98	[254] Es einsteinium 99	[253] Fm fermium 100	[256] Md mendelevium 101	[254] No nobelium 102	[257] Lr lawrencium 103

* Lanthanide series

* Actinide series

DO NOT WRITE IN THIS AREA

DO NOT WRITE IN THIS AREA

DO NOT WRITE IN THIS AREA

