

Please check the examination details below before entering your candidate information

Candidate surname

Other names

Centre Number

Candidate Number

--	--	--	--	--

--	--	--	--

Pearson Edexcel International Advanced Level

Time 1 hour 30 minutes

**Paper
reference**

WCH11/01

Chemistry

**International Advanced Subsidiary/Advanced Level
Unit 1: Structure, Bonding and Introduction to Organic
Chemistry**

You must have:
Scientific calculator

Total Marks

Instructions

- Use **black** ink or **black** ball-point pen.
- **Fill in the boxes** at the top of this page with your name, centre number and candidate number.
- Answer **all** questions.
- Answer the questions in the spaces provided – *there may be more space than you need.*

Information

- The total mark for this paper is 80.
- The marks for **each** question are shown in brackets – *use this as a guide as to how much time to spend on each question.*
- You will be assessed on your ability to organise and present information, ideas, descriptions and arguments clearly and logically, including your use of grammar, punctuation and spelling.
- A Periodic Table is printed on the back cover of this paper.

Advice

- Read each question carefully before you start to answer it.
- Show all your working in calculations and include units where appropriate.
- Check your answers if you have time at the end.

Turn over ►

P67127A

©2022 Pearson Education Ltd.

L:1/1/1/




Pearson

SECTION A

Answer ALL the questions in this section.

You should aim to spend no more than 20 minutes on this section.

For each question, select one answer from A to D and put a cross . If you change your mind, put a line through the box and then mark your new answer with a cross .

- 1 Element **X** is in Group 2 of the Periodic Table and element **Y** is in Group 7. **X** and **Y** are not the symbols of the elements.

(a) What is the formula of the compound formed from **X** and **Y**?

(1)

- A** XY
- B** X_2Y
- C** XY_2
- D** X_2Y_2

(b) Under what conditions does the compound formed from **X** and **Y** conduct electricity?

(1)

- A** in the solid state and in the liquid state and in aqueous solution
- B** in the solid state and in aqueous solution only
- C** in the solid state and in the liquid state only
- D** in the liquid state and in aqueous solution only

(Total for Question 1 = 2 marks)

- 2 Which of these compounds would you expect to have the highest melting temperature?

- A** NaCl
- B** NaF
- C** KCl
- D** KF

(Total for Question 2 = 1 mark)

Use this space for any rough working. Anything you write in this space will gain no credit.



3 A drop of an aqueous solution of green copper(II) chromate(VI) is placed in the centre of a strip of damp filter paper.

The ends of the filter paper are connected to a DC power supply.

What is observed after a few minutes?

- A a green colour has moved to the negative end
- B a green colour has moved to the positive end
- C a yellow colour has moved to the positive end and a blue colour to the negative end
- D a blue colour has moved to the positive end and a yellow colour to the negative end

(Total for Question 3 = 1 mark)

4 Which of these isoelectronic ions has the smallest ionic radius?

- A N^{3-}
- B F^-
- C Na^+
- D Al^{3+}

(Total for Question 4 = 1 mark)

5 Which properties of a **cation** result in the greatest polarising power?

- A large radius and large charge
- B large radius and small charge
- C small radius and small charge
- D small radius and large charge

(Total for Question 5 = 1 mark)

6 Which properties of an **anion** result in it being most easily polarised?

- A large radius and large charge
- B large radius and small charge
- C small radius and small charge
- D small radius and large charge

(Total for Question 6 = 1 mark)



7 What is the ionic equation for the reaction between aqueous solutions of barium nitrate and sodium sulfate?

- A $\text{Na}^+(\text{aq}) + \text{NO}_3^-(\text{aq}) \rightarrow \text{NaNO}_3(\text{s})$
- B $2\text{Ba}^+(\text{aq}) + \text{SO}_4^{2-}(\text{aq}) \rightarrow \text{Ba}_2\text{SO}_4(\text{s})$
- C $\text{Na}^{2+}(\text{aq}) + 2\text{NO}_3^-(\text{aq}) \rightarrow \text{Na}(\text{NO}_3)_2(\text{s})$
- D $\text{Ba}^{2+}(\text{aq}) + \text{SO}_4^{2-}(\text{aq}) \rightarrow \text{BaSO}_4(\text{s})$

(Total for Question 7 = 1 mark)

8 Which of these molecules is **not** polar?

- A CO_2
- B HCl
- C H_2O
- D NH_3

(Total for Question 8 = 1 mark)

9 The concentration of nitrogen dioxide in a sample of air is 0.5 ppm.

What is the percentage of nitrogen dioxide molecules in this sample of air?

- A 0.5 %
- B 0.005 %
- C 0.00005 %
- D 0.0000005 %

(Total for Question 9 = 1 mark)

Use this space for any rough working. Anything you write in this space will gain no credit.



10 Ethane reacts with bromine in the presence of ultraviolet radiation.

(a) What is the equation for the reaction?

(1)

- A $C_2H_6 + Br_2 \rightarrow C_2H_4Br_2 + H_2$
- B $C_2H_6 + Br_2 \rightarrow C_2H_5Br + HBr$
- C $C_2H_6 + Br_2 \rightarrow 2CH_3Br$
- D $C_2H_6 + Br_2 \rightarrow CH_4 + CH_2Br_2$

(b) The ultraviolet radiation is needed for

(1)

- A homolytic breaking of a Br—Br bond
- B heterolytic breaking of a Br—Br bond
- C homolytic breaking of a C—H bond
- D heterolytic breaking of a C—H bond

(Total for Question 10 = 2 marks)

11 All alkanes have the same

- A empirical formula
- B general formula
- C molecular formula
- D structural formula

(Total for Question 11 = 1 mark)

12 A single molecule of decane, $C_{10}H_{22}$, is cracked.

Which of these mixtures could **not** be formed?

- A pentene and pentane
- B ethene, butene and butane
- C propene, propane and butene
- D hexene and propane

(Total for Question 12 = 1 mark)

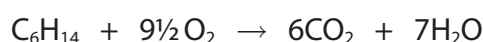


13 How many structural isomers have the formula $C_3H_6Cl_2$?

- A 2
- B 3
- C 4
- D 5

(Total for Question 13 = 1 mark)

14 The equation for the complete combustion of hexane is shown.



How many molecules of carbon dioxide are formed when 2×10^{-3} mol of hexane undergoes complete combustion?

[Avogadro constant $L = 6.02 \times 10^{23} \text{ mol}^{-1}$]

- A 1.20×10^{21}
- B 7.22×10^{21}
- C 8.43×10^{21}
- D 3.18×10^{23}

(Total for Question 14 = 1 mark)

15 Which pollutant **cannot** form when alkane fuels are burned in car engines?

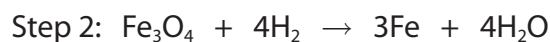
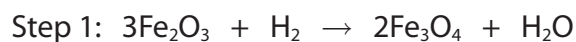
- A hydrogen chloride
- B sulfur dioxide
- C carbon particulates
- D carbon monoxide

(Total for Question 15 = 1 mark)

Use this space for any rough working. Anything you write in this space will gain no credit.



16 Iron(III) oxide is reduced by hydrogen in a two-step process.



What is the maximum mass of iron that could be produced from 39.9 tonnes of Fe_2O_3 ?

[A_r values: H = 1.0 O = 16.0 Fe = 55.8]

- A 6.98 tonnes
- B 13.95 tonnes
- C 27.90 tonnes
- D 41.85 tonnes

(Total for Question 16 = 1 mark)

17 Which of these solutions contains the greatest number of ions?

- A 20.0 cm³ of 0.5 mol dm⁻³ KCl
- B 0.40 dm³ of 0.03 mol dm⁻³ KCl
- C 10.0 cm³ of 0.6 mol dm⁻³ CaCl₂
- D 0.15 dm³ of 0.04 mol dm⁻³ CaCl₂

(Total for Question 17 = 1 mark)

18 Potassium chlorate(V) decomposes on heating to form oxygen.



What is the atom economy (by mass) for the formation of oxygen?

[A_r values: O = 16.0 Cl = 35.5 K = 39.1]

- A 13.1%
- B 26.1%
- C 39.2%
- D 64.3%

(Total for Question 18 = 1 mark)

TOTAL FOR SECTION A = 20 MARKS



SECTION B

Answer ALL the questions.

Write your answers in the spaces provided.

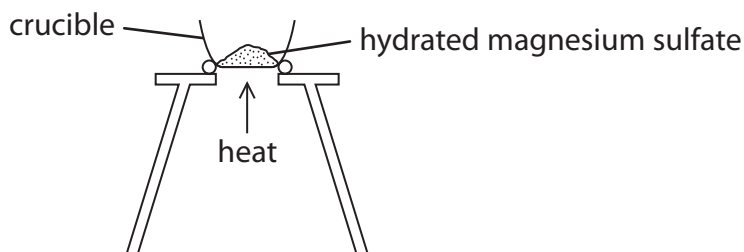
19 This question is about the amount of water of crystallisation in hydrated magnesium sulfate, $\text{MgSO}_4 \cdot x\text{H}_2\text{O}$.

(a) The value of x in the formula was determined in an experiment.

Procedure

Step 1 A crucible was weighed, a spatula measure of hydrated magnesium sulfate was added and the crucible was reweighed.

Step 2 The crucible containing the hydrated magnesium sulfate was heated using the apparatus shown.



Step 3 After heating for two minutes, the crucible containing the magnesium sulfate was allowed to cool and was reweighed.

(i) Complete the table of results.

(1)

Measurement	Mass / g
Mass of empty crucible	21.21
Mass of crucible and hydrated magnesium sulfate before heating	26.71
Mass of crucible and magnesium sulfate after heating for two minutes	24.12
Mass of magnesium sulfate after heating for two minutes	
Mass of water lost	



- (ii) Use these results to calculate the value of x in $\text{MgSO}_4 \cdot x\text{H}_2\text{O}$.
Give your answer to the nearest whole number.

[A_r values: H = 1.0 O = 16.0 Mg = 24.3 S = 32.1]

(4)

- (b) The correct value of x is greater than the value calculated in (a) (ii).

Suggest a way of improving the method to obtain a more accurate result,
using the same apparatus.
Justify your answer.

(2)

.....

.....

.....

.....

.....

.....

.....

(Total for Question 19 = 7 marks)

DO NOT WRITE IN THIS AREA

DO NOT WRITE IN THIS AREA

DO NOT WRITE IN THIS AREA



20 This question is about copper and its compounds.

(a) Complete the electronic configurations of Cu and Cu^{2+} .

(2)

Cu [Ar].....

Cu^{2+} [Ar].....

(b) A sample of copper contains the isotopes ^{63}Cu and ^{65}Cu .

(i) Complete the table to show the numbers of subatomic particles in the atoms of these two isotopes of copper.

(2)

Isotope	Protons	Neutrons	Electrons
^{63}Cu			
^{65}Cu			

(ii) Explain the term isotopes, using the information in the table.

(2)

.....

.....

.....

.....

.....

(iii) State why the two isotopes of copper have the same chemical reactions.

(1)

.....

.....



(iv) The relative atomic mass of copper in this sample is 63.4.

Calculate the percentage abundances of the isotopes ^{63}Cu and ^{65}Cu in this sample.

You **must** show your working.

(2)

(c) Copper(II) sulfate, CuSO_4 , can be made by reacting solid copper(II) carbonate with dilute sulfuric acid.

(i) Write an equation for the reaction that occurs.
State symbols are not required.

(1)

DO NOT WRITE IN THIS AREA

DO NOT WRITE IN THIS AREA

DO NOT WRITE IN THIS AREA



P 6 7 1 2 7 A 0 1 1 2 4

- (ii) An experiment was carried out to produce pure, dry crystals of hydrated copper(II) sulfate, $\text{CuSO}_4 \cdot 5\text{H}_2\text{O}$.
Copper(II) carbonate was mixed with 50.0 cm^3 of 1.00 mol dm^{-3} sulfuric acid until no more reacted.
The mass of $\text{CuSO}_4 \cdot 5\text{H}_2\text{O}$ obtained was 10.87 g .

Calculate the percentage yield for this reaction, giving your answer to an appropriate number of significant figures.

[Molar mass of $\text{CuSO}_4 \cdot 5\text{H}_2\text{O} = 249.6\text{ g mol}^{-1}$]

(4)

DO NOT WRITE IN THIS AREA

DO NOT WRITE IN THIS AREA

DO NOT WRITE IN THIS AREA

(Total for Question 20 = 14 marks)



21 This question is about alkenes.

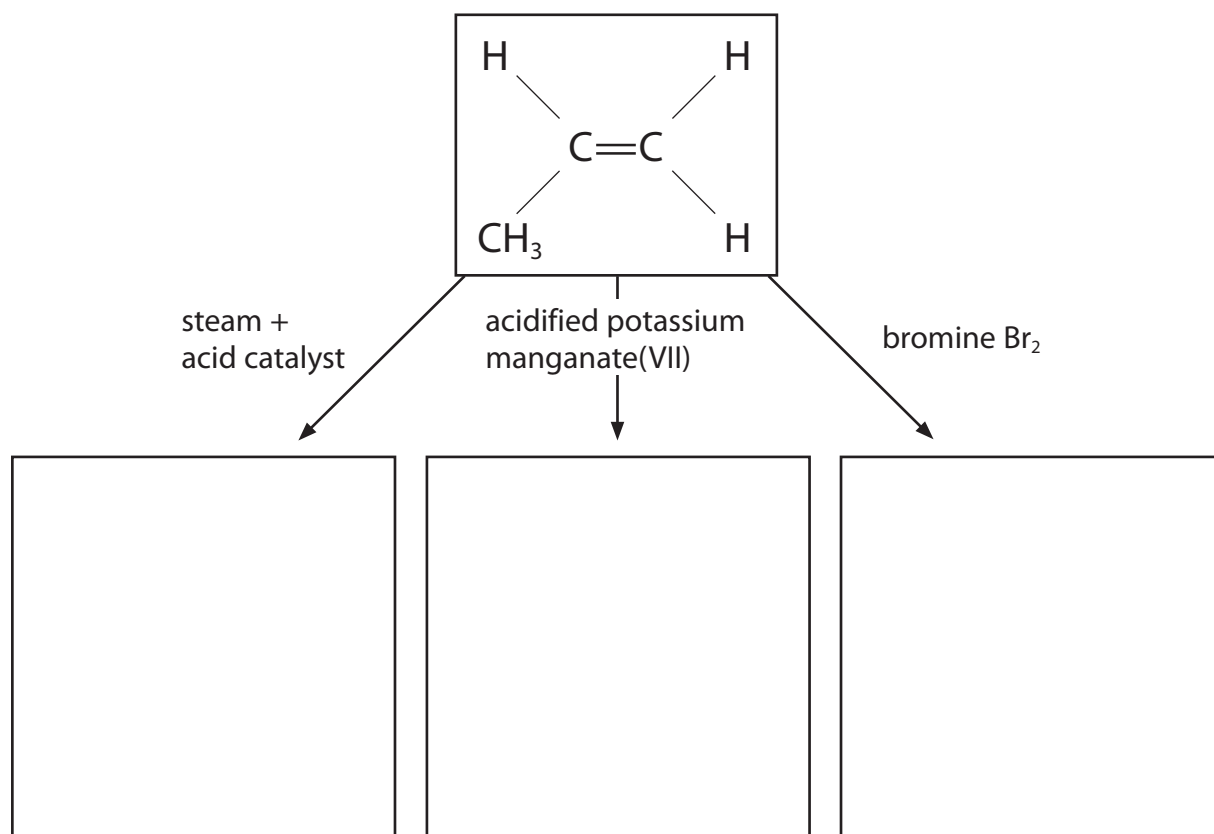
Alkenes contain a carbon to carbon double bond that consists of a σ bond and a π bond.

- (a) Complete the diagram to show the areas of electron density for each bond. Label the σ bond and the π bond.

(2)



- (b) Propene, C_3H_6 , is an alkene. The reagents needed for three reactions of propene are shown.



- (i) In each box, draw the structure of the organic product of the reaction.

(3)

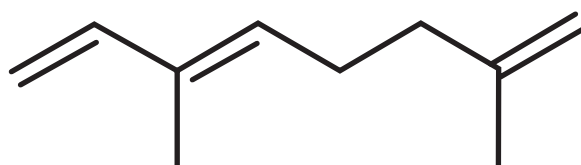


(ii) Propene also reacts with hydrogen bromide, HBr.

Give the mechanism for this reaction to form the **major** product.
Include curly arrows, and relevant lone pairs and dipoles.

(3)

(c) Alpha-ocimene contains three carbon to carbon double bonds. It is found in plants and has a sweet smell. The skeletal formula of alpha-ocimene is shown.



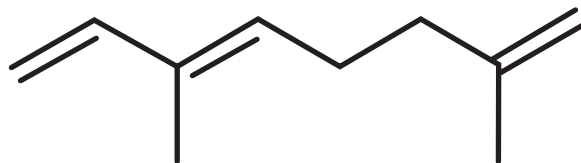
(i) Give the molecular formula of alpha-ocimene.

(1)



- (ii) On the skeletal formula, draw a circle around the part of the molecule that gives rise to the geometric isomerism of alpha-ocimene.

(1)



- (iii) Draw the **skeletal** formula of the other geometric isomer of alpha-ocimene.

(1)

- (iv) In an experiment, 0.050 mol of alpha-ocimene reacted with 3.6 dm³ of hydrogen, H₂, in the presence of a catalyst.

Deduce the structure of the product of this reaction.
You **must** show your working.

[Molar volume of H₂ = 24 dm³ mol⁻¹]

(3)

Calculation

Structure

(Total for Question 21 = 14 marks)

DO NOT WRITE IN THIS AREA

DO NOT WRITE IN THIS AREA

DO NOT WRITE IN THIS AREA



22 This question is about the bonding in the elements of Period 3 in the Periodic Table.

The melting temperatures of the Period 3 elements are shown in the table.

Element	Na	Mg	Al	Si	P	S	Cl	Ar
Melting temperature / °C	98	650	660	1423	44	120	-101	-189

(a) Sodium, magnesium and aluminium are metals.

(i) State what is meant by metallic bonding.

(1)

(ii) Melting temperature depends on the strength of metallic bonding.

Explain why the metallic bonding in magnesium is much stronger than that in sodium.

(3)



DO NOT WRITE IN THIS AREA

DO NOT WRITE IN THIS AREA

DO NOT WRITE IN THIS AREA

- (b) (i) In the elements silicon, phosphorus, sulfur and chlorine, the atoms are joined by covalent bonds.

Describe the attraction between the atoms in a covalent bond.

(1)

.....

.....

- (ii) Explain why the melting temperature of silicon is much higher than that of phosphorus, by referring to their structures.

(3)

.....

.....

.....

.....

.....

.....

.....

.....

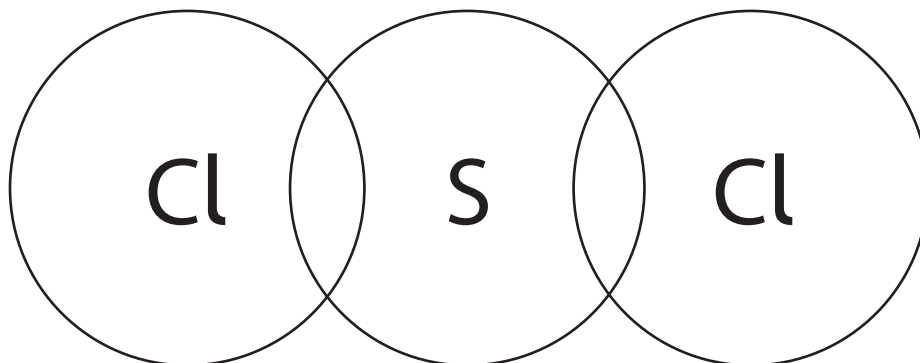
.....



(c) Sulfur reacts with chlorine to form sulfur dichloride, SCl_2 .

- (i) Complete the dot-and-cross diagram of a molecule of sulfur dichloride.
Use dots (•) for the chlorine electrons and crosses (×) for the sulfur electrons.
Show the outer shell electrons only.

(2)



- (ii) Suggest a value for the Cl-S-Cl bond angle. Justify your answer.

(3)

.....

.....

.....

.....

.....

.....

.....

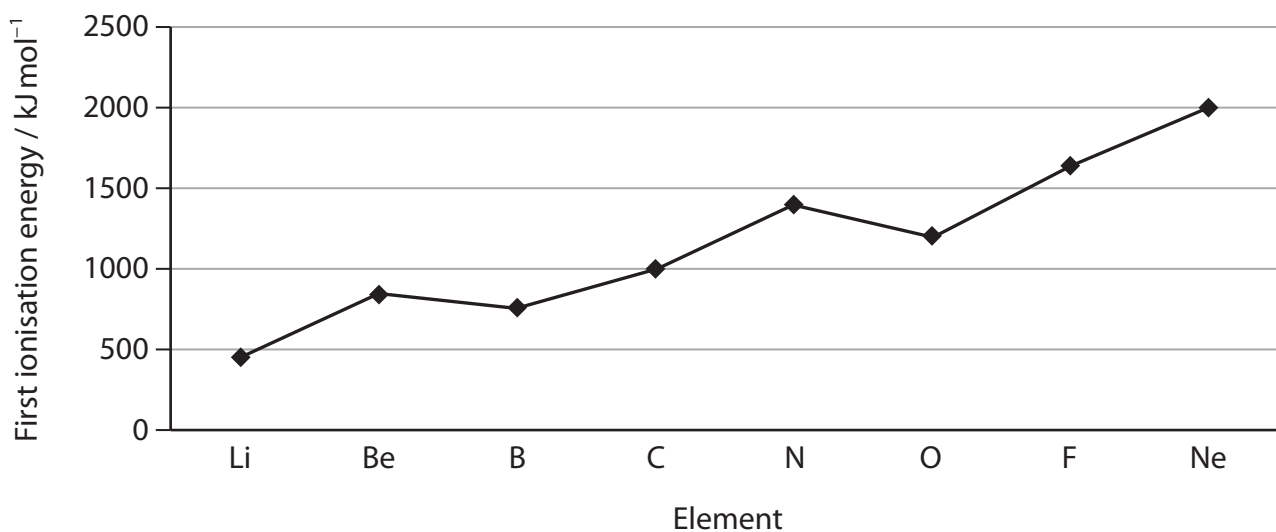
.....

(Total for Question 22 = 13 marks)



23 This question is about the ionisation energies of the elements in Period 2 of the Periodic Table.

(a) The first ionisation energies of the Period 2 elements are shown.



(i) Give an equation that represents the first ionisation energy of lithium. Include state symbols.

(1)

(ii) Explain why there is a general increase in the first ionisation energy across the period.

(2)

.....

.....

.....

.....

.....

.....

.....



(iii) Explain why the first ionisation energy of oxygen is lower than that of nitrogen.

(2)

.....

.....

.....

.....

.....

.....

DO NOT WRITE IN THIS AREA

DO NOT WRITE IN THIS AREA

DO NOT WRITE IN THIS AREA

(b) All the successive ionisation energies of nitrogen are shown in the table.

Ionisation number	1	2	3	4	5	6	7
Ionisation energy / kJ mol^{-1}	1402	2856	4578	7475	9445	53 267	64 360

Explain the trend in the successive ionisation energies of nitrogen.

(2)

.....

.....

.....

.....

.....

.....

(Total for Question 23 = 7 marks)



24 A 0.210 g sample of a volatile organic liquid **C** is injected into a gas syringe and heated in an oven.

At 100 kPa and 358 K, the syringe contains 72.5 cm³ of gas.

(a) Calculate the molar mass of **C**.

$$[pV = nRT \quad R = 8.31 \text{ J mol}^{-1} \text{ K}^{-1}]$$

(4)

(b) The organic liquid **C** is a hydrocarbon.

Give a possible name or formula for **C**, using your answer in (a).

(1)

(Total for Question 24 = 5 marks)

TOTAL FOR SECTION B = 60 MARKS

TOTAL FOR PAPER = 80 MARKS



DO NOT WRITE IN THIS AREA

DO NOT WRITE IN THIS AREA

DO NOT WRITE IN THIS AREA

BLANK PAGE



DO NOT WRITE IN THIS AREA

DO NOT WRITE IN THIS AREA

DO NOT WRITE IN THIS AREA

BLANK PAGE



P 6 7 1 2 7 A 0 2 3 2 4

The Periodic Table of Elements

1 2 3 4 5 6 7 0 (8) (18)

1.0	H	hydrogen	1
-----	----------	----------	---

Key

relative atomic mass
atomic symbol
name
atomic (proton) number

(1)	(2)	(3)	(4)	(5)	(6)	(7)	(8)	(9)	(10)	(11)	(12)	(13)	(14)	(15)	(16)	(17)	(18)
6.9	9.0	45.0	47.9	50.9	52.0	54.9	55.8	58.9	58.7	63.5	65.4	10.8	12.0	14.0	16.0	19.0	20.2
Li	Be	Sc	Ti	V	Cr	Mn	Fe	Co	Ni	Cu	Zn	B	C	N	O	F	Ne
lithium	beryllium	scandium	titanium	vanadium	chromium	manganese	iron	cobalt	nickel	copper	zinc	boron	carbon	nitrogen	oxygen	fluorine	neon
3	4	21	22	23	24	25	26	27	28	29	30	5	6	7	8	9	10
23.0	24.3	88.9	91.2	92.9	95.9	[98]	101.1	102.9	106.4	107.9	112.4	27.0	28.1	31.0	32.1	35.5	39.9
Na	Mg	Y	Zr	Nb	Mo	Tc	Ru	Rh	Pd	Ag	Cd	Al	Si	P	S	Cl	Ar
sodium	magnesium	yttrium	zirconium	niobium	molybdenum	technetium	ruthenium	rhodium	palladium	silver	cadmium	aluminium	silicon	phosphorus	sulfur	chlorine	argon
11	12	39	40	41	42	43	44	45	46	47	48	13	14	15	16	17	18
39.1	40.1	88.9	91.2	92.9	95.9	[98]	101.1	102.9	106.4	107.9	112.4	69.7	72.6	74.9	79.0	79.9	83.8
K	Ca	La*	Hf	Ta	W	Re	Os	Ir	Pt	Au	Hg	Ga	Ge	As	Se	Br	Kr
potassium	calcium	lanthanum	hafnium	tantalum	tungsten	rhenium	osmium	iridium	platinum	gold	mercury	gallium	germanium	arsenic	selenium	bromine	krypton
19	20	57	72	73	74	75	76	77	78	79	80	31	32	33	34	35	36
85.5	87.6	138.9	178.5	180.9	183.8	186.2	190.2	192.2	195.1	197.0	200.6	69.7	72.6	74.9	79.0	79.9	83.8
Rb	Sr	La*	Hf	Ta	W	Re	Os	Ir	Pt	Au	Hg	In	Sn	Sb	Te	I	Xe
rubidium	strontium	lanthanum	hafnium	tantalum	tungsten	rhenium	osmium	iridium	platinum	gold	mercury	indium	tin	antimony	tellurium	iodine	xenon
37	38	57	72	73	74	75	76	77	78	79	80	49	50	51	52	53	54
132.9	137.3	138.9	178.5	180.9	183.8	186.2	190.2	192.2	195.1	197.0	200.6	114.8	118.7	121.8	127.6	126.9	131.3
Cs	Ba	La*	Hf	Ta	W	Re	Os	Ir	Pt	Au	Hg	Pb	Bi	Po	At	Rn	Rn
caesium	barium	lanthanum	hafnium	tantalum	tungsten	rhenium	osmium	iridium	platinum	gold	mercury	lead	bismuth	polonium	astatine	radon	radon
55	56	57	72	73	74	75	76	77	78	79	80	82	83	84	85	86	86
[223]	[226]	[227]	[261]	[262]	[266]	[264]	[277]	[268]	[271]	[272]	[272]	204.4	207.2	209.0	[210]	[222]	[222]
Fr	Ra	Ac*	Rf	Db	Sg	Bh	Hs	Mt	Ds	Rg	Rg	Tl	Pb	Bi	Po	At	Rn
francium	radium	actinium	rutherfordium	dubnium	seaborgium	bohrium	hassium	meitnerium	darmstadtium	roentgenium	roentgenium	thallium	lead	bismuth	polonium	astatine	radon
87	88	89	104	105	106	107	108	109	110	111	111	81	82	83	84	85	86

Elements with atomic numbers 112-116 have been reported but not fully authenticated

140	141	144	150	152	157	163	165	167	169	173	175
Ce	Pr	Nd	Sm	Eu	Gd	Dy	Ho	Er	Tm	Yb	Lu
cerium	praseodymium	neodymium	samarium	europium	gadolinium	dysprosium	holmium	erbium	thulium	ytterbium	lutetium
58	59	60	62	63	64	66	67	68	69	70	71
232	[231]	238	[242]	[243]	[247]	[251]	[254]	[253]	[256]	[254]	[257]
Th	Pa	U	Pu	Am	Cm	Cf	Es	Fm	Md	No	Lr
thorium	protactinium	uranium	plutonium	americium	curium	californium	einsteinium	fermium	mendeleevium	nobelium	lawrencium
90	91	92	94	95	96	98	99	100	101	102	103

* Lanthanide series

* Actinide series

DO NOT WRITE IN THIS AREA

DO NOT WRITE IN THIS AREA

DO NOT WRITE IN THIS AREA

