

Monday 12 October 2020 – Morning

A Level Biology A

H420/01 Biological processes

Time allowed: 2 hours 15 minutes

You can use:

- a scientific or graphical calculator
- a ruler (cm/mm)



Please write clearly in black ink. **Do not write in the barcodes.**

Centre number

Candidate number

First name(s) _____

Last name _____

INSTRUCTIONS

- Use black ink. You can use an HB pencil, but only for graphs and diagrams.
- Write your answer to each question in the space provided. If you need extra space use the lined pages at the end of this booklet. The question numbers must be clearly shown.
- Answer **all** the questions.
- Where appropriate, your answer should be supported with working. Marks might be given for using a correct method, even if your answer is wrong.

INFORMATION

- The total mark for this paper is **100**.
- The marks for each question are shown in brackets [].
- Quality of extended response will be assessed in questions marked with an asterisk (*).
- This document has **36** pages.

ADVICE

- Read each question carefully before you start your answer.

2
SECTION A

You should spend a maximum of 20 minutes on this section.

Write your answer to each question in the box provided.

Answer **all** the questions.

1 Which of the following statements, **A** to **D**, about differential staining is **not** true?

- A** Differential staining can distinguish between different organelles.
- B** Differential staining can distinguish between types of cell.
- C** Differential staining can distinguish between types of organism.
- D** Differential staining is a common feature of electron microscopy.

Your answer

[1]

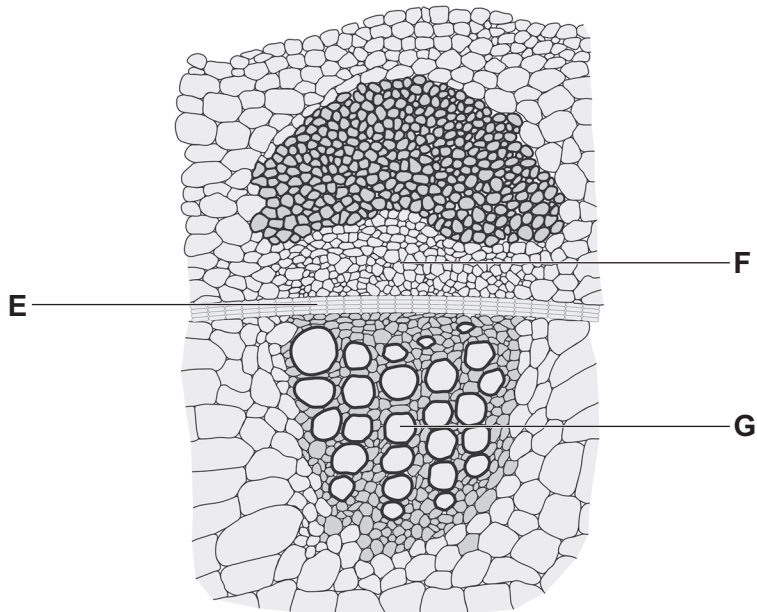
2 Which of the following statements, **A** to **D**, about microscopes is correct?

- A** A light microscope with an eyepiece lens magnification of $\times 10$ and an objective lens magnification of $\times 50$ will have an overall magnification of $\times 60$.
- B** Scanning electron microscopes and laser scanning confocal microscopes can both produce three dimensional images.
- C** The maximum resolution of a scanning electron microscope is lower than that of a light microscope.
- D** Transmission electron microscopes and laser scanning confocal microscopes can both produce three dimensional images.

Your answer

[1]

- 3 The figure below shows a drawing of a light microscope image. The image is a cross-section taken from the stem of a dicotyledonous plant.



Which of the rows, **A** to **D**, correctly identifies the name of the tissue labelled **E** and the functions of tissue **F** and tissue **G**?

	Name of tissue E	Function of tissue F	Function of tissue G
A	cambium	transport of assimilates	transport of water
B	cambium	transport of water	transport of assimilates
C	palisade cells	transport of assimilates	transport of water
D	palisade cells	transport of water	transport of assimilates

Your answer

[1]

- 4 Which of the following statements, **A** to **D**, does **not** correctly describe the structure or formation of plant vascular tissues?

- A** Companion cells are linked to xylem vessels by plasmodesmata.
- B** Mature sieve tube elements do not contain nuclei.
- C** Phloem and xylem are formed by differentiation of vascular meristems.
- D** Xylem vessels have non-lignified pits to allow movement in and out.

Your answer

[1]

5 Large multicellular animals need a transport system for oxygen and carbon dioxide.

Large multicellular plants do not need a transport system for oxygen and carbon dioxide.

Which of the following statements, **A** to **D**, correctly explains these observations?

- A** Large plants have a low surface area to volume ratio.
- B** Plant cells have a low metabolic rate.
- C** Plants generate ATP during photosynthesis, so they do not need to respire.
- D** Plants generate oxygen during photosynthesis.

Your answer

[1]

6 Which of the following statements, **A** to **D**, describes the movement of water across plant roots?

- A** The Casparian strip blocks movement by the symplast pathway.
- B** The symplast pathway requires water to cross partially permeable membranes.
- C** Water moves from the soil to the root hair cells up a water potential gradient.
- D** Water moves through the leaves only by the symplast pathway and across the roots only by the apoplast pathway.

Your answer

[1]

7 Which of the following statements about water transport in plants is/are correct?

- 1 Transpiration happens as a consequence of the need for gas exchange.
- 2 There are cohesive forces between water molecules because they form hydrogen bonds with one another.
- 3 Water is drawn up the stem due to adhesive forces between water molecules.

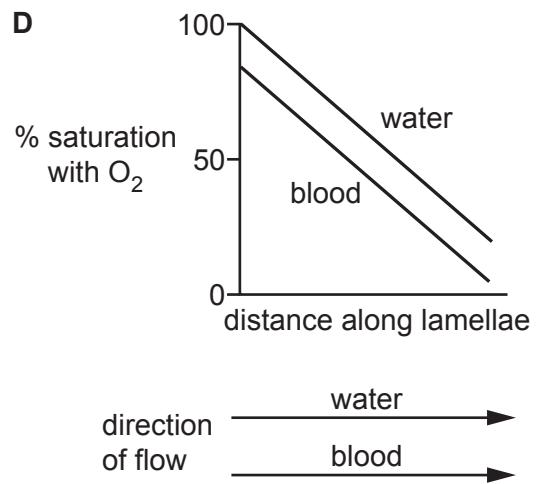
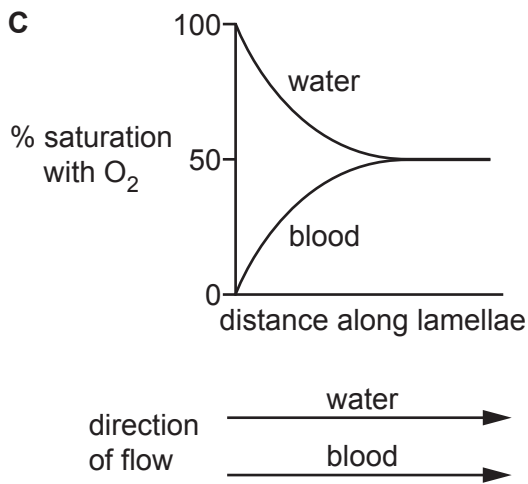
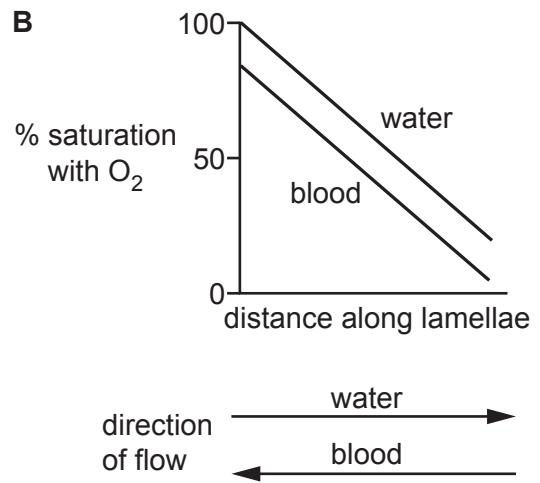
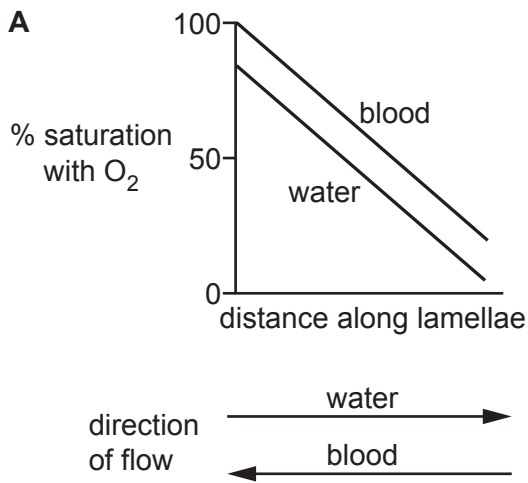
- A** 1, 2 and 3
- B** only 1 and 2
- C** only 2 and 3
- D** only 1

Your answer

[1]

8 The graphs, **A** to **D**, represent gas exchange in bony fish.

The graphs show the oxygen saturation in blood in the lamellae and water flowing over the lamellae.



Which graph, **A** to **D**, shows the relationship between blood oxygen saturation and distance along the lamellae?

Your answer

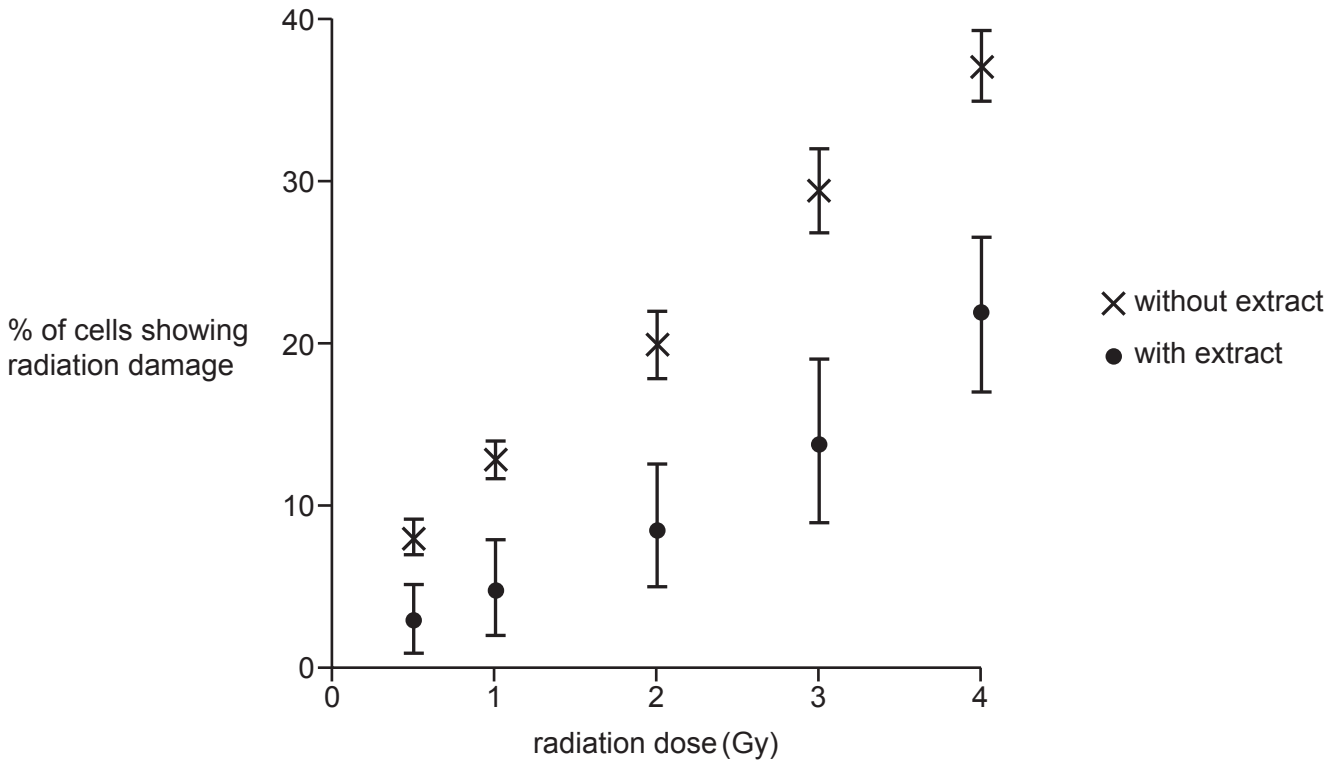
[1]

Questions 9 and 10 refer to the graph below.

An extract of the bark of the Indian fig tree, *Ficus racemosa*, has antioxidant properties. It has been suggested that this extract could protect against damage to non-cancerous cells during radiotherapy.

Cultures of non-cancerous cells were exposed to increasing doses of radiation and the percentage of damaged cells was measured. The experiments were performed multiple times either with or without the bark extract.

The graph shows the results for the two sets of data. Each data point shows the mean \pm 1 standard deviation.



- 9 A student used Spearman's rank correlation coefficient to test for correlation between radiation dose and cell damage.

Which of the following statements, **A** to **D**, about this correlation shown on the graph is correct?

- A** Spearman's rank correlation coefficient, r_s , for cells without extract will be between 0 and +1.
- B** Spearman's rank correlation coefficient, r_s , for cells with extract will be between 0 and -1.
- C** There is a negative correlation between radiation dose and cell damage in both cases.
- D** There is no correlation between radiation dose and cell damage in either case.

Your answer

[1]

- 10 Which of the following statements, **A** to **D**, about the graph is correct?

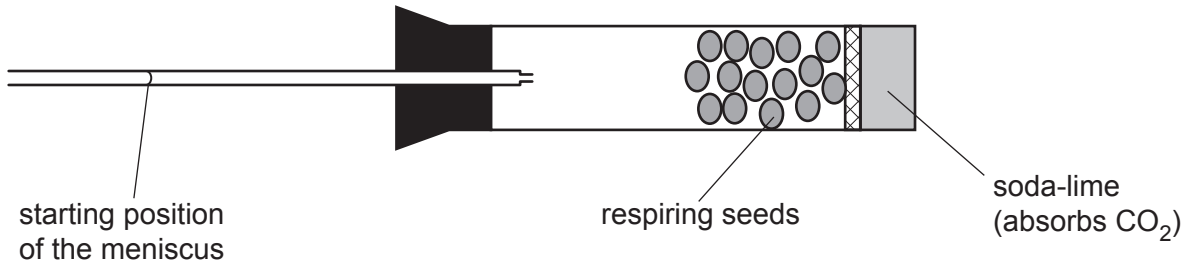
- A** The data for the 'with extract' group is more variable than the data for the 'without extract' group.
- B** The error bars show the range of data at each radiation dose.
- C** The error bars show whether the difference between the two sets of data is significant.
- D** The χ^2 (chi-squared) test can be used to determine whether there is a significant difference between the two sets of data.

Your answer

[1]

Questions 11 and 12 refer to the investigation described below.

The diagram shows a respirometer used to compare respiration in two types of germinating seeds.



A student set up the respirometer to measure oxygen consumption.

- The narrow tube contained coloured water.
- The position of the meniscus was noted at the beginning of the experiment.
- The tube was left for 20 minutes.
- The new position of the meniscus was noted.
- The experiment was repeated with the other type of seed.

11 Which of the following would be necessary to ensure valid results?

- 1 Keeping the respirometer in the dark during the experiment.
- 2 Keeping the respirometer at the same temperature during the experiment.
- 3 Using the same dry mass of seeds each time.

- A** 1, 2 and 3
- B** only 1 and 2
- C** only 2 and 3
- D** only 1

Your answer

[1]

12 The student investigated two types of seed, pea and sunflower:

- pea seeds store mainly starch
- sunflower seeds store mainly lipid.

Which of the following, **A** to **D**, describes the results you would expect with each type of seed?

- A** The meniscus would move to the left with pea seeds and further to the left with sunflower seeds.
- B** The meniscus would move to the left with sunflower seeds and to the right with pea seeds.
- C** The meniscus would move to the right with pea seeds and further to the right with sunflower seeds.
- D** The meniscus would not move.

Your answer

[1]

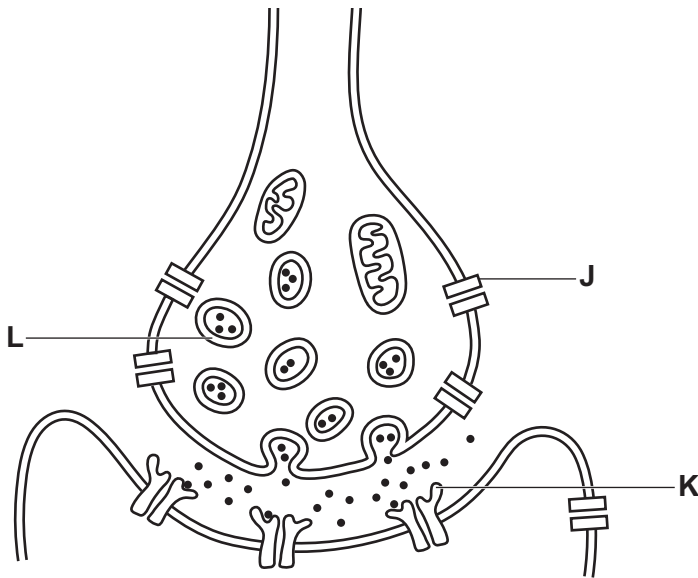
13 Which of the following statements, **A** to **D**, describes and explains the relative yield of ATP in anaerobic and aerobic respiration?

- A** Anaerobic respiration produces less ATP per molecule of glucose because lactate is converted to pyruvate.
- B** Anaerobic respiration produces less ATP per molecule of glucose because NAD is not regenerated in oxidative phosphorylation.
- C** Anaerobic respiration produces more ATP per molecule of glucose because NAD is regenerated in oxidative phosphorylation.
- D** Anaerobic respiration produces more ATP per molecule of glucose because pyruvate is converted to lactate.

Your answer

[1]

Questions 14 and 15 refer to the diagram below of a synapse.



14 Which of the following statements, **A** to **D**, describes events occurring at a synapse?

- A** Acetylcholine is broken down by enzymes so that it can bind to structure **K**.
- B** An action potential causes structure **J** to close.
- C** Structure **J** is a voltage gated Ca^{2+} channel.
- D** Structure **L** is released by exocytosis.

Your answer

[1]

15 GABA is a neurotransmitter.

GABA reduces the number of action potentials in the postsynaptic neurone by opening chloride ion channels in the post-synaptic membrane.

Which of the following statements, **A** to **D**, describes the action of GABA?

- A** GABA binds to structure **K** in competition with acetylcholine.
- B** GABA causes hyperpolarisation of the post-synaptic membrane.
- C** GABA causes depolarisation of the post-synaptic membrane.
- D** GABA inhibits release of neurotransmitter from structure **L**.

Your answer

[1]

11
BLANK PAGE

PLEASE DO NOT WRITE ON THIS PAGE

12
SECTION B

Answer **all** the questions.

16 (a) Fig. 16.1 shows the structure of ATP.

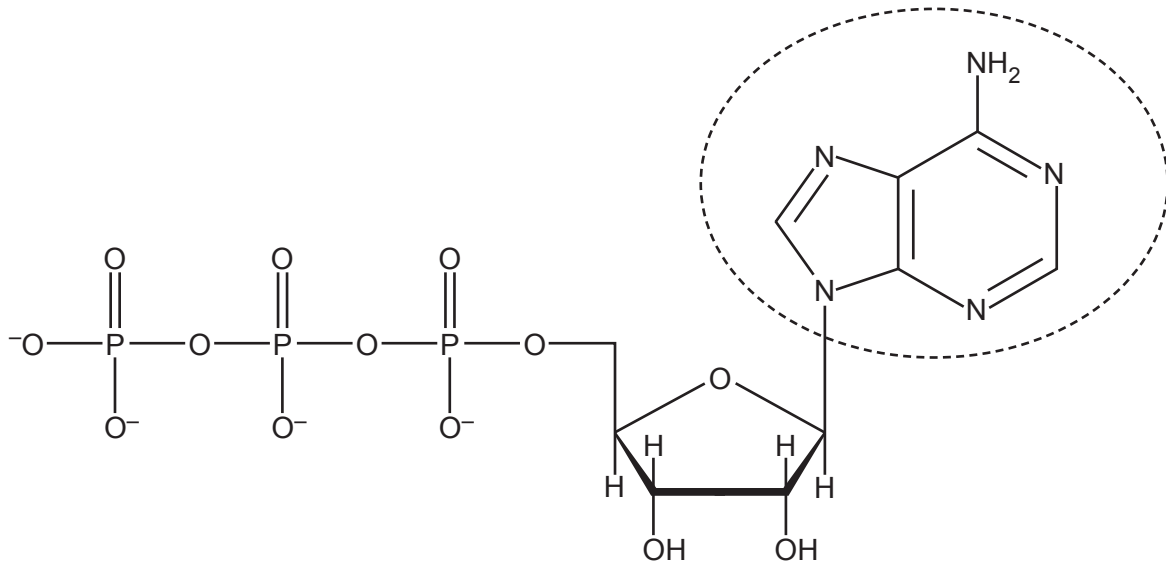


Fig. 16.1

(i) Name the circled component in Fig. 16.1.

..... [1]

(ii) Name the type of reaction that occurs when ATP is converted to ADP.

..... [1]

(iii) A teacher told his students that the human body makes the equivalent of its own mass in ATP every day.

Explain why, at the end of the day, only a small proportion of the students' mass was ATP.

.....
.....
.....
.....
..... [2]

- (ii) The student then added 2,4-dinitrophenol (DNP) to the cells. DNP inhibits respiration.
Predict the effect of DNP on the uptake of each substance and explain your prediction.

Substance A

effect

explanation

.....

.....

Substance B

effect

explanation

.....

.....

[4]

- (c) The student used a colorimeter to measure the concentration of each substance in the liquid surrounding the cells.

The colorimeter had an analogue display. The reading was indicated by a needle moving across a scale. The smallest divisions on the scale corresponded to 0.1 absorbance unit.

After the investigation the student suggested some improvements.

Draw a line between each of the improvements to the corresponding justification.

Improvement	Justification
Use a colorimeter with a digital display showing absorbance units to 3 decimal places.	To assess repeatability
Check the zero value of the colorimeter with purified water before use.	To assess reproducibility
For each concentration, repeat the measurement of the rate of reaction three times and calculate a mean.	To reduce systematic error
Ask students in several schools to carry out the same investigation.	To reduce random error (uncertainty)
	To increase resolution

[4]

17 A student investigated photosynthetic pigments in spinach leaves using thin layer chromatography (TLC).

(a) Fig. 17.1 shows the student's plate at the end of the investigation.

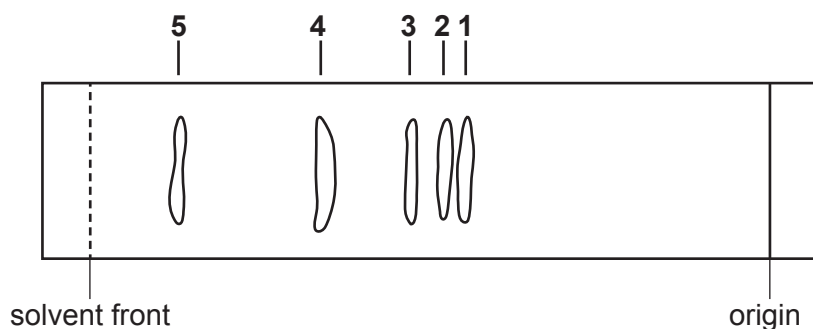


Fig. 17.1

The table shows colours and R_f values for several photosynthetic pigments.

Pigment	Colour	R_f
Carotene	Yellow-orange	0.90
Chlorophyll a	Blue-green	0.53
Chlorophyll b	Green	0.49
Pheophytin	Grey	0.65
Xanthophylls	Yellow	0.32–0.44

(i) Calculate the R_f value for spot 3 and use this to identify the pigment that spot 3 represents.

$$R_f = \dots\dots\dots$$

pigment =

[3]

(ii) Predict the colour of spot 4.

..... [1]

(iii) The solvent used for the separation was non-polar.

Identify the spot corresponding to the **least** polar pigment. Give a reason for your choice.

spot

reason

.....

[2]

(b) The student used the following method for the investigation:

Step 1: Extraction of pigments

- Take 0.5 g of fresh spinach and add 1 g of sand.
- Grind the mixture until it becomes a fine, light green powder.
- Transfer the powder to a test tube and add 2 cm³ of propanone.
- Stir for about 1 minute then allow to stand for another minute.
- Transfer the dark green upper layer with a pipette to a clean test tube and seal with film when not in use.

Step 2: TLC analysis

- Hold the TLC plate carefully by the edges and avoid damaging the surface of the plate.
- Draw a pencil line across the width of the TLC plate 1 cm from the bottom edge.
- Spot the extract on the pencil line using a pipette, one drop at a time, allowing the spot to dry before adding the next drop.
- Place chromatography solvent in a jar so that it is no more than 0.5 cm deep.
- Lower the TLC plate into the jar and lean the top against the side of the jar. Make sure the plate does not touch the sides of the jar anywhere else.
- Place a cap on the jar and allow the solvent to soak up the plate.
- When the solvent has reached a few mm from the top of the plate, remove the plate from the jar and mark the position of the solvent front with a pencil.

(i) Explain why the method included the following precautions:

Hold the TLC plate carefully by the edges and avoid damaging the surface of the plate.

.....

Make sure the plate does not touch the sides of the jar anywhere else.

.....

[2]

(ii) Suggest an advantage of working as quickly as possible in Step 1.

.....
 [1]

- (b) Scientists have used FURA-2 to study the role of Ca^{2+} ions in the synapses of living nerve tissue.

FURA-2 was injected into a single sensory neurone that was connected by a synapse to a relay neurone.

FURA-2 fluorescence inside the neurone was observed using a confocal microscope.

- (i) Explain **one** advantage of using a confocal microscope in this study.

.....
..... [1]

- (ii) The sensory neurone was stimulated electrically and the FURA-2 fluorescence in the synaptic bulb was measured. At the same time, an electrode recorded the membrane potential in a postsynaptic neurone.

The results of this study are shown in the table.

Strength of electrical stimulation	FURA-2 fluorescence in synaptic bulb	Highest membrane potential in postsynaptic neurone (mV)
Low	Low	-60
Medium	Medium	+40
High	High	+40

The intensity of FURA-2 fluorescence is proportional to the concentration of Ca^{2+} ions.

The scientists concluded that changes in the concentration of Ca^{2+} ions in the presynaptic neurone caused an action potential in the postsynaptic neurone.

Evaluate and explain the scientists' conclusion.

.....
.....
.....
.....
.....
.....
.....
.....
.....
.....
..... [4]

19 (a) The image below is a photomicrograph of a mitochondrion.



(i) State the type of microscope used to produce this image.

..... [1]

(ii) Identify the structures labelled **M** and **N** in the photomicrograph.

M

N

[2]

(b) Describe **two** ways in which the structure of mitochondrial membranes is related to the function of a mitochondrion.

1

.....

2

.....

[2]

20 A student investigated the effect of different sugars on the respiration rate in yeast using the following procedure.

- Prepare a stock solution of yeast containing 10g of dried yeast in 250 cm³ of pH5 buffer.
- Prepare solutions of each sugar containing 5g of sugar in 250 cm³ of distilled water.
- Keep the yeast and sugar solutions in a water bath at 35°C until required.
- Set up the apparatus with a 250 cm³ conical flask connected by a rubber tube to a 100 cm³ gas syringe.
- Add 25 cm³ of yeast solution and 25 cm³ of sugar solution to the flask, immediately connect the flask to the gas syringe and start the clock.
- Record the volume of gas produced after 30s and then every 30s for 7 min.
- Repeat the experiment 5 times for each different sugar.
- Prepare a fresh yeast solution for each set of sugars.

(a) (i) Describe **two** precautions the student should take between each experiment to ensure repeatable results.

1

.....

.....

2

.....

..... [2]

(ii) The student's procedure did not include a negative control.

Describe **one** negative control that the student could have used.

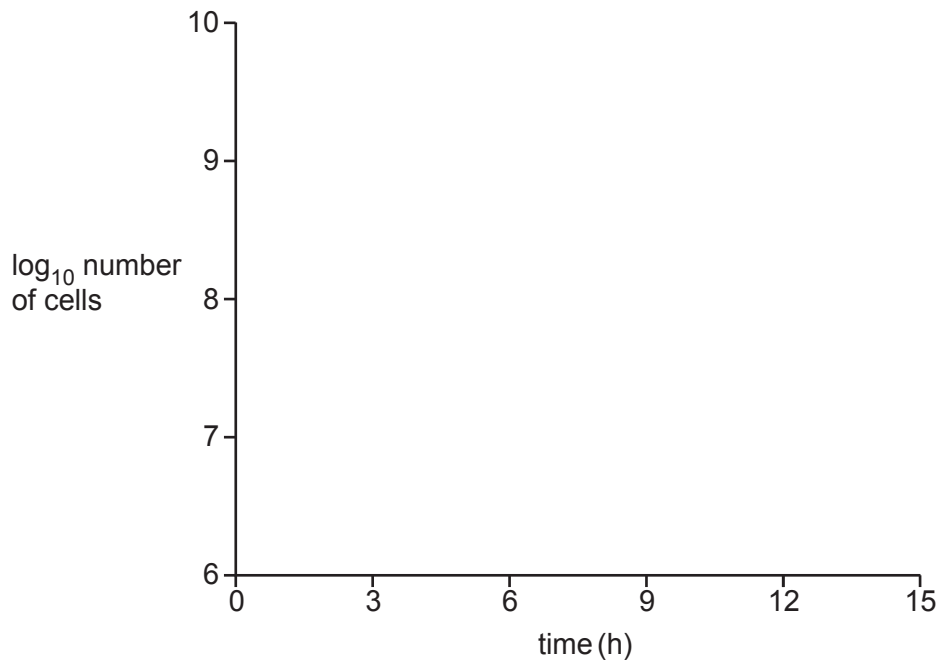
.....

..... [1]

- (iv) The population of this yeast doubles every 90 minutes when growing under ideal conditions.

A different starter culture was prepared containing 1×10^7 cells.

Use the axes below to sketch the growth curve you would expect for the yeast culture over the first 15 h.



[3]

28
BLANK PAGE

PLEASE DO NOT WRITE ON THIS PAGE

21 (a) The table compares the features of airways in the lungs.

Complete the table by putting a tick (✓) in each box if the feature is present and a cross (✗) if the feature is absent in each structure.

The first row has been completed for you.

Structure	Structural feature present		
	Cartilage	Elastic fibres	Goblet cells
Trachea	✓	✓	✓
Bronchi			
Bronchioles			
Alveoli			

[3]

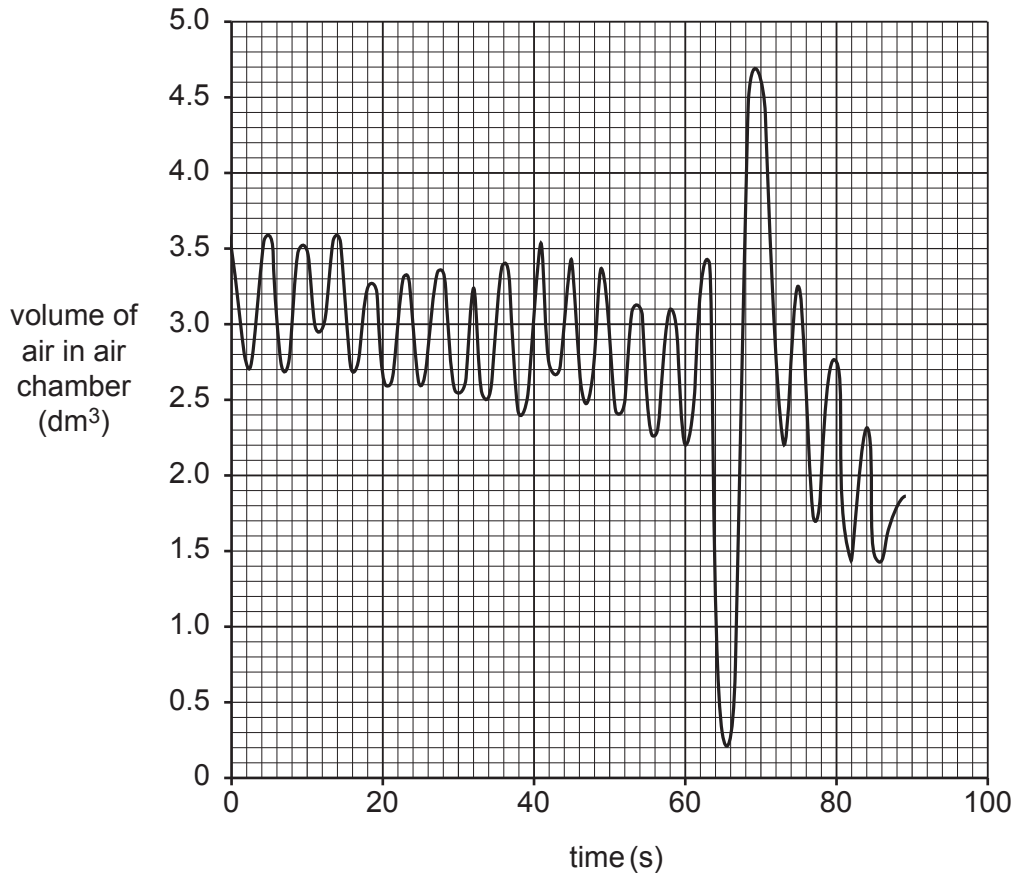
Question 21(b) begins on page 30

(b) Ventilation of the lungs creates air movements that can be measured and recorded.

(i) Name the apparatus used to measure and record these air movements.

..... [1]

(ii) The trace below shows a recording of ventilation movements from an individual subject.



Use the trace to estimate the **maximum** value for tidal volume during the first minute.

maximum tidal volume = dm³ [1]

(iii) After 60 seconds, the subject was told to breathe in as deeply as possible and then breathe out fully.

Use the trace to calculate the vital capacity of the subject.

vital capacity =dm³ [2]

(d) Complete the following statements about exchange surfaces.

Use the correct terms selected from the list below.

- circulatory system** **concentration gradient** **diffusion pathway**
- flow of air** **lung capacity** **surface area**
- surface area to volume ratio** **ventilation**

Large organisms have a large but they have a small This means they need a specialised exchange surface and a

Two features of an efficient exchange surface are:

1. A good blood supply to maintain the
2. A short

[5]

END OF QUESTION PAPER

ADDITIONAL ANSWER SPACE

If additional space is required, you should use the following lined page(s). The question number(s) must be clearly shown in the margin(s).

A large area of lined paper for writing. It consists of a vertical solid line on the left side, creating a margin. To the right of this line, there are numerous horizontal dotted lines spaced evenly down the page, providing a guide for writing.

A large rectangular area for writing, bounded by a solid vertical line on the left and a solid horizontal line at the bottom. The interior is filled with horizontal dotted lines, providing a guide for handwriting.



Copyright Information

OCR is committed to seeking permission to reproduce all third-party content that it uses in its assessment materials. OCR has attempted to identify and contact all copyright holders whose work is used in this paper. To avoid the issue of disclosure of answer-related information to candidates, all copyright acknowledgements are reproduced in the OCR Copyright Acknowledgements Booklet. This is produced for each series of examinations and is freely available to download from our public website (www.ocr.org.uk) after the live examination series. If OCR has unwittingly failed to correctly acknowledge or clear any third-party content in this assessment material, OCR will be happy to correct its mistake at the earliest possible opportunity.

For queries or further information please contact The OCR Copyright Team, The Triangle Building, Shaftesbury Road, Cambridge CB2 8EA.

OCR is part of the Cambridge Assessment Group; Cambridge Assessment is the brand name of University of Cambridge Local Examinations Syndicate (UCLES), which is itself a department of the University of Cambridge.