



**Cambridge International Examinations**  
Cambridge International General Certificate of Secondary Education

CANDIDATE  
NAME


--

CENTRE  
NUMBER

--	--	--	--	--

CANDIDATE  
NUMBER

--	--	--	--



**BIOLOGY**

**0610/33**

Paper 3 Theory (Core)

**October/November 2018**

**1 hour 15 minutes**

Candidates answer on the Question Paper.

No Additional Materials are required.

**READ THESE INSTRUCTIONS FIRST**

Write your Centre number, candidate number and name on all the work you hand in.

Write in dark blue or black pen.

You may use an HB pencil for any diagrams or graphs.

Do not use staples, paper clips, glue or correction fluid.

**DO NOT WRITE IN ANY BARCODES.**

Answer **all** questions.

Electronic calculators may be used.

You may lose marks if you do not show your working or if you do not use appropriate units.

At the end of the examination, fasten all your work securely together.

The number of marks is given in brackets [ ] at the end of each question or part question.

This syllabus is approved for use in England, Wales and Northern Ireland as a Cambridge International Level 1/Level 2 Certificate.

This document consists of **18** printed pages and **2** blank pages.

1 Fig. 1.1 shows six different arthropods labelled **A**, **B**, **C**, **D**, **E** and **F**.




Fig. 1.1

(a) State **one** feature that can be used to classify an animal as an arthropod.

.....[1]

(b) (i) State **one** visible feature that arthropods **A**, **B** and **C** have that arthropods **D**, **E** and **F** do **not** have.

.....  
 .....[1]

(ii) State the letter of the organism in Fig. 1.1 that is a crustacean.

Give a reason for your answer.

letter .....

reason .....

.....[2]

(c) One of the drawings shows an arthropod named *Araneus diadematus*.

This arthropod has a body in two segments and it has eight legs.

(i) State the letter of the organism in Fig. 1.1 that shows *Araneus diadematus*.

..... [1]

(ii) State the name of the group of arthropods that includes *Araneus diadematus*.

..... [1]

[Total: 6]

- 2 (a) Arrange the structures in the list in increasing order of organisation, starting with the smallest structure.

**cell**

**organism**

**organ**

**organ system**

**tissue**

The first one has been done for you.

cell



.....



.....



.....



.....

[3]

(b) The boxes on the left show different parts of a flowering plant.

The boxes on the right are terms that describe different levels of organisation.

Draw **one** straight line from each part of a flowering plant to the correct level of organisation.

**part of a flowering plant**

flower

flowering plant

palisade mesophyll

root hair

**level of organisation**

cell

organ

organism

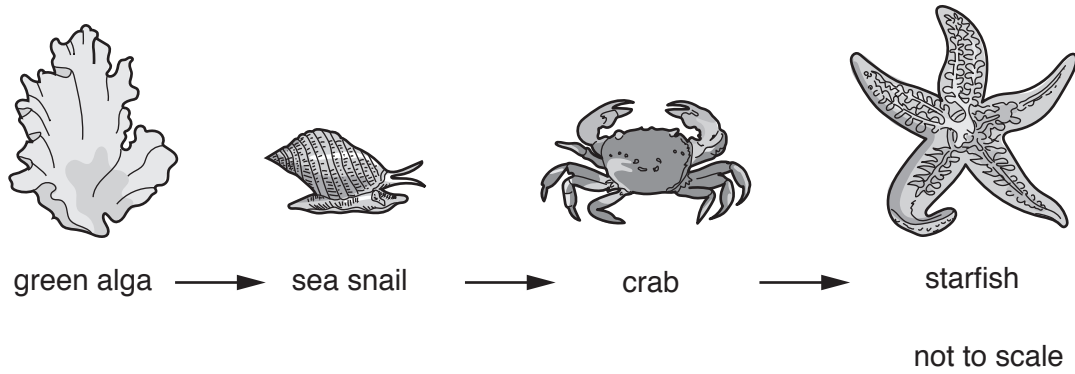
organ system

tissue

[4]

[Total: 7]

3 Fig. 3.1 shows a food chain that is found in the sea.



**Fig. 3.1**

(a) (i) State the name of the producer in this food chain.

.....[1]

(ii) Define the term *producer*.

.....  
 .....  
 .....[2]

(iii) State the name of the secondary consumer in this food chain.

.....[1]

(iv) State the name of the herbivore in this food chain.

.....[1]

(v) State what the arrows in a food chain represent.

.....  
 .....  
 .....[1]



4 Fig. 4.1 shows a photograph of an area where the trees have been cut down.



**Fig. 4.1**

(a) (i) State the name of the type of habitat destruction shown in Fig. 4.1.

.....[1]

(ii) List **three** undesirable effects of habitat destruction.

1 .....

2 .....

3 .....

[3]

(b) State **three** human activities, other than cutting down large areas of trees, that can cause habitat destruction.

1 .....

2 .....

3 .....

[3]





5 (a) Coat colour in horses is controlled by genes.

The allele for black coat (**E**) is dominant.

The allele for red coat (**e**) is recessive.


Place ticks (✓) in the table to show the coat colours of horses with each of the following genotypes.

genotype	black coat	red coat
<b>EE</b>		
<b>Ee</b>		
<b>ee</b>		

[2]

(b) Modern horse breeds look very different to each other, but still belong to the same species.

Fig. 5.1 shows three different horse breeds.



**Fig. 5.1**

State the term used to describe the difference between individuals of the same species.

.....[1]



6 A factory uses biotechnology to process apples.

Some of the apple juice is mixed with yeast and used to make ethanol.

(a) (i) State the type of respiration in yeast that produces ethanol.

.....[1]

(ii) State the name of the substance in apple juice that is converted to ethanol by yeast.

.....[1]

(b) The yeast uses enzymes to produce ethanol.

(i) Define the term *enzyme*.

.....  
 .....[2]

Fig. 6.1 shows apparatus used to find the best (optimum) temperature for making ethanol.

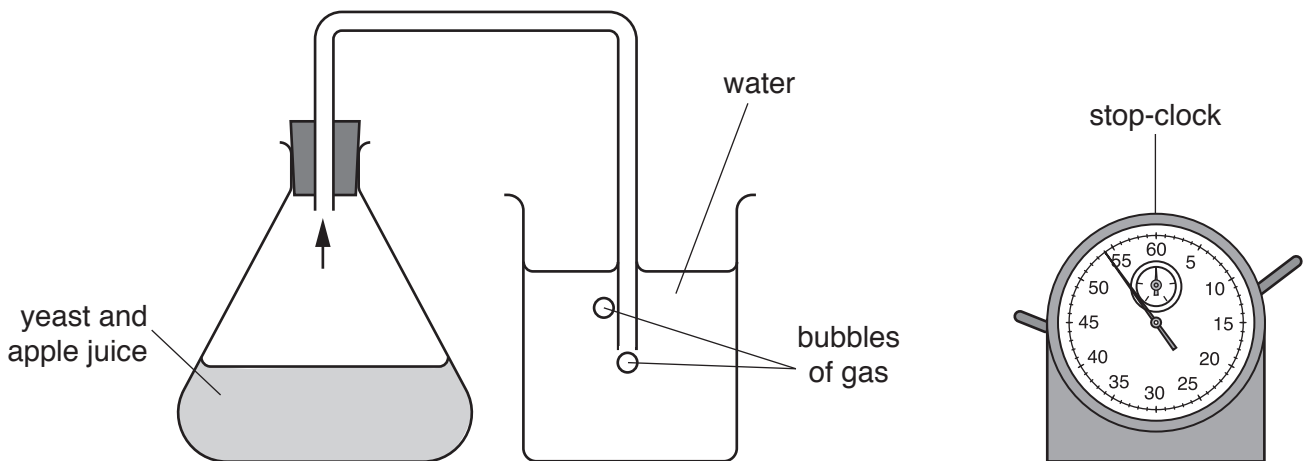


Fig. 6.1

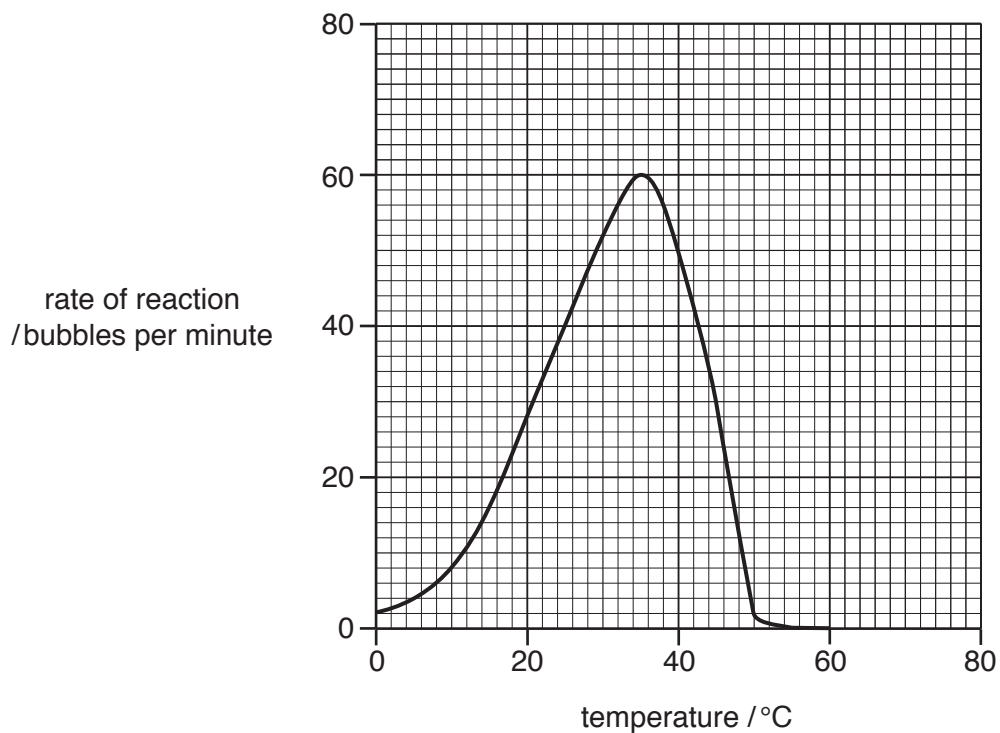
The same apparatus was used at different temperatures.

The rate of ethanol production was compared by counting the number of bubbles of gas produced by the yeast and apple juice mixture per minute.

(ii) State the name of the gas produced by the yeast in Fig. 6.1.

.....[1]

The results of the investigation are shown in Fig. 6.2.



**Fig. 6.2**

- (iii) Calculate the increase in the rate of reaction from 20°C to 25°C in Fig. 6.2.

Space for working.

..... bubbles per minute [1]

- (iv) State the optimum temperature for the reaction shown in Fig. 6.2.

..... °C [1]

- (c) The cut surface of an apple usually turns brown when exposed to air. This is caused by enzymes.

Three slices of apple were given different treatments and were then exposed to air for 30 minutes.

Table 6.1 shows the treatments and appearance of the apple slices.

**Table 6.1**

apple slice	pH	temperature/°C	appearance of the apple slice at 0 minutes	appearance of the apple slice after 30 minutes
<b>A</b>	6	20	white	brown
<b>B</b>	2	20	white	white
<b>C</b>	6	4	white	white

Suggest why slice **B** and slice **C** did not turn brown after 30 minutes.

slice **B** .....

.....

slice **C** .....

.....

[2]

- (d) The enzyme pectinase is used in industry for the production of apple juice.

Explain why pectinase is used when making apple juice.

.....

.....

.....

.....

.....

.....

..... [3]

(e) Hygienic conditions are required in an apple juice factory.

Describe **three** precautions workers should take to ensure that good food hygiene is maintained in the apple juice factory.

1 .....

.....

2 .....

.....

3 .....

.....

[3]

[Total: 15]

7 (a) (i) State **one** type of blood cell that is involved in the defence against disease.

..... [1]

(ii) State **two** ways blood cells defend the body against disease.

1 .....

2 .....

[2]

(b) (i) HIV is a sexually transmitted infection (STI).

Define the term *sexually transmitted infection*.

.....  
.....  
..... [2]

(ii) State why antibiotics cannot be used to treat HIV infections.

.....  
.....  
..... [2]

(iii) Explain how the spread of STIs can be controlled.

.....  
.....  
.....  
.....  
.....  
.....  
.....  
..... [3]

[Total: 10]



8 (a) Fig. 8.1 shows some parts of the human body.

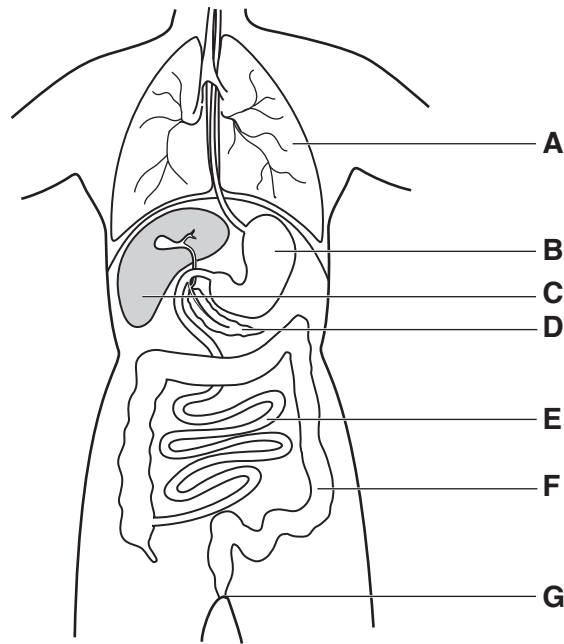


Fig. 8.1

(i) Use Fig. 8.1 to complete Table 8.1.

State the letter and the name of the part responsible for each function.

Table 8.1

function	letter in Fig. 8.1	name of the part
produces insulin		
produces hydrochloric acid		
produces urea		

[6]

(ii) State the letter of the part of the body where egestion occurs.

.....[1]

(iii) State the function of hydrochloric acid in the body.

.....[1]

(b) Complete the sentences using words from the list.

- amino acids**      **anus**      **bladder**      **fatty acids**      **glucose**  
**rectum**      **uterus**      **ureter**      **urethra**

You may use the words once, more than once or not at all.

Urea is a waste product made from the breakdown of excess .....

Urea passes through the kidney and forms part of the urine.

Urine leaves the kidney in the ..... This tube takes the urine to the  
..... where the urine is stored until it leaves the body. It leaves the  
body through the .....

[4]

[Total: 12]



**BLANK PAGE**

---

Permission to reproduce items where third-party owned material protected by copyright is included has been sought and cleared where possible. Every reasonable effort has been made by the publisher (UCLES) to trace copyright holders, but if any items requiring clearance have unwittingly been included, the publisher will be pleased to make amends at the earliest possible opportunity.

To avoid the issue of disclosure of answer-related information to candidates, all copyright acknowledgements are reproduced online in the Cambridge International Examinations Copyright Acknowledgements Booklet. This is produced for each series of examinations and is freely available to download at [www.cie.org.uk](http://www.cie.org.uk) after the live examination series.

Cambridge International Examinations is part of the Cambridge Assessment Group. Cambridge Assessment is the brand name of University of Cambridge Local Examinations Syndicate (UCLES), which is itself a department of the University of Cambridge.