

Write your name here

Surname

Other names

**Pearson Edexcel**  
**International**  
**Advanced Level**

Centre Number

--	--	--	--	--	--

Candidate Number

--	--	--	--	--	--

# Chemistry

**Advanced**

**Unit 5: General Principles of Chemistry II – Transition  
Metals and Organic Nitrogen Chemistry  
(including synoptic assessment)**

Friday 19 January 2018 – Morning

**Time: 1 hour 40 minutes**

Paper Reference

**WCH05/01**

**Candidates must have: Scientific calculator  
Data Booklet**

Total Marks

## Instructions

- Use **black** ink or **black** ball-point pen.
- **Fill in the boxes** at the top of this page with your name, centre number and candidate number.
- Answer **all** questions.
- Answer the questions in the spaces provided  
– *there may be more space than you need.*

## Information

- The total mark for this paper is 90.
- The marks for **each** question are shown in brackets  
– *use this as a guide as to how much time to spend on each question.*
- Questions labelled with an **asterisk** (\*) are ones where the quality of your written communication will be assessed  
– *you should take particular care with your spelling, punctuation and grammar, as well as the clarity of expression, on these questions.*
- A Periodic Table is printed on the back cover of this paper.

## Advice

- Read each question carefully before you start to answer it.
- Try to answer every question.
- Check your answers if you have time at the end.
- Show all your working in calculations and include units where appropriate.

Turn over ►

P51947A

©2018 Pearson Education Ltd.

6/5/5/1/

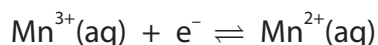


  
**Pearson**

## SECTION A

Answer ALL the questions in this section. You should aim to spend no more than 20 minutes on this section. For each question, select one answer from A to D and put a cross in the box . If you change your mind, put a line through the box  and then mark your new answer with a cross .

- 1 Which electrode and solution would be used to measure the standard electrode potential of the manganese(III)/manganese(II) half-cell?



	Electrode	Solution
<input type="checkbox"/> A	manganese	1 mol dm <sup>-3</sup> Mn <sup>3+</sup> (aq)
<input type="checkbox"/> B	manganese	1 mol dm <sup>-3</sup> with respect to Mn <sup>3+</sup> (aq) and Mn <sup>2+</sup> (aq)
<input type="checkbox"/> C	platinum	1 mol dm <sup>-3</sup> Mn <sup>3+</sup> (aq)
<input type="checkbox"/> D	platinum	1 mol dm <sup>-3</sup> with respect to Mn <sup>3+</sup> (aq) and Mn <sup>2+</sup> (aq)

(Total for Question 1 = 1 mark)

- 2 In which pair of species are the oxidation numbers of the d-block elements the same?

- A [Cr(NH<sub>3</sub>)<sub>4</sub>Cl<sub>2</sub>]<sup>+</sup> and [Mn(H<sub>2</sub>O)<sub>6</sub>]<sup>2+</sup>
- B CrO<sub>4</sub><sup>2-</sup> and TiCl<sub>3</sub>
- C Cr<sub>2</sub>O<sub>3</sub> and [Fe(CN)<sub>6</sub>]<sup>3-</sup>
- D Cr<sub>2</sub>O<sub>7</sub><sup>2-</sup> and MnO<sub>4</sub><sup>-</sup>

(Total for Question 2 = 1 mark)

Use this space for any rough working. Anything you write in this space will gain no credit.

DO NOT WRITE IN THIS AREA

DO NOT WRITE IN THIS AREA

DO NOT WRITE IN THIS AREA



- 3 One mole of metal ions reacted in solution with one mole of sulfur dioxide. The half-equation for the sulfur dioxide reaction is



The original oxidation number of the metal was +3. What was the oxidation number of the metal after the reaction?

- A +1  
 B +2  
 C +4  
 D +5

(Total for Question 3 = 1 mark)

- 4 This question concerns four complexes.

(a) Which complex has a tetrahedral structure?

(1)

- A  $[\text{CrCl}_4]^-$   
 B  $[\text{CuCl}_2]^-$   
 C  $[\text{Pt}(\text{NH}_3)_2\text{Cl}_2]$   
 D  $[\text{TiCl}_6]^{2-}$

(b) Which complex contains a metal in the +1 oxidation state?

(1)

- A  $[\text{CrCl}_4]^-$   
 B  $[\text{CuCl}_2]^-$   
 C  $[\text{Pt}(\text{NH}_3)_2\text{Cl}_2]$   
 D  $[\text{TiCl}_6]^{2-}$

(Total for Question 4 = 2 marks)

Use this space for any rough working. Anything you write in this space will gain no credit.



5 An ion of metal M has a charge of  $+n$ . It forms a complex ion with a charged bidentate ligand, L.

(a) The formula of the complex ion formed between the metal ion and the bidentate ligand is  $[ML_2]^{(n-4)}$ . What is the charge on ligand L? (1)

- A +2
- B 0
- C -2
- D -4

(b) Another complex ion can be formed in which both of the bidentate ligands L, in  $[ML_2]^{(n-4)}$ , are replaced by the neutral monodentate ligand Z. What is the formula of the complex ion? (1)

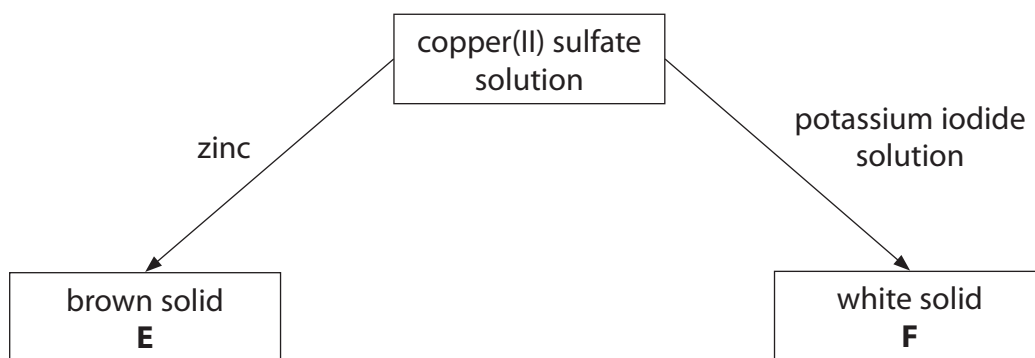
- A  $[MZ_2]^{n+}$
- B  $[MZ_2]^{2n+}$
- C  $[MZ_4]^{n+}$
- D  $[MZ_4]^{2n+}$

(Total for Question 5 = 2 marks)

Use this space for any rough working. Anything you write in this space will gain no credit.



6 Two reactions of copper(II) sulfate solution are shown.



(a) What is the insoluble brown solid **E**?

(1)

- A Copper
- B Copper(I) oxide
- C Copper(II) oxide
- D Zinc sulfate

(b) What is the insoluble white solid **F**?

(1)

- A Copper
- B Copper(I) iodide
- C Copper(II) iodide
- D Potassium sulfate

**(Total for Question 6 = 2 marks)**

7 When benzene reacts with a mixture of concentrated nitric and sulfuric acids, the reaction is

- A electrophilic addition.
- B electrophilic substitution.
- C nucleophilic addition.
- D nucleophilic substitution.

**(Total for Question 7 = 1 mark)**

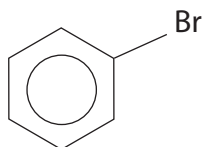


8 Benzene and phenol react with bromine.

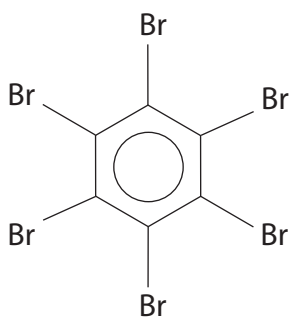
(a) What is the organic product when benzene reacts with excess bromine in the presence of ultraviolet light?

(1)

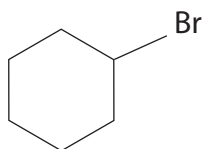
A



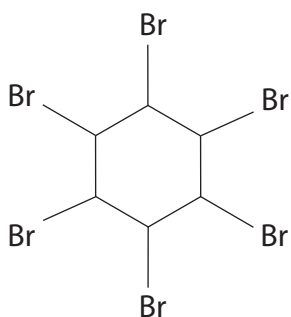
B



C



D



DO NOT WRITE IN THIS AREA

DO NOT WRITE IN THIS AREA

DO NOT WRITE IN THIS AREA



(b) Bromine reacts more readily with phenol than with benzene. This is because the

(1)

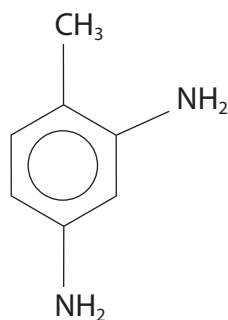
- A benzene ring in phenol is more susceptible to nucleophilic attack.
- B benzene ring in phenol is deactivated because the oxygen of the OH group is very electronegative.
- C lone pair of electrons on the oxygen atom in phenol overlap with the delocalised electrons in the benzene ring.
- D lone pair of electrons on the oxygen atom enable phenol to act as an electrophile.

**(Total for Question 8 = 2 marks)**

**Use this space for any rough working. Anything you write in this space will gain no credit.**



9 The structure of compound **G** is



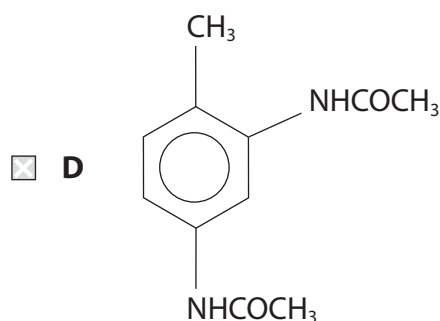
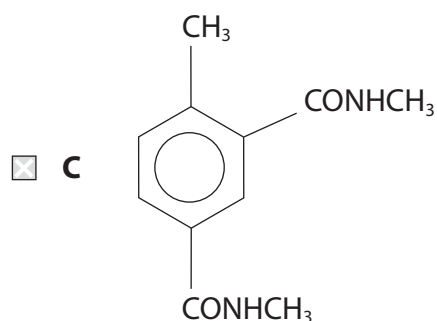
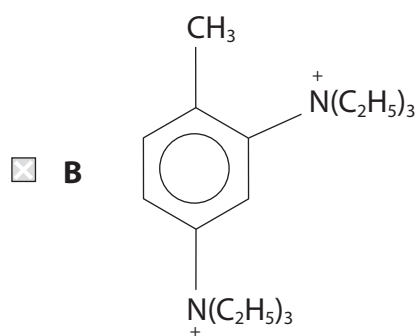
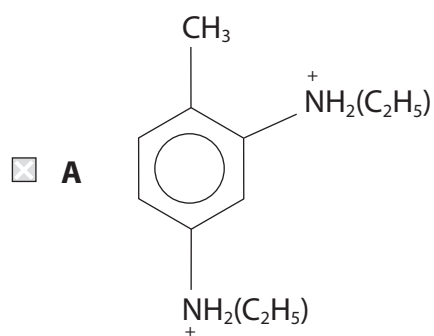
(a) What is the systematic name of compound **G**?

(1)

- A** 4-methylbenzene-1,3-diamine
- B** 4-methylbenzene-1,5-diamine
- C** 2-methylphenyldiamine
- D** 4-methylphenyldiamine

(b) What is the organic species formed in the reaction between compound **G** and **excess** ethanoyl chloride?

(1)

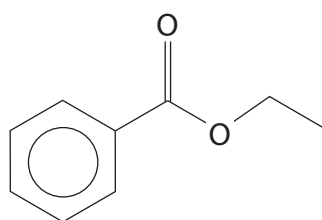


(Total for Question 9 = 2 marks)

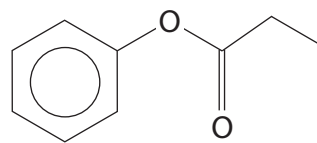




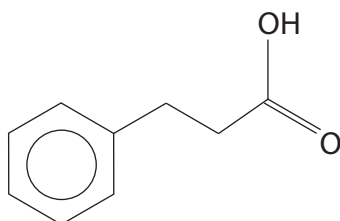
10 Four different compounds, **P**, **Q**, **R** and **S**, are structural isomers with molecular formula  $C_9H_{10}O_2$ .



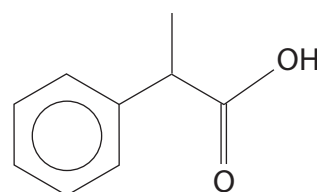
compound **P**



compound **Q**



compound **R**



compound **S**

(a) Which compound does **not** exhibit optical isomerism but does react with sodium hydrogencarbonate to give a colourless gas?

(1)

- A** Compound **P**
- B** Compound **Q**
- C** Compound **R**
- D** Compound **S**

(b) Which compound reacts with sodium hydroxide solution to give sodium benzoate as one of the products?

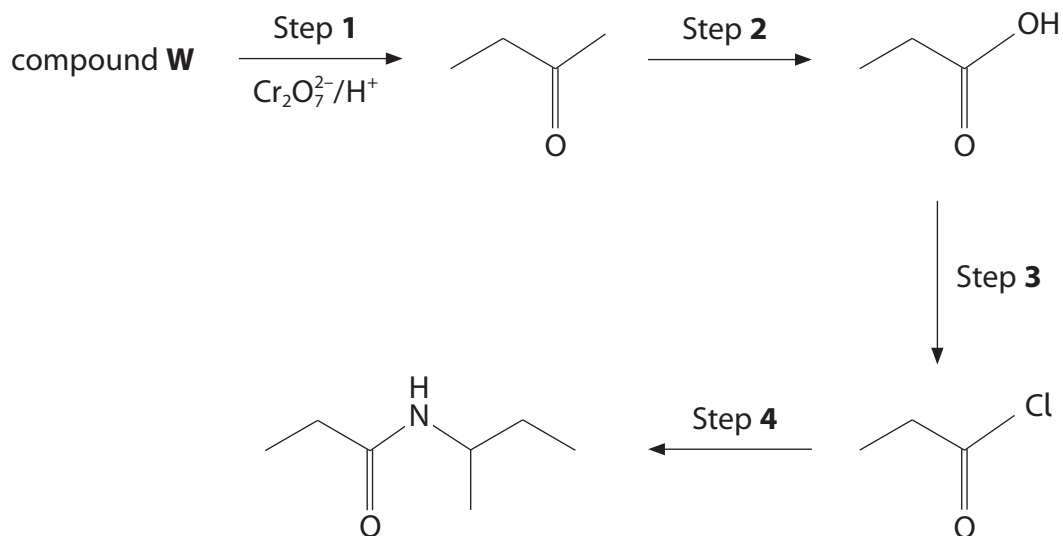
(1)

- A** Compound **P**
- B** Compound **Q**
- C** Compound **R**
- D** Compound **S**

(Total for Question 10 = 2 marks)



11 A reaction sequence is shown.



(a) What is compound **W**?

(1)

- A** Butan-1-ol
- B** Butan-2-ol
- C** 2-methylpropan-1-ol
- D** 2-methylpropan-2-ol

(b) Which substances are required for Step 2?

(1)

- A** Acidified potassium dichromate(VI)
- B** Iodine in alkali, followed by hydrochloric acid
- C** Sodium hydroxide solution followed by hydrochloric acid
- D** Ammoniacal silver nitrate (Tollens' reagent)

(c) Which is the reagent for Step 3?

(1)

- A** Aqueous chlorine
- B** Chlorine gas
- C** Hydrochloric acid
- D** Phosphorus(V) chloride



(d) Which is the reagent for Step 4?

(1)

- A  $\text{CH}_3\text{CH}_2\text{CH}_2\text{CH}_2\text{NH}_2$
- B  $\text{CH}_3\text{CH}(\text{NH}_2)\text{CH}_2\text{CH}_3$
- C  $\text{CH}_3\text{CH}_2\text{CH}_2\text{CONH}_2$
- D  $\text{CH}_3\text{CH}(\text{CONH}_2)\text{CH}_3$

(Total for Question 11 = 4 marks)

**TOTAL FOR SECTION A = 20 MARKS**

DO NOT WRITE IN THIS AREA

DO NOT WRITE IN THIS AREA

DO NOT WRITE IN THIS AREA



P 5 1 9 4 7 A 0 1 1 3 2

SECTION B

Answer ALL the questions. Write your answers in the spaces provided.

12 Aluminium and iron are both metallic elements. There are similarities and differences in the properties of their compounds.

(a) Both elements form compounds in which their oxidation number is +3.

(i) Complete the electronic configuration of the  $\text{Al}^{3+}$  and  $\text{Fe}^{3+}$  ions, using the s, p, d notation.

(2)

$\text{Al}^{3+}$   $1s^2$  .....

$\text{Fe}^{3+}$   $1s^2$  .....

(ii) Aluminium only forms compounds in which its oxidation number is +3, whereas iron has compounds with a variety of oxidation numbers. Suggest a reason why iron forms stable compounds with more than one oxidation number.

(1)

.....  
.....  
.....  
.....

\*(b) Most aluminium compounds are colourless but iron(III) compounds are coloured.

Explain why  $[\text{Fe}(\text{H}_2\text{O})_6]^{3+}$  ions are coloured.

(4)

.....  
.....  
.....  
.....  
.....  
.....  
.....  
.....  
.....

DO NOT WRITE IN THIS AREA

DO NOT WRITE IN THIS AREA

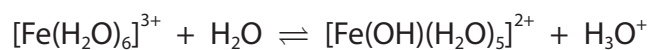
DO NOT WRITE IN THIS AREA



(c) Aluminium ions and iron(III) ions form complexes in solution.  
These solutions are acidic.

- (i) Draw the structure of the  $[\text{Fe}(\text{H}_2\text{O})_6]^{3+}$  complex ion, showing clearly the shape around the  $\text{Fe}^{3+}$  ion, and which atoms in the ligands are attached to the  $\text{Fe}^{3+}$  ion. (2)

\*(ii) The following equilibrium occurs in aqueous solution



Suggest why one of the water ligands loses a proton.

(2)

.....

.....

.....

.....



- (d) Aluminium chloride,  $\text{AlCl}_3$ , and iron(III) chloride,  $\text{FeCl}_3$ , can both be used as catalysts in Friedel-Crafts reactions.

The reaction between benzene and chloromethane, using an aluminium chloride catalyst, can be summarised as



Suggest, by reference to the electronic structure of  $\text{AlCl}_3$ , how the  $\text{AlCl}_4^-$  ion forms.

(2)

.....

.....

.....

.....

- (e) Thiocyanate ions,  $\text{SCN}^-$ , are used to test for the presence of  $\text{Fe}^{3+}$  ions in aqueous solution. A blood red colour, caused by the complex ion  $[\text{Fe}(\text{SCN})(\text{H}_2\text{O})_5]^{2+}$ , is seen.

(i) State the type of reaction taking place.

(1)

.....

(ii) Draw a dot-and-cross diagram of the thiocyanate ion,  $[\text{SCN}]^-$ . Hence suggest a structure of the ion, showing all the bonds and which atom has the negative charge.

(2)



(iii) Suggest **two** ways in which the thiocyanate ion could bond to the  $\text{Fe}^{3+}$  in the complex. (1)

(f) Aluminium hydroxide,  $\text{Al}(\text{OH})_3$ , is amphoteric.

Write **ionic** equations for the reactions of aluminium hydroxide with hydrochloric acid and with sodium hydroxide solution. State symbols are not required. (2)

Ionic equation with hydrochloric acid

Ionic equation with sodium hydroxide solution

(Total for Question 12 = 19 marks)

DO NOT WRITE IN THIS AREA

DO NOT WRITE IN THIS AREA

DO NOT WRITE IN THIS AREA



**13** This question is about carboxylic acids.

(a) An organic compound, **T**, contains the elements carbon, hydrogen and oxygen only. **T** contains a carboxylic acid group and one other functional group.

\*(i) A sample of compound **T** of mass 2.25 g was burned completely, producing 3.30 g of carbon dioxide and 1.35 g of water. In the mass spectrum of compound **T**, the molecular ion peak is at  $m/e = 90$ .

Use all the data to calculate the molecular formula of compound **T**.

You **must** show your working.

(6)





(ii) The mass spectrum of compound **T** has a peak at  $m/e = 45$ .

Give the **displayed formulae** of **two** species that could produce this peak.

(2)

(iii) The low resolution proton nmr spectrum of compound **T** has four peaks with areas in the ratio 1:2:2:1.

Draw the structure of compound **T** and explain how your structure is consistent with the proton nmr data.

(3)

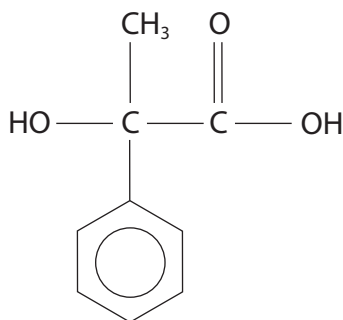
DO NOT WRITE IN THIS AREA

DO NOT WRITE IN THIS AREA

DO NOT WRITE IN THIS AREA



(b) The structure of 2-hydroxy-2-phenylpropanoic acid is shown.



- \* (i) Outline how 2-hydroxy-2-phenylpropanoic acid can be synthesised in **three** steps starting from benzene and an acyl chloride.

Include the reagents for each step in the synthesis and draw the structures of the two organic intermediates.

(5)



(ii) Poly(2-hydroxy-2-phenylpropanoic acid) is a possible biodegradable polymer.

Draw a section of this polymer, showing **two** repeat units.

(2)

DO NOT WRITE IN THIS AREA

DO NOT WRITE IN THIS AREA

DO NOT WRITE IN THIS AREA

(Total for Question 13 = 18 marks)



P 5 1 9 4 7 A 0 1 9 3 2

14 This question is about redox reactions.

- (a) Vanadium exists in different oxidation states which can be interconverted using suitable oxidising and reducing agents.

Some relevant standard electrode potentials are shown in the table.

Half-equation	$E^\ominus / \text{V}$
$\text{Zn}^{2+}(\text{aq}) + 2\text{e}^- \rightleftharpoons \text{Zn}(\text{s})$	-0.76
$\text{V}^{3+}(\text{aq}) + \text{e}^- \rightleftharpoons \text{V}^{2+}(\text{aq})$	-0.26
$\text{SO}_4^{2-}(\text{aq}) + 4\text{H}^+(\text{aq}) + 2\text{e}^- \rightleftharpoons \text{SO}_2(\text{aq}) + 2\text{H}_2\text{O}(\text{l})$	+0.17
$\text{VO}^{2+}(\text{aq}) + 2\text{H}^+(\text{aq}) + \text{e}^- \rightleftharpoons \text{V}^{3+}(\text{aq}) + \text{H}_2\text{O}(\text{l})$	+0.34
$\text{Fe}^{3+}(\text{aq}) + \text{e}^- \rightleftharpoons \text{Fe}^{2+}(\text{aq})$	+0.77
$\text{VO}_2^+(\text{aq}) + 2\text{H}^+(\text{aq}) + \text{e}^- \rightleftharpoons \text{VO}^{2+}(\text{aq}) + \text{H}_2\text{O}(\text{l})$	+1.00

- (i) Write the overall half-equation for the oxidation of vanadium(II) ions to the vanadium(V) ions,  $\text{VO}_2^+$ . State symbols are not required.

(1)

- (ii) Select, from the table, a reducing agent which should reduce vanadium(V) to vanadium(IV) but not to vanadium(III). Justify your answer.

(3)

.....

.....

.....

.....

.....

.....



(iii) Write the balanced equation for the disproportionation of  $V^{3+}$  into  $V^{2+}$  and  $VO^{2+}$  and explain whether this reaction is feasible under standard conditions. State symbols are not required.

(3)

DO NOT WRITE IN THIS AREA

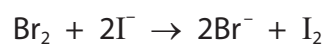
DO NOT WRITE IN THIS AREA

DO NOT WRITE IN THIS AREA

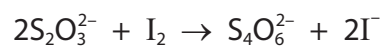


P 5 1 9 4 7 A 0 2 1 3 2

- (b) Excess potassium iodide solution was added to  $25.0 \text{ cm}^3$  of an aqueous solution of bromine.



The iodine produced was titrated with sodium thiosulfate solution. All of the iodine required  $24.20 \text{ cm}^3$  of  $0.100 \text{ mol dm}^{-3}$  sodium thiosulfate solution for reaction.



- (i) Calculate the concentration of the aqueous solution of bromine.

(2)



- (ii) In another experiment,  $100.0\text{ cm}^3$  of the same aqueous solution of bromine was treated directly with  $0.00100$  moles of sodium thiosulfate.

Excess potassium iodide was then added to the unreacted bromine.

The iodine produced required  $16.80\text{ cm}^3$  of the  $0.100\text{ mol dm}^{-3}$  sodium thiosulfate solution for reaction.

Deduce the mole ratio of  $\text{S}_2\text{O}_3^{2-} : \text{Br}_2$  and hence write a balanced equation for the reaction between thiosulfate ions and bromine.

State symbols are not required.

(5)

---

(Total for Question 14 = 14 marks)

---

**TOTAL FOR SECTION B = 51 MARKS**



## SECTION C

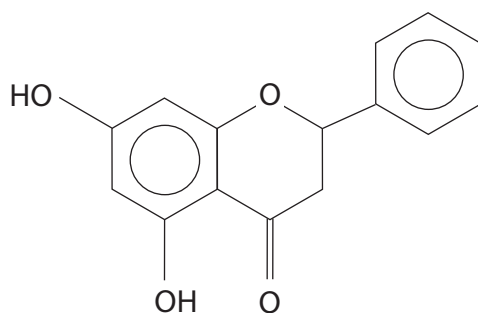
Answer ALL the questions. Write your answers in the spaces provided.

15

### Sweeteners

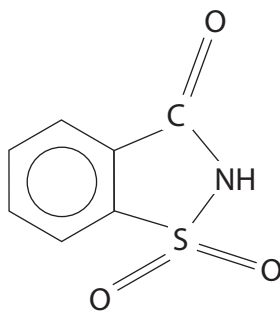
Table sugar (sucrose) contributes to tooth decay and obesity, so some manufacturers add other natural or artificial sweeteners to food.

Honey is a natural sweetener and has about the same relative sweetness as sucrose. The sweetness arises from the simple sugars glucose and fructose. Honey also contains pinocembrin which is an antioxidant.



pinocembrin

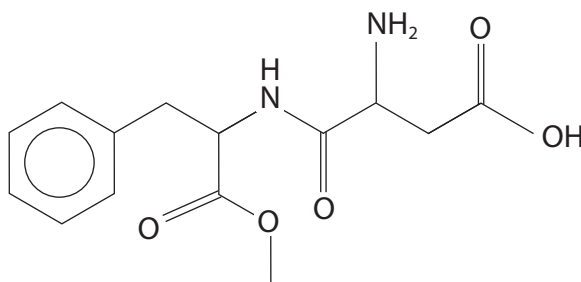
Saccharin is an artificial sweetener, which was first produced in 1879. It is over 300 times sweeter than sucrose.



saccharin

It is normally used as the sodium salt, which is very soluble in water.

Aspartame is an ester of the dipeptide formed from the amino acids phenylalanine and aspartic acid. It was first produced in 1965 and is about 200 times sweeter than sucrose.



aspartame



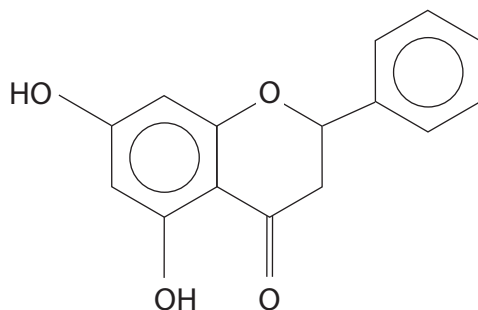


(a) (i) Give the molecular formula for pinocembrin.

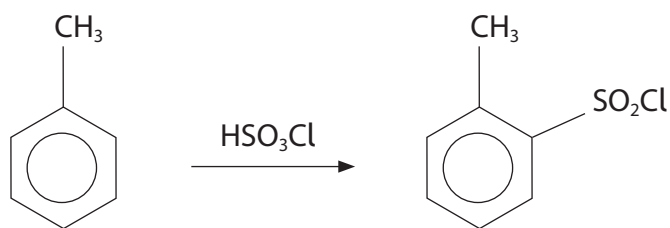
(1)

(ii) Label the chiral carbon atom in pinocembrin with an asterisk (\*).

(1)



(b) One route for the synthesis of saccharin starts with the reaction between methylbenzene and chlorosulfonic acid,  $\text{HSO}_3\text{Cl}$ .



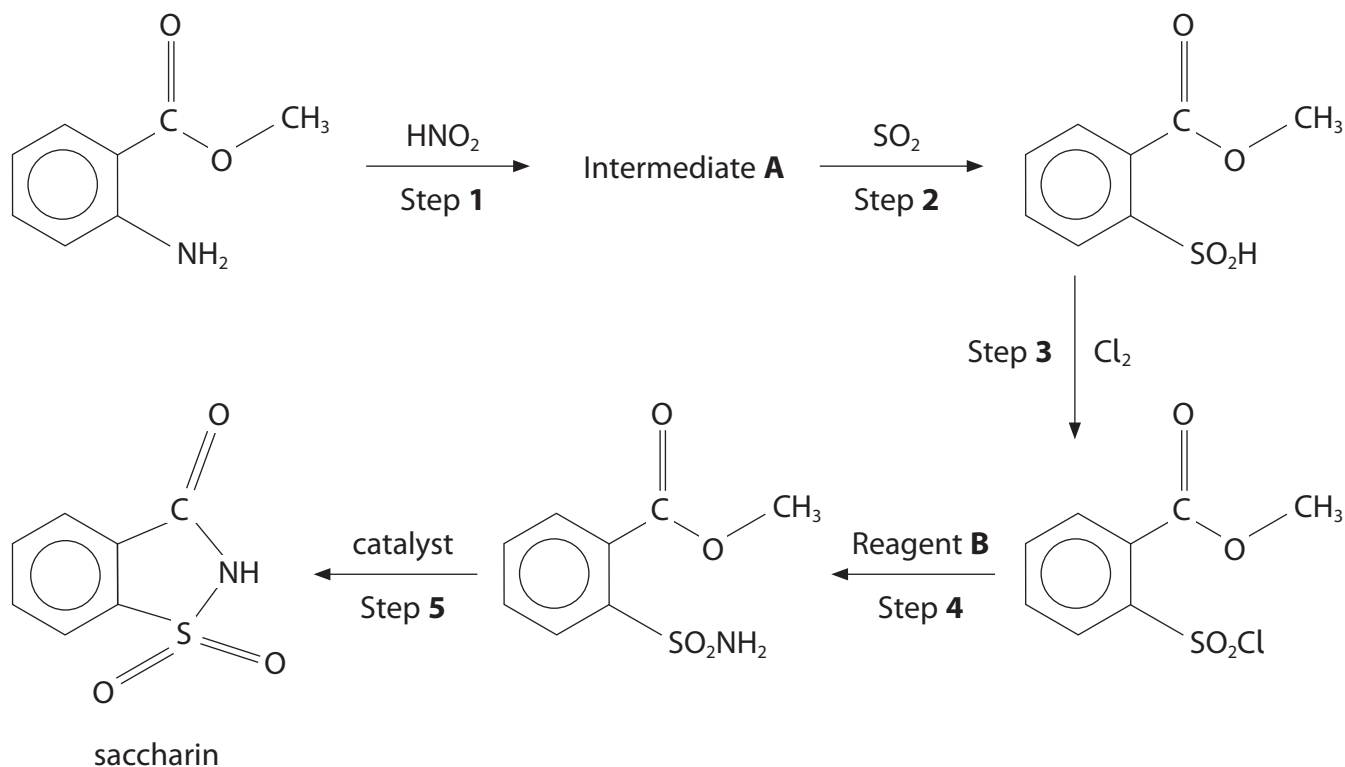
Draw the mechanism for this reaction.

The electrophile is  $^+\text{SO}_2\text{Cl}$ .

(3)



(c) Another route for the synthesis of saccharin starts with the reaction between methyl 2-aminobenzoate and nitrous acid (prepared from sodium nitrite and hydrochloric acid).



(i) Give the structure of the Intermediate **A**.

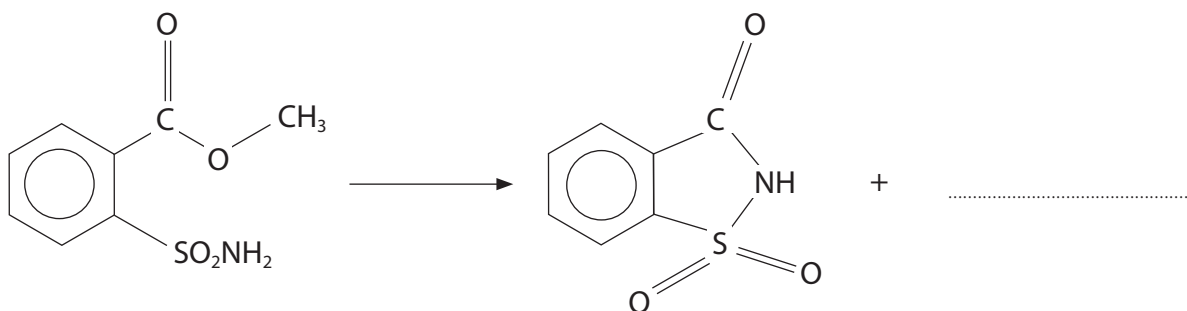
(1)

(ii) Suggest a substance for Reagent **B** in Step 4.

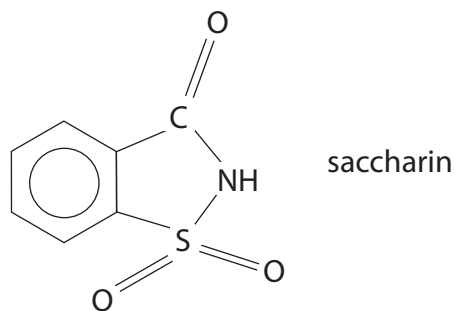
(1)

(iii) Complete the equation for the formation of saccharin in Step 5.

(1)



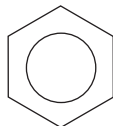
(iv) The sodium salt of saccharin is much more soluble in water than saccharin.



The acidic hydrogen is the one that is attached to the nitrogen atom.

Complete the structure of the sodium salt of saccharin, showing the charges on both ions.

(1)



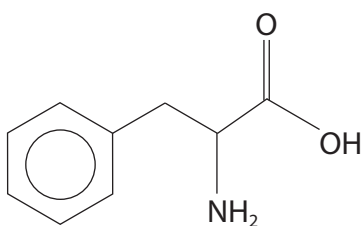
DO NOT WRITE IN THIS AREA

DO NOT WRITE IN THIS AREA

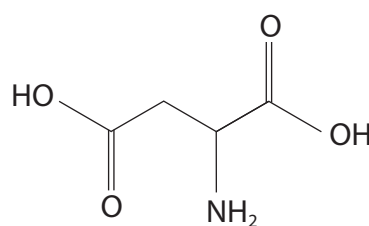
DO NOT WRITE IN THIS AREA



(d) Phenylalanine and aspartic acid are amino acids.



phenylalanine



aspartic acid

- (i) Draw the structure of the organic compound formed when hydrochloric acid is added to phenylalanine.

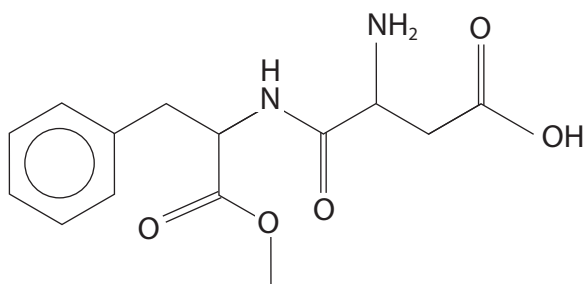
(1)

- (ii) Draw the structure of the organic product formed when **excess** sodium hydroxide solution is added to aspartic acid.

(1)



(iii) The structure of aspartame is



aspartame

Draw the structure of the dipeptide formed between phenylalanine and aspartic acid that is required to form aspartame.

(2)

(iv) Identify, by name or formula, the alcohol needed to form aspartame from the dipeptide in (d)(iii).

(1)

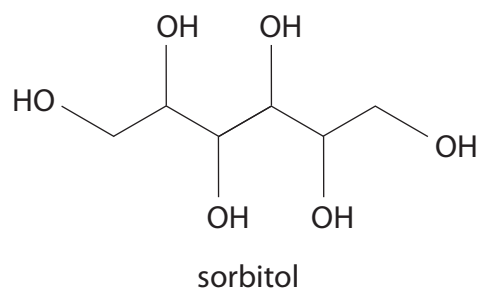
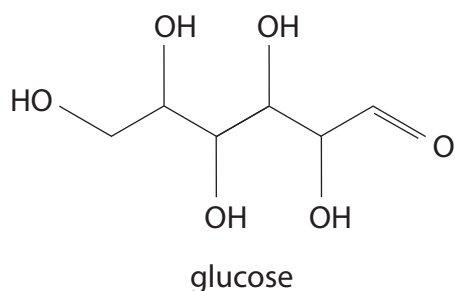
DO NOT WRITE IN THIS AREA

DO NOT WRITE IN THIS AREA

DO NOT WRITE IN THIS AREA



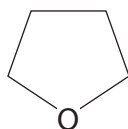
- (e) Sugar alcohols, such as sorbitol, are also used as artificial sweeteners.  
Sorbitol is made from glucose.



- (i) State the reagent needed to convert glucose into sorbitol. (1)

- (ii) Describe a chemical test which will distinguish between glucose and sorbitol.  
Give the result for each substance. (3)

- (iii) Sorbitol is dehydrated to form sorbitan. Sorbitan contains a ring with four carbon atoms and one oxygen atom. Complete the formula of sorbitan. (1)



**(Total for Question 15 = 19 marks)**

**TOTAL FOR SECTION C = 19 MARKS**  
**TOTAL FOR PAPER = 90 MARKS**



DO NOT WRITE IN THIS AREA

DO NOT WRITE IN THIS AREA

DO NOT WRITE IN THIS AREA

**BLANK PAGE**



# The Periodic Table of Elements

1 2 3 4 5 6 7 0 (8) (18)

1.0	<b>H</b>
	hydrogen
	1

### Key

relative atomic mass
<b>atomic symbol</b>
name
atomic (proton) number

(1)	(2)	(3)	(4)	(5)	(6)	(7)	(8)	(9)	(10)	(11)	(12)	(13)	(14)	(15)	(16)	(17)	(18)
6.9	9.0	45.0	47.9	50.9	52.0	54.9	55.8	58.9	58.7	63.5	65.4	10.8	12.0	14.0	16.0	19.0	4.0
<b>Li</b>	<b>Be</b>	<b>Sc</b>	<b>Ti</b>	<b>V</b>	<b>Cr</b>	<b>Mn</b>	<b>Fe</b>	<b>Co</b>	<b>Ni</b>	<b>Cu</b>	<b>Zn</b>	<b>B</b>	<b>C</b>	<b>N</b>	<b>O</b>	<b>F</b>	<b>He</b>
lithium	beryllium	scandium	titanium	vanadium	chromium	manganese	iron	cobalt	nickel	copper	zinc	boron	carbon	nitrogen	oxygen	fluorine	helium
3	4	21	22	23	24	25	26	27	28	29	30	5	6	7	8	9	2
23.0	24.3	88.9	91.2	92.9	95.9	[98]	101.1	102.9	106.4	107.9	112.4	27.0	28.1	31.0	32.1	35.5	39.9
<b>Na</b>	<b>Mg</b>	<b>Y</b>	<b>Zr</b>	<b>Nb</b>	<b>Mo</b>	<b>Tc</b>	<b>Ru</b>	<b>Rh</b>	<b>Pd</b>	<b>Ag</b>	<b>Cd</b>	<b>Al</b>	<b>Si</b>	<b>P</b>	<b>S</b>	<b>Cl</b>	<b>Ar</b>
sodium	magnesium	yttrium	zirconium	niobium	molybdenum	technetium	ruthenium	rhodium	palladium	silver	cadmium	aluminium	silicon	phosphorus	sulfur	chlorine	argon
11	12	39	40	41	42	43	44	45	46	47	48	13	14	15	16	17	18
39.1	40.1	88.9	91.2	92.9	95.9	[98]	101.1	102.9	106.4	107.9	112.4	69.7	72.6	74.9	79.0	79.9	83.8
<b>K</b>	<b>Ca</b>	<b>La*</b>	<b>Hf</b>	<b>Ta</b>	<b>W</b>	<b>Re</b>	<b>Os</b>	<b>Ir</b>	<b>Pt</b>	<b>Au</b>	<b>Hg</b>	<b>Ga</b>	<b>Ge</b>	<b>As</b>	<b>Se</b>	<b>Br</b>	<b>Kr</b>
potassium	calcium	lanthanum	hafnium	tantalum	tungsten	rhenium	osmium	iridium	platinum	gold	mercury	gallium	germanium	arsenic	selenium	bromine	krypton
19	20	57	72	73	74	75	76	77	78	79	80	31	32	33	34	35	36
85.5	87.6	138.9	178.5	180.9	183.8	186.2	190.2	192.2	195.1	197.0	200.6	69.7	72.6	74.9	79.0	79.9	131.3
<b>Rb</b>	<b>Sr</b>	<b>La*</b>	<b>Hf</b>	<b>Ta</b>	<b>W</b>	<b>Re</b>	<b>Os</b>	<b>Ir</b>	<b>Pt</b>	<b>Au</b>	<b>Hg</b>	<b>In</b>	<b>Sn</b>	<b>Sb</b>	<b>Te</b>	<b>I</b>	<b>Xe</b>
rubidium	strontium	lanthanum	hafnium	tantalum	tungsten	rhenium	osmium	iridium	platinum	gold	mercury	indium	tin	antimony	tellurium	iodine	xenon
37	38	57	72	73	74	75	76	77	78	79	80	49	50	51	52	53	54
132.9	137.3	[227]	[261]	[262]	[266]	[264]	[277]	[268]	[271]	[272]	204.4	114.8	118.7	121.8	127.6	126.9	131.3
<b>Cs</b>	<b>Ba</b>	<b>Ra*</b>	<b>Rf</b>	<b>Db</b>	<b>Sg</b>	<b>Bh</b>	<b>Hs</b>	<b>Mt</b>	<b>Ds</b>	<b>Rg</b>	207.2	114.8	118.7	121.8	127.6	126.9	131.3
caesium	barium	radium	rutherfordium	dubnium	seaborgium	bohrium	hassium	meitnerium	darmstadtium	roentgenium	lead	tin	antimony	tellurium	iodine	astatine	radon
55	56	88	104	105	106	107	108	109	110	111	82	81	82	83	84	85	86
[223]	[226]	[227]	[261]	[262]	[266]	[264]	[277]	[268]	[271]	[272]	[209]	[209]	[209]	[209]	[209]	[210]	[222]
<b>Fr</b>	<b>Ra</b>	<b>Ac*</b>	<b>Rf</b>	<b>Db</b>	<b>Sg</b>	<b>Bh</b>	<b>Hs</b>	<b>Mt</b>	<b>Ds</b>	<b>Rg</b>	209.0	204.4	207.2	209.0	209.0	210]	[222]
francium	radium	actinium	rutherfordium	dubnium	seaborgium	bohrium	hassium	meitnerium	darmstadtium	roentgenium	bismuth	thallium	lead	polonium	astatine	radon	
87	88	89	104	105	106	107	108	109	110	111	83	82	82	84	85	86	

Elements with atomic numbers 112-116 have been reported but not fully authenticated

140	141	144	150	152	157	163	165	167	169	173	175
<b>Ce</b>	<b>Pr</b>	<b>Nd</b>	<b>Sm</b>	<b>Eu</b>	<b>Gd</b>	<b>Dy</b>	<b>Ho</b>	<b>Er</b>	<b>Tm</b>	<b>Yb</b>	<b>Lu</b>
cerium	praseodymium	neodymium	samarium	europtium	gadolinium	dysprosium	holmium	erbium	thulium	ytterbium	lutetium
58	59	60	62	63	64	66	67	68	69	70	71
* Lanthanide series	* Actinide series										
232	[231]	238	[242]	[243]	[247]	[251]	[254]	[253]	[256]	[254]	[257]
<b>Th</b>	<b>Pa</b>	<b>U</b>	<b>Pu</b>	<b>Am</b>	<b>Cm</b>	<b>Cf</b>	<b>Es</b>	<b>Fm</b>	<b>Md</b>	<b>No</b>	<b>Lr</b>
thorium	protactinium	uranium	plutonium	americium	curium	californium	einsteinium	fermium	mendelevium	nobelium	lawrencium
90	91	92	94	95	96	98	99	100	101	102	103

DO NOT WRITE IN THIS AREA

DO NOT WRITE IN THIS AREA

DO NOT WRITE IN THIS AREA

