

Write your name here	
Surname	Other names
<b>Pearson Edexcel</b> International Advanced Level	Centre Number
	Candidate Number
<b>Chemistry</b>	
<b>Advanced</b>	
<b>Unit 4: General Principles of Chemistry I – Rates, Equilibria and Further Organic Chemistry (including synoptic assessment)</b>	
Tuesday 31 October 2017 – Morning <b>Time: 1 hour 40 minutes</b>	Paper Reference <b>WCH04/01</b>
<b>Candidates must have: Data Booklet Scientific calculator</b>	Total Marks

### Instructions

- Use **black** ink or **black** ball-point pen.
- **Fill in the boxes** at the top of this page with your name, centre number and candidate number.
- Answer **all** questions.
- Answer the questions in the spaces provided  
– *there may be more space than you need.*

### Information

- The total mark for this paper is 90.
- The marks for **each** question are shown in brackets  
– *use this as a guide as to how much time to spend on each question.*
- Questions labelled with an **asterisk** (\*) are ones where the quality of your written communication will be assessed  
– *you should take particular care with your spelling, punctuation and grammar, as well as the clarity of expression, on these questions.*
- A Periodic Table is printed on the back cover of this paper.

### Advice

- Read each question carefully before you start to answer it.
- Try to answer every question.
- Check your answers if you have time at the end.
- Show all your working in calculations and include units where appropriate.

Turn over ►

P50788A

©2017 Pearson Education Ltd.  
6/5/5/5/1/8/c2

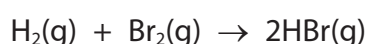


  
Pearson

## SECTION A

Answer ALL the questions in this section. You should aim to spend no more than 20 minutes on this section. For each question, select one answer from A to D and put a cross in the box ☒. If you change your mind, put a line through the box ~~☒~~ and then mark your new answer with a cross ☒.

- 1 The rate of the reaction between hydrogen and bromine is investigated.



- (a) The progress of this reaction may be continuously monitored by measuring the change in (1)

- A volume.
- B pressure.
- C pH.
- D colour.

- (b) What can be deduced about the rate equation for this reaction from its chemical equation? (1)

- A It is first order with respect to both hydrogen and bromine.
- B It is second order with respect to hydrogen bromide.
- C It is second order with respect to both hydrogen and bromine.
- D Nothing, because the chemical equation gives no information about the mechanism.

(Total for Question 1 = 2 marks)

Use this space for any rough working. Anything you write in this space will gain no credit.

DO NOT WRITE IN THIS AREA

DO NOT WRITE IN THIS AREA

DO NOT WRITE IN THIS AREA

DO NOT WRITE IN THIS AREA

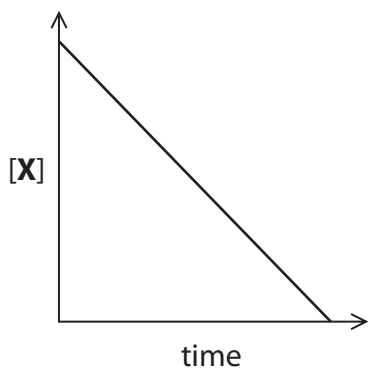
DO NOT WRITE IN THIS AREA

DO NOT WRITE IN THIS AREA

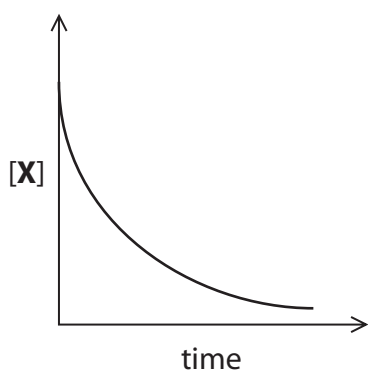


2 The decomposition of compound X is first order. The correct graph for this is

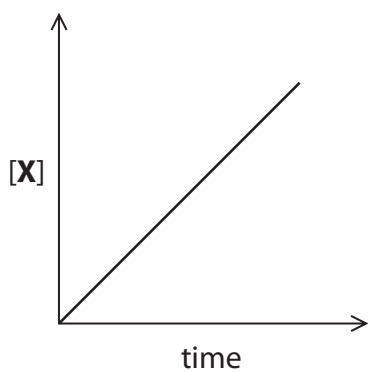
A



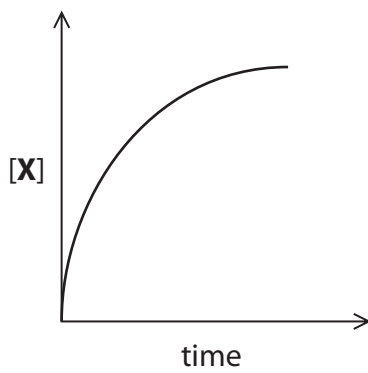
B



C



D



(Total for Question 2 = 1 mark)



- 3 For a zero order reaction, the relationship between  $[Y]_0$  which is the concentration of Y at the start of any half-life, the rate constant,  $k$ , and the half-life,  $t_{1/2}$ , is

$$[Y]_0 = 2kt_{1/2}$$

From this it can be deduced that for a zero order reaction the half-life

- A increases as the reaction proceeds.
- B decreases as the reaction proceeds.
- C remains constant when the temperature is constant.
- D remains constant under all conditions.

(Total for Question 3 = 1 mark)

- 4 If an endothermic reaction is thermodynamically feasible, it may be deduced that

- A the activation energy is low.
- B  $\Delta S_{\text{surroundings}}$  is positive.
- C  $\Delta S_{\text{system}}$  is positive.
- D  $\Delta S_{\text{total}}$  is negative.

(Total for Question 4 = 1 mark)

- 5 Calcium carbonate is stable at room temperature but decomposes when heated strongly:



The best explanation for this is

- A  $\Delta S_{\text{surroundings}}$  becomes less negative as temperature increases.
- B  $\Delta S_{\text{system}}$  becomes more positive as temperature increases.
- C the entropy of gases is higher than that of solids.
- D the entropy of a substance increases with temperature.

(Total for Question 5 = 1 mark)

Use this space for any rough working. Anything you write in this space will gain no credit.

DO NOT WRITE IN THIS AREA

DO NOT WRITE IN THIS AREA

DO NOT WRITE IN THIS AREA

DO NOT WRITE IN THIS AREA

DO NOT WRITE IN THIS AREA

DO NOT WRITE IN THIS AREA

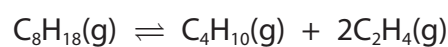


6 At 298 K, butane has a larger standard molar entropy than 2-methylpropane. The explanation for this is that butane has

- A more ways of distributing energy quanta.
- B fewer ways of distributing energy quanta.
- C a less negative standard molar enthalpy change of formation.
- D a higher boiling temperature.

(Total for Question 6 = 1 mark)

7 The cracking of alkanes is carried out at high temperature. The equation for a typical reaction is



When the pressure is increased, the reaction shifts to the

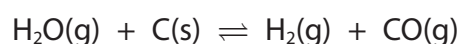
- A right to re-establish the equilibrium.
- B left to re-establish the equilibrium.
- C right, and then moves to the left to re-establish the equilibrium.
- D left, and then moves to the right to re-establish the equilibrium.

(Total for Question 7 = 1 mark)

Use this space for any rough working. Anything you write in this space will gain no credit.



- 8 Water gas is a mixture of carbon monoxide and hydrogen produced by passing steam over white-hot carbon:



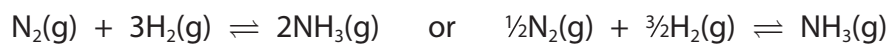
The equilibrium constant,  $K_p$ , for this reaction is given by the expression

- A  $p(\text{H}_2) \times p(\text{CO})$
- B  $\frac{1}{p(\text{H}_2) \times p(\text{CO})}$
- C  $\frac{p(\text{H}_2) \times p(\text{CO})}{p(\text{H}_2\text{O})}$
- D  $\frac{p(\text{H}_2\text{O})}{p(\text{H}_2) \times p(\text{CO})}$

(Total for Question 8 = 1 mark)

- 9 In the Haber process, ammonia is produced on an industrial scale by an exothermic reaction.

(a) The equation for the Haber process can be written as



The units of the equilibrium constant,  $K_c$ , are

(1)

	$\text{N}_2(\text{g}) + 3\text{H}_2(\text{g}) \rightleftharpoons 2\text{NH}_3(\text{g})$	$\frac{1}{2}\text{N}_2(\text{g}) + \frac{3}{2}\text{H}_2(\text{g}) \rightleftharpoons \text{NH}_3(\text{g})$
<input type="checkbox"/> A	$\text{dm}^6 \text{mol}^{-2}$	$\text{dm}^3 \text{mol}^{-1}$
<input type="checkbox"/> B	$\text{dm}^6 \text{mol}^{-2}$	$\text{dm}^6 \text{mol}^{-2}$
<input type="checkbox"/> C	$\text{mol}^2 \text{dm}^{-6}$	$\text{mol dm}^{-3}$
<input type="checkbox"/> D	$\text{mol}^2 \text{dm}^{-6}$	$\text{mol}^2 \text{dm}^{-6}$



(b) The Haber process is carried out at temperatures between 673 K and 773 K.  
What is the effect of increasing the temperature on the reaction?

(1)

	Rate	Equilibrium yield
<input type="checkbox"/> A	increased	increased
<input type="checkbox"/> B	increased	decreased
<input type="checkbox"/> C	decreased	increased
<input type="checkbox"/> D	decreased	decreased

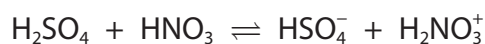
(Total for Question 9 = 2 marks)

10 The equilibrium constant for a reaction always increases when there is an increase in

- A pressure
- B temperature
- C  $\Delta S_{\text{system}}$
- D  $\Delta S_{\text{total}}$

(Total for Question 10 = 1 mark)

11 When concentrated nitric and sulfuric acids are mixed, the reaction is



In this reaction, the Brønsted-Lowry acids are

- A  $\text{H}_2\text{SO}_4$  and  $\text{HNO}_3$
- B  $\text{H}_2\text{SO}_4$  and  $\text{H}_2\text{NO}_3^+$
- C  $\text{HNO}_3$  and  $\text{H}_2\text{NO}_3^+$
- D  $\text{HNO}_3$  and  $\text{HSO}_4^-$

(Total for Question 11 = 1 mark)

Use this space for any rough working. Anything you write in this space will gain no credit.



P 5 0 7 8 8 A 0 7 2 8

12 Hydrofluoric acid, HF, is a weak acid ( $pK_a = 3.2$ ). What happens when a  $1 \text{ mol dm}^{-3}$  solution of hydrofluoric acid is diluted with an equal volume of water?

	Percentage of HF molecules dissociated	pH
<input type="checkbox"/> A	decreases	decreases
<input type="checkbox"/> B	decreases	increases
<input type="checkbox"/> C	increases	increases
<input type="checkbox"/> D	increases	decreases

(Total for Question 12 = 1 mark)

13 Two buffer solutions, **M** and **N**, were prepared by mixing  $50 \text{ cm}^3$  of ethanoic acid and  $50 \text{ cm}^3$  of sodium ethanoate solutions. In buffer **M**, both components were  $2 \text{ mol dm}^{-3}$  and in buffer **N**, both components were  $1 \text{ mol dm}^{-3}$ .

The pH values of **M** and **N** were compared initially and then  $1 \text{ mol dm}^{-3}$  hydrochloric acid was added to each until the first change in pH was observed.

	Initial pH	Effect of adding acid
<input type="checkbox"/> A	<b>M</b> higher pH	pH of <b>M</b> changed first
<input type="checkbox"/> B	<b>N</b> higher pH	pH of <b>N</b> changed first
<input type="checkbox"/> C	<b>M</b> and <b>N</b> same pH	pH of <b>M</b> changed first
<input type="checkbox"/> D	<b>M</b> and <b>N</b> same pH	pH of <b>N</b> changed first

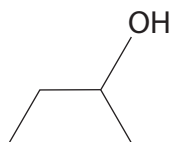
(Total for Question 13 = 1 mark)

Use this space for any rough working. Anything you write in this space will gain no credit.

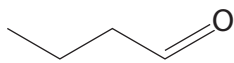




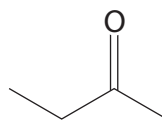
14 This question concerns four organic compounds:



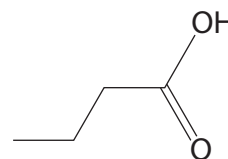
P



Q



R



S

(a) The compound which will have the **fewest** peaks in its low resolution proton nmr spectrum is

(1)

- A P
- B Q
- C R
- D S

(b) The compound which is oxidised by acidified potassium dichromate(VI) **and** reduced by lithium tetrahydridoaluminate(III) is

(1)

- A P
- B Q
- C R
- D S

(c) Which two compounds react together to form a new organic compound?

(1)

- A Q and S
- B R and S
- C P and S
- D Q and R

(Total for Question 14 = 3 marks)



P 5 0 7 8 8 A 0 9 2 8

15 The most energy efficient method of heating a chemical reaction is using

- A microwave radiation.
- B infrared radiation.
- C a Bunsen burner.
- D a water bath.

(Total for Question 15 = 1 mark)

16 Magnetic Resonance Imaging (MRI) is widely used in hospitals and clinics for medical diagnosis. The technique uses

- A microwaves.
- B radio waves.
- C ultrasound.
- D X-rays.

(Total for Question 16 = 1 mark)

**TOTAL FOR SECTION A = 20 MARKS**

DO NOT WRITE IN THIS AREA

DO NOT WRITE IN THIS AREA

DO NOT WRITE IN THIS AREA

DO NOT WRITE IN THIS AREA

DO NOT WRITE IN THIS AREA

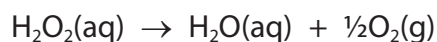
DO NOT WRITE IN THIS AREA



**SECTION B**

**Answer ALL the questions. Write your answers in the spaces provided.**

**17** Hydrogen peroxide decomposes to form water and oxygen in a first order reaction.



The decomposition is slow under normal conditions but occurs rapidly in the presence of a catalyst such as manganese(IV) oxide.

(a) (i) Write the rate equation for the decomposition of hydrogen peroxide. (1)

(ii) Draw a diagram of an apparatus that could be used to continuously monitor the progress of this reaction. State the measurements that would be made. (3)

.....

.....

.....



(b) Data obtained in a suitable experiment were used to calculate some results.

$[\text{H}_2\text{O}_2(\text{aq})] / \text{mol dm}^{-3}$	Time / s
2.00	0.0
1.50	
1.00	
0.75	
0.50	560
0.25	

- (i) Complete the table by inserting as many times as possible. If you think that it is not possible to give a time without using the value of the rate constant, put a cross (X) in the box. (2)
- (ii) Explain how the data in the completed table can be used to obtain the rate of the reaction at a particular concentration. No calculation is required. (2)

.....

.....

.....

.....

- (iii) When the concentration of hydrogen peroxide was  $0.75 \text{ mol dm}^{-3}$ , the rate of reaction was  $1.9 \times 10^{-3} \text{ mol dm}^{-3} \text{ s}^{-1}$ .
- Calculate the rate constant for the reaction. Include units with your answer. (2)

DO NOT WRITE IN THIS AREA

DO NOT WRITE IN THIS AREA

DO NOT WRITE IN THIS AREA

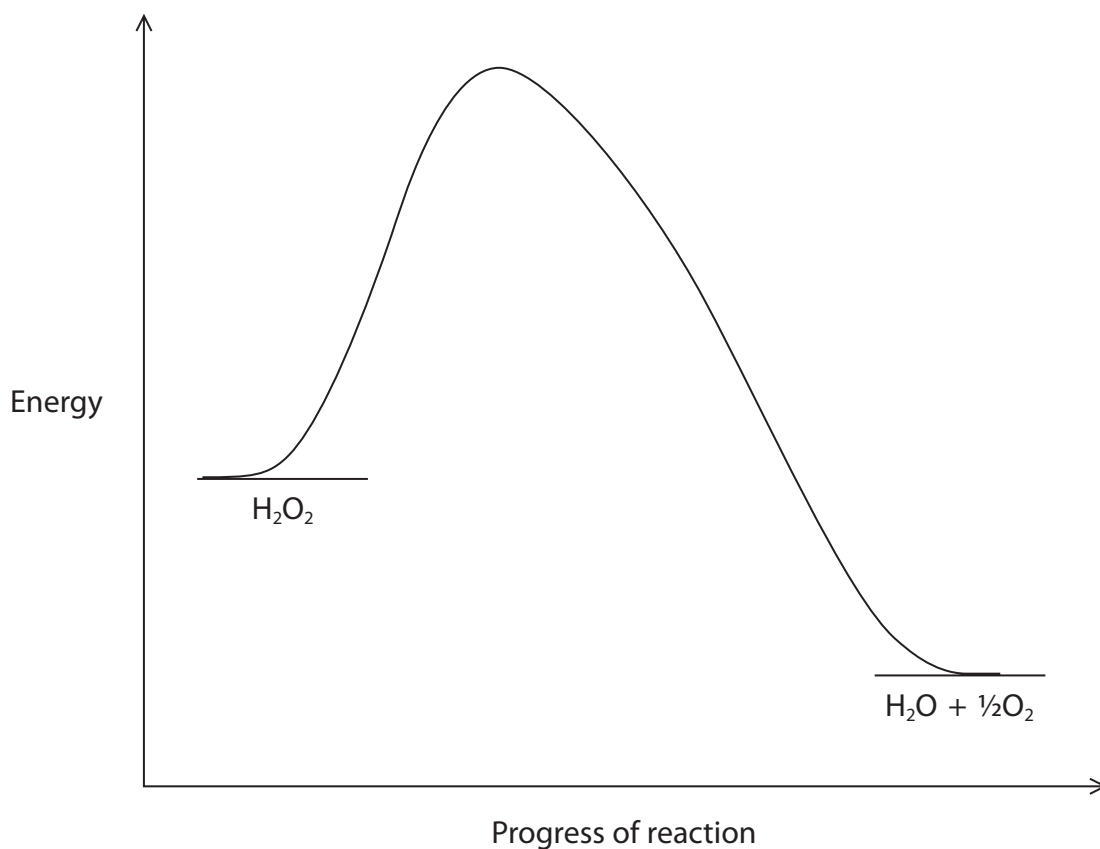
DO NOT WRITE IN THIS AREA

DO NOT WRITE IN THIS AREA

DO NOT WRITE IN THIS AREA



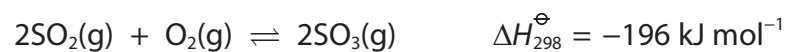
- (c) The diagram below shows the reaction profile for the decomposition of hydrogen peroxide without a catalyst. On the diagram draw the reaction profile for the catalysed reaction, which involves an intermediate. (2)



(Total for Question 17 = 12 marks)



- 18 The contact process for the manufacture of sulfuric acid involves the oxidation of sulfur dioxide:



This reaction is usually carried out at 2 atm and 450°C.

- (a) Give the expression for the equilibrium constant,  $K_p$ , for this equilibrium.

(1)

- (b) A mixture containing 0.500 mol of sulfur dioxide, 0.100 mol of oxygen and 0.750 mol of sulfur trioxide is placed in a vessel at 2 atm and 500°C. At this temperature  $K_p = 2.50 \times 10^{10} \text{ atm}^{-1}$ .

- (i) Show by calculation that this system is **not** at equilibrium.

(3)

DO NOT WRITE IN THIS AREA

DO NOT WRITE IN THIS AREA

DO NOT WRITE IN THIS AREA

DO NOT WRITE IN THIS AREA

DO NOT WRITE IN THIS AREA

DO NOT WRITE IN THIS AREA



(ii) Explain, using your answer to (b)(i), the direction that the system would move to reach equilibrium.

(2)

.....

.....

.....

.....

.....

(iii) Explain, in terms of the entropy changes involved, why the equilibrium shifts to the right when the temperature is reduced from 500 °C to 450 °C. No calculation is required.

(2)

.....

.....

.....

.....

.....

(c) Suggest **two** reasons why the contact process equilibrium is operated at just 2 atm although equilibrium yield increases at higher pressure.

(2)

.....

.....

.....

.....

.....

.....

.....

.....

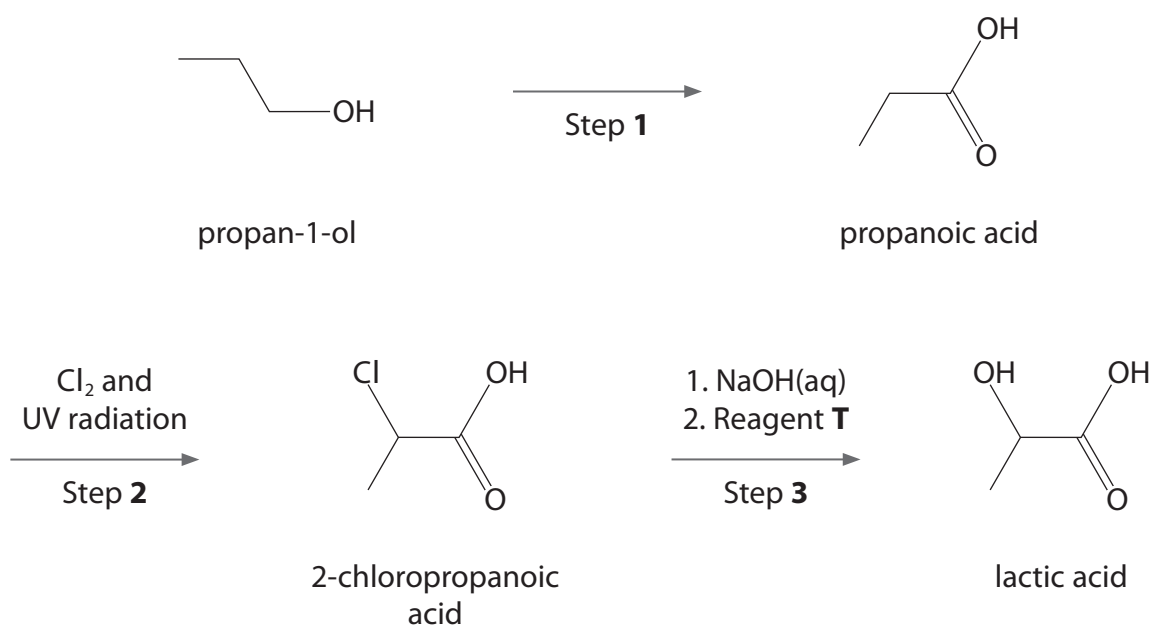
.....

.....

(Total for Question 18 = 10 marks)



19 Lactic acid (2-hydroxypropanoic acid) can be synthesised from propan-1-ol in the following sequence.



(a) (i) **Name** the reagents and state the conditions required for Step 1.

(2)

.....

.....

(ii) Suggest the type and mechanism of the reaction in Step 2.

(2)

.....

.....

(iii) Suggest why Step 2 is likely to give a low yield of 2-chloropropanoic acid.

(1)

.....

.....

.....

.....

DO NOT WRITE IN THIS AREA

DO NOT WRITE IN THIS AREA

DO NOT WRITE IN THIS AREA

DO NOT WRITE IN THIS AREA

DO NOT WRITE IN THIS AREA

DO NOT WRITE IN THIS AREA





(iv) Identify reagent **T** in Step **3** and explain why it is needed.

(2)

.....

.....

.....

.....

(b) The reaction of 2-chloropropanoic acid with NaOH(aq) in Step **3** is a nucleophilic substitution which occurs by a mixture of  $S_N1$  and  $S_N2$  mechanisms.

(i) Give the  $S_N2$  mechanism for this reaction, showing the relevant curly arrows and lone pairs.

(4)



P 5 0 7 8 8 A 0 1 7 2 8

- (ii) Some halogenoalkanes react with alkali entirely by an  $S_N1$  mechanism while others react entirely by an  $S_N2$  mechanism.  
Give the rate equations for these two mechanisms, using RCl for the halogenoalkanes.  
Explain why the rate equations are different.  
You are not required to draw any further mechanisms.

(3)

.....

.....

.....

.....

.....

.....

- (c) 2-chloropropanoic acid and lactic acid both exist as optical isomers.

- (i) State the property associated with optical isomerism.

(1)

.....

.....

- (ii) State the structural relationship between a pair of optical isomers, and use a labelled diagram to identify the structural feature that results in optical isomerism in **one** of these compounds.

(2)

.....

.....

.....

.....

DO NOT WRITE IN THIS AREA

DO NOT WRITE IN THIS AREA

DO NOT WRITE IN THIS AREA

DO NOT WRITE IN THIS AREA

DO NOT WRITE IN THIS AREA

DO NOT WRITE IN THIS AREA



\*(iii) A single optical isomer of 2-chloropropanoic acid reacts with sodium hydroxide in an  $S_N2$  reaction. State and explain, in terms of this mechanism, the stereoisomerism of the lactic acid formed.

(3)

.....

.....

.....

.....

.....

.....

.....

.....

.....

.....

(d) Describe how the infrared spectra of propan-1-ol and lactic acid will be similar and how they will differ. Quote values from your Data Booklet.

(2)

.....

.....

.....

.....

.....

.....

.....

.....

.....

.....

(Total for Question 19 = 22 marks)



**20** An aliphatic compound **Z** with five carbon atoms, gave an orange precipitate with 2,4-dinitrophenylhydrazine but **no reaction** when warmed with ammoniacal silver nitrate. In the mass spectrum of **Z** the molecular ion peak was at  $m/e = 86$ .

Draw the three possible structures of **Z**. Explain your reasoning.

(6)

.....

.....

.....

.....

.....

.....

.....

.....

.....

.....

.....

(Total for Question 20 = 6 marks)

**TOTAL FOR SECTION B = 50 MARKS**

DO NOT WRITE IN THIS AREA

DO NOT WRITE IN THIS AREA

DO NOT WRITE IN THIS AREA

DO NOT WRITE IN THIS AREA

DO NOT WRITE IN THIS AREA

DO NOT WRITE IN THIS AREA



## SECTION C

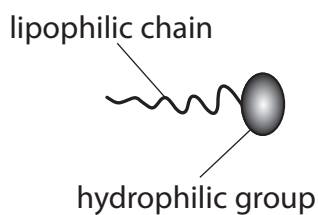
Answer ALL the questions. Write your answers in the spaces provided.

21

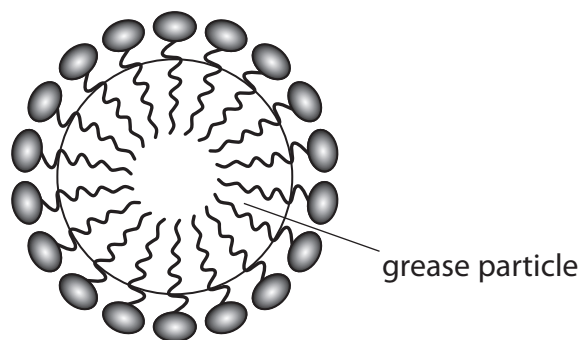
### Soaps and Detergents

Soaps and detergents are cleaning agents. Soaps are usually the sodium salt of a carboxylic acid with a very long carbon chain; they are made by treating naturally occurring fats and oils with sodium hydroxide. Sodium stearate,  $C_{17}H_{35}COO^-Na^+$ , is a typical soap. The use of soaps was first recorded 4500 years ago, but detergents were developed in Germany around 1916 when there was a shortage of the raw materials required for manufacturing soap. Modern detergents are manufactured from petrochemicals. The alkylbenzene sulfonate  $C_{18}H_{29}SO_3^-Na^+$  is a typical modern detergent.

Soaps and detergents clean because the long hydrocarbon chain is lipophilic ('fat-attracting') and the ionic end of the structure is hydrophilic ('water-attracting'). A fat or grease particle, which contains a long chain of carbon atoms, binds to the hydrocarbon chains of soap or detergent forming a tiny sphere, the surface of which is covered with hydrophilic groups making it water soluble. These spheres are called micelles.



soap or detergent



micelle



P 5 0 7 8 8 A 0 2 1 2 8

\*(a) Name and describe the forces that bind the lipophilic part of a soap or detergent to a grease particle.

(3)

.....

.....

.....

.....

.....

.....

.....

.....

(b) Identify the interaction between the hydrophilic part of the stearate ion and water. Draw a diagram to illustrate your answer.

(2)

.....

.....

DO NOT WRITE IN THIS AREA

DO NOT WRITE IN THIS AREA

DO NOT WRITE IN THIS AREA

DO NOT WRITE IN THIS AREA

DO NOT WRITE IN THIS AREA

DO NOT WRITE IN THIS AREA



(c) Chemically, stearic acid is a typical carboxylic acid, but it is only slightly soluble in water.

Data:  $pK_a = 4.89$ ; solubility in water =  $0.34 \text{ g dm}^{-3}$  at  $25^\circ\text{C}$

(i) Explain why stearic acid is only slightly soluble in water whereas ethanoic acid is fully miscible in water. A detailed description of the forces involved is **not** required.

(2)

.....

.....

.....

.....

.....

.....

(ii) Write the equation for the dissociation of stearic acid,  $\text{C}_{17}\text{H}_{35}\text{COOH}$ , in aqueous solution. Include state symbols.

(1)

(iii) Write the expression for  $K_a$  for stearic acid.

(1)



(iv) Calculate the concentration of a saturated solution of stearic acid at 25°C and hence calculate its pH.

(4)

DO NOT WRITE IN THIS AREA

DO NOT WRITE IN THIS AREA

DO NOT WRITE IN THIS AREA

DO NOT WRITE IN THIS AREA

DO NOT WRITE IN THIS AREA

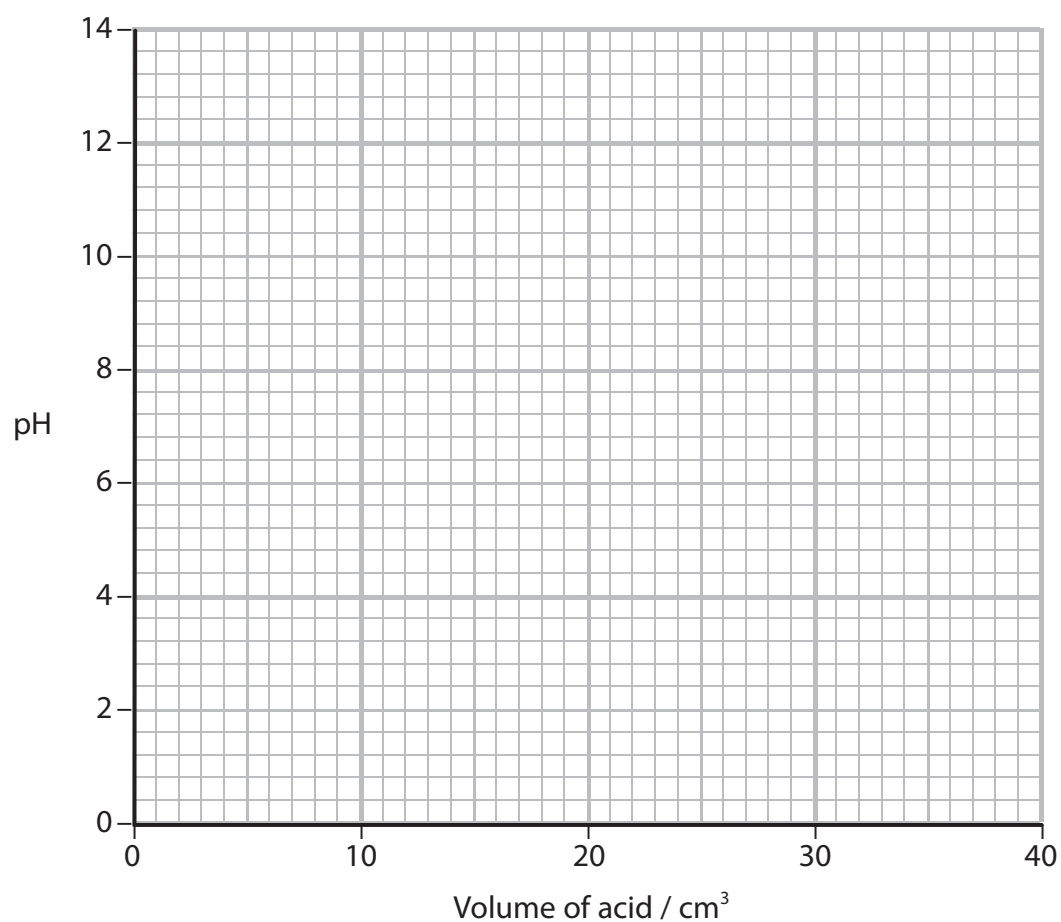
DO NOT WRITE IN THIS AREA





- (v) On the axes below, sketch the curve that you would expect when a saturated solution of stearic acid is added to 25 cm<sup>3</sup> of sodium hydroxide of the **same** molar concentration. Use  $K_w = 1.0 \times 10^{-14} \text{ mol}^2 \text{ dm}^{-6}$  to calculate the pH of the sodium hydroxide solution.

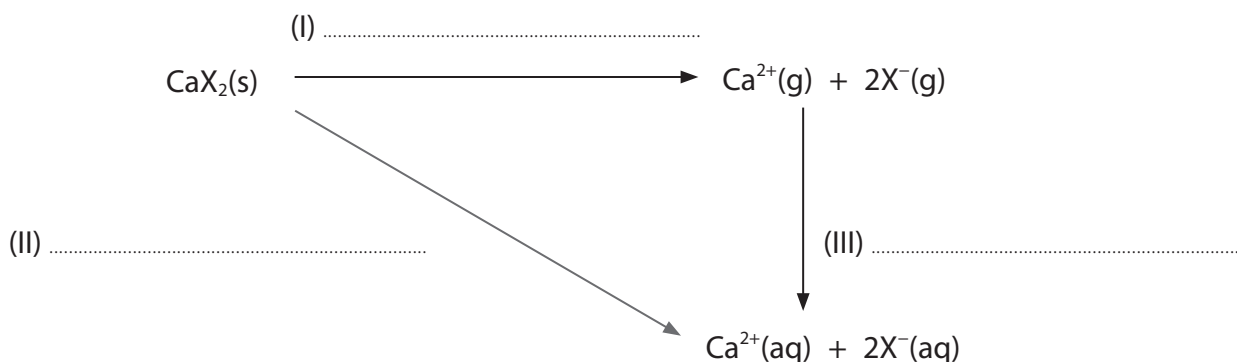
(3)



(d) One of the main advantages of detergents over soaps is that the calcium salts of alkylbenzene sulfonates are much more soluble in water than calcium stearate. When soaps are used in 'hard' water, which contains calcium ions, calcium stearate precipitates out as an insoluble 'scum'.

Complete the energy cycle below by inserting the names or symbols of the three energy changes, and then use the cycle to explain why calcium stearate is much less soluble than the calcium salt of an alkylbenzene sulfonate. No calculation is required.

(4)



.....

.....

.....

.....

.....

.....

.....

.....

.....

.....

.....

.....

.....

.....

.....

.....

.....

.....

.....

.....

.....

.....

.....

(Total for Question 21 = 20 marks)

TOTAL FOR SECTION C = 20 MARKS  
TOTAL FOR PAPER = 90 MARKS



DO NOT WRITE IN THIS AREA

DO NOT WRITE IN THIS AREA

DO NOT WRITE IN THIS AREA

DO NOT WRITE IN THIS AREA

DO NOT WRITE IN THIS AREA

DO NOT WRITE IN THIS AREA

DO NOT WRITE IN THIS AREA

DO NOT WRITE IN THIS AREA

DO NOT WRITE IN THIS AREA

DO NOT WRITE IN THIS AREA

**BLANK PAGE**



P 5 0 7 8 8 A 0 2 7 2 8

# The Periodic Table of Elements

	1	2	Key										0 (8)					
			(3)	(4)	(5)	(6)	(7)	(8)	(9)	(10)	(11)	(12)	(13)	(14)	(15)	(16)	(17)	(18)
			relative atomic mass															
			atomic symbol															
			name															
			atomic (proton) number															
6.9	Li	9.0	45.0	47.9	50.9	52.0	54.9	55.8	58.9	58.7	63.5	65.4	10.8	12.0	14.0	16.0	19.0	20.2
	lithium	beryllium	scandium	titanium	vanadium	chromium	manganese	iron	cobalt	nickel	copper	zinc	boron	carbon	nitrogen	oxygen	fluorine	neon
	3	4	21	22	23	24	25	26	27	28	29	30	5	6	7	8	9	10
23.0	Na	24.3	88.9	91.2	92.9	95.9	[98]	101.1	102.9	106.4	107.9	112.4	27.0	28.1	31.0	32.1	35.5	39.9
	sodium	magnesium	yttrium	zirconium	niobium	molybdenum	technetium	ruthenium	rhodium	palladium	silver	cadmium	aluminium	silicon	phosphorus	sulfur	chlorine	argon
	11	12	39	40	41	42	43	44	45	46	47	48	13	14	15	16	17	18
39.1	K	40.1	88.9	91.2	92.9	95.9	[98]	101.1	102.9	106.4	107.9	112.4	69.7	72.6	74.9	79.0	79.9	83.8
	potassium	calcium	yttrium	zirconium	niobium	molybdenum	technetium	ruthenium	rhodium	palladium	silver	cadmium	gallium	germanium	arsenic	selenium	bromine	krypton
	19	20	39	40	41	42	43	44	45	46	47	48	31	32	33	34	35	36
85.5	Rb	87.6	88.9	91.2	92.9	95.9	[98]	101.1	102.9	106.4	107.9	112.4	114.8	118.7	121.8	127.6	126.9	131.3
	rubidium	strontium	yttrium	zirconium	niobium	molybdenum	technetium	ruthenium	rhodium	palladium	silver	cadmium	indium	tin	antimony	tellurium	iodine	xenon
	37	38	39	40	41	42	43	44	45	46	47	48	49	50	51	52	53	54
132.9	Cs	137.3	138.9	178.5	180.9	183.8	186.2	190.2	192.2	195.1	197.0	200.6	204.4	207.2	209.0	[209]	[210]	[222]
	caesium	barium	lanthanum	hafnium	tantalum	tungsten	rhenium	osmium	iridium	platinum	gold	mercury	thallium	lead	bismuth	polonium	astatine	radon
	55	56	57	72	73	74	75	76	77	78	79	80	81	82	83	84	85	86
[223]	Fr	[226]	[227]	[261]	[262]	[266]	[264]	[277]	[268]	[271]	[272]							
	francium	radium	actinium	rutherfordium	dubnium	seaborgium	bohrium	hassium	meitnerium	darmstadtium	roentgenium							
	87	88	89	104	105	106	107	108	109	110	111							

140	Ce	141	144	150	152	157	163	165	167	169	173	175
	cerium	praseodymium	neodymium	samarium	europium	gadolinium	dysprosium	holmium	erbium	thulium	ytterbium	lutetium
	58	59	60	62	63	64	66	67	68	69	70	71
232	Th	[231]	238	[242]	[243]	[247]	[251]	[254]	[253]	[256]	[254]	[257]
	thorium	protactinium	uranium	plutonium	americium	curium	californium	fermium	nobelium	mendeleevium	lawrencium	
	90	91	92	94	95	96	98	100	102	101	102	103

Elements with atomic numbers 112-116 have been reported but not fully authenticated

\* Lanthanide series  
\* Actinide series

DO NOT WRITE IN THIS AREA

DO NOT WRITE IN THIS AREA

DO NOT WRITE IN THIS AREA

