

Write your name here

Surname

Other names

Centre Number

Candidate Number

Edexcel GCE

Physics

Advanced

Unit 5: Physics from Creation to Collapse

Wednesday 23 January 2013 – Afternoon

Time: 1 hour 35 minutes

Paper Reference

6PH05/01

You must have:

Ruler

Total Marks

Instructions

- Use **black** ink or ball-point pen.
- **Fill in the boxes** at the top of this page with your name, centre number and candidate number.
- Answer **all** questions.
- Answer the questions in the spaces provided
– *there may be more space than you need.*

Information

- The total mark for this paper is 80.
- The marks for **each** question are shown in brackets
– *use this as a guide as to how much time to spend on each question.*
- Questions labelled with an **asterisk** (*) are ones where the quality of your written communication will be assessed
– *you should take particular care with your spelling, punctuation and grammar, as well as the clarity of expression, on these questions.*
- The list of data, formulae and relationships is printed at the end of this booklet.
- Candidates may use a scientific calculator.

Advice

- Read each question carefully before you start to answer it.
- Keep an eye on the time.
- Try to answer every question.
- Check your answers if you have time at the end.

Turn over ►

P41630A

©2013 Pearson Education Ltd.

1/1/1/1/



PEARSON

SECTION A

Answer ALL questions.

For questions 1–10, in Section A, select one answer from A to D and put a cross in the box . If you change your mind, put a line through the box and then mark your new answer with a cross .

- 1 The ionising properties of radiations determine their penetrating power.

Which of the following statements is correct?

- A α -particles are not very ionising so they are stopped by thin paper.
- B α -particles are very ionising so can only travel a few centimetres in air.
- C γ -radiation is very penetrating because it is very ionising.
- D γ -radiation is not very penetrating because it is very ionising.

(Total for Question 1 = 1 mark)

- 2 A small satellite has a weight of 1200 N at the Earth's surface. It is launched into a circular orbit with radius equal to twice the radius of the Earth. The weight of the satellite in this orbit is

- A 0 N
- B 300 N
- C 600 N
- D 1200 N

(Total for Question 2 = 1 mark)

- 3 A number of conditions must be met if the fusion of hydrogen nuclei is to occur. Which condition, in a sample of hydrogen, is **not** necessary for nuclear fusion to occur?

- A very high density
- B very high mass
- C very high pressure
- D very high temperature

(Total for Question 3 = 1 mark)



- 4 New buildings in earthquake zones are often designed to be earthquake resistant. Such buildings incorporate mechanisms to reduce the transfer of kinetic energy from the ground to the building.

Which of the following would be the most important property of a material used in such a mechanism?

- A density
- B ductility
- C stiffness
- D strength

(Total for Question 4 = 1 mark)

- 5 The molecules in a material may possess kinetic energy E_k and potential energy E_p .

The internal energy is equal to

- A ΣE_k
- B $\Sigma E_k - \Sigma E_p$
- C $\Sigma E_k + \Sigma E_p$
- D ΣE_p

(Total for Question 5 = 1 mark)

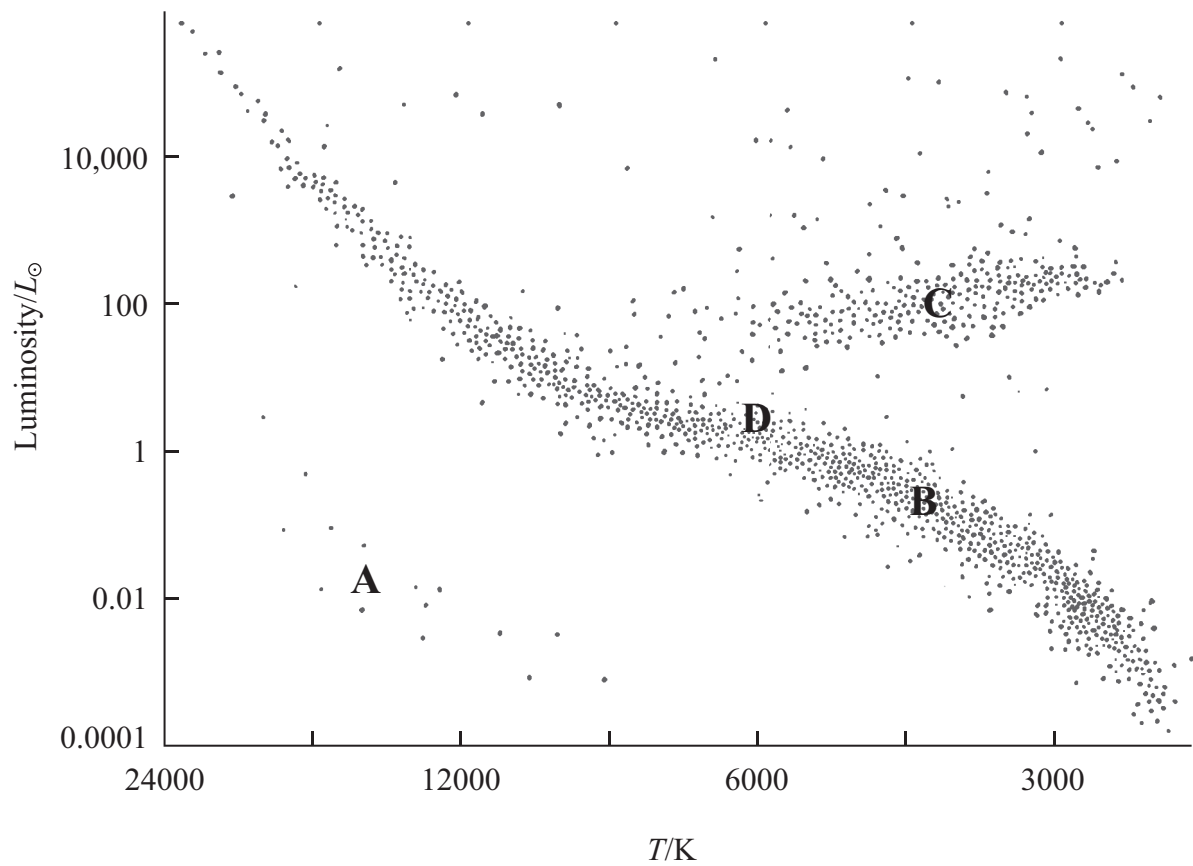
- 6 Radioactive decay is sometimes described as being spontaneous. In this context spontaneous means

- A nothing can influence the decay.
- B the decay is random.
- C the decay can be predicted.
- D the decay is exponential.

(Total for Question 6 = 1 mark)



Questions 7 and 8 refer to the Hertzsprung-Russell diagram below.



7 Which letter A, B, C or D represents the region on the diagram where a white dwarf star would be shown?

- A
- B
- C
- D

(Total for Question 7 = 1 mark)

8 Which letter A, B, C or D represents the region on the diagram where our Sun would be shown?

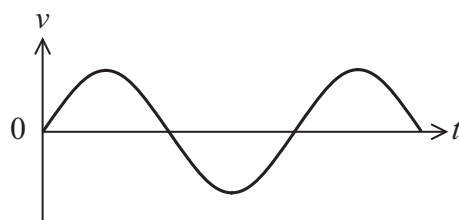
- A
- B
- C
- D

(Total for Question 8 = 1 mark)

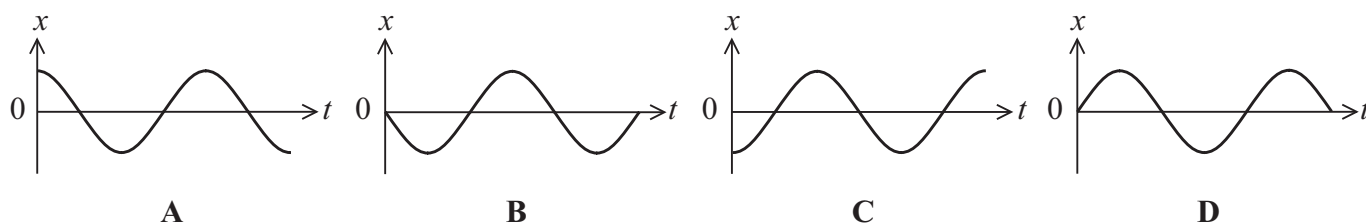


Questions 9 and 10 refer to the diagram below.

The graph below shows how the velocity varies with time for an object undergoing simple harmonic motion.



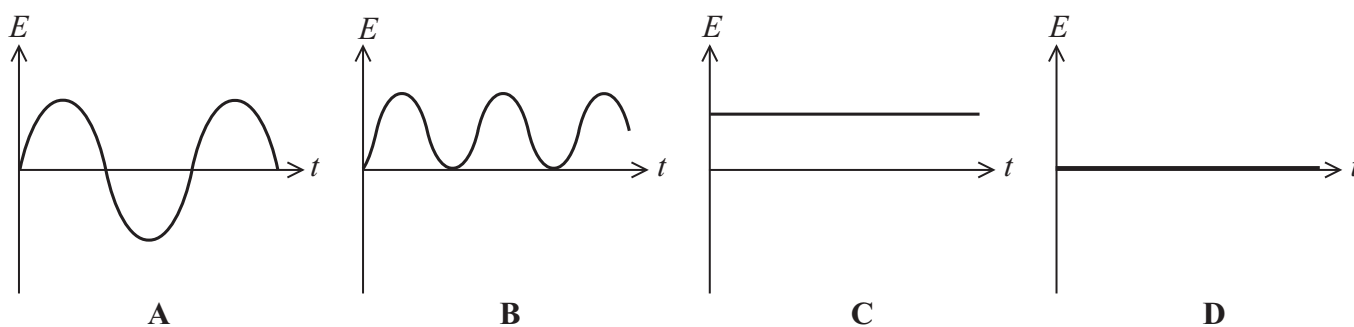
9 Which graph shows the variation of displacement with time?



- A
- B
- C
- D

(Total for Question 9 = 1 mark)

10 Which graph shows the variation of total energy with time?



- A
- B
- C
- D

(Total for Question 10 = 1 mark)

TOTAL FOR SECTION A = 10 MARKS



SECTION B

Answer ALL questions in the spaces provided.

11 A student carries out an experiment to investigate how the volume occupied by a gas depends upon the temperature.

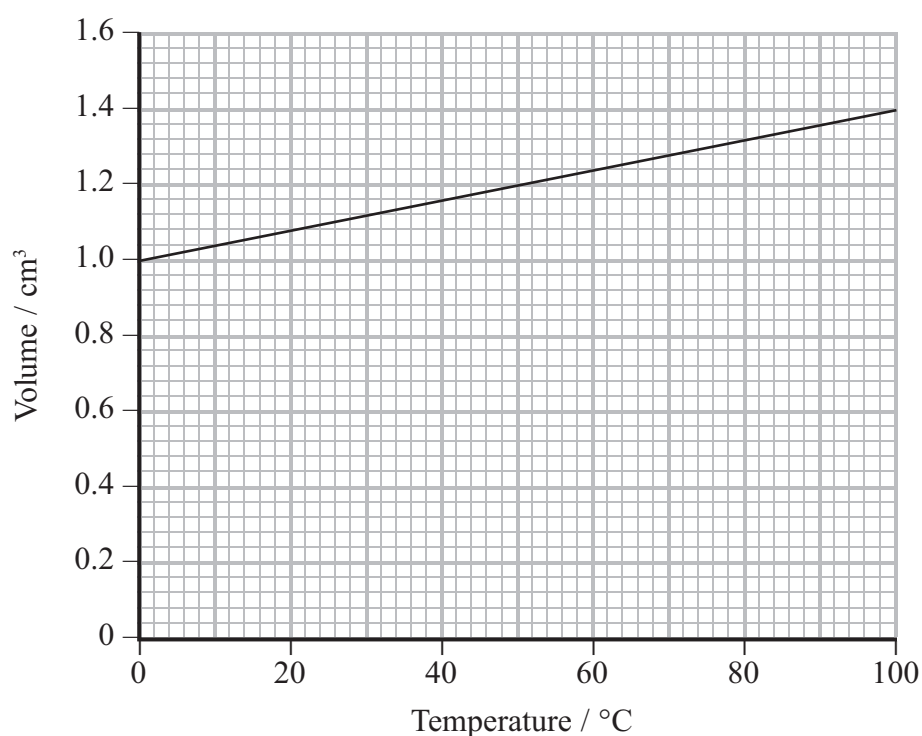
(a) What variables must the student control in this investigation?

(2)

.....

.....

(b) The following graph is obtained.



Explain how graphs such as this provide evidence for an absolute zero of temperature.

(2)

.....

.....

.....

.....

.....

(Total for Question 11 = 4 marks)



12 All living organisms contain ^{12}C and radioactive ^{14}C . The concentration of ^{14}C in the organism is maintained whilst the organism is alive, but starts to fall once death has occurred.

- (a) The count rate obtained from wood from an old Viking ship is 14.7 min^{-1} per gram of wood, after being corrected for background radiation. The corrected count rate from similar living wood is 16.5 min^{-1} per gram of wood.

Calculate the age of the ship in years.

^{14}C has a half life of 5700 years.

(4)

.....

.....

.....

.....

.....

.....

.....

.....

.....

.....

.....

Age of ship = years

- (b) The concentration of ^{14}C in living organisms might have been greater in the past.

Explain how this would affect the age that you have calculated.

(2)

.....

.....

.....

.....

.....

.....

.....

.....

.....

.....

(Total for Question 12 = 6 marks)



13 Betelgeuse is our nearest red giant. It has a luminosity of 4.49×10^{31} W and emits radiation with a peak energy emission occurring at a wavelength of 850 nm.

Show that Betelgeuse has a surface temperature of about 3000 K. Hence calculate the ratio of the radius of Betelgeuse, r_B to the radius of the Sun, r_S .

$$r_S = 6.95 \times 10^8 \text{ m}$$

(5)

$$r_B/r_S = \dots\dots\dots$$

(Total for Question 13 = 5 marks)



***14** Cepheid variable stars have long been seen as examples of standard candles. Recent measurements have indicated that the movement of the star through interstellar material might result in the formation of a layer of dust around the star. This affects how bright the star appears.

Explain how standard candles are used in astronomy, and suggest how the existence of a layer of dust around a Cepheid variable star might affect the conclusions drawn by astronomers.

(6)

.....

.....

.....

.....

.....

.....

.....

.....

.....

.....

.....

.....

.....

.....

.....

.....

.....

.....

.....

.....


.....

.....

(Total for Question 14 = 6 marks)



- 15 A garden ornament consists of a plastic dragonfly mounted on a stick. The dragonfly's wings are attached to the body with springs, and they flutter up and down in a gentle breeze.



- (a) When the air is not moving and the wings are displaced through a small vertical distance, they oscillate. The time for 10 oscillations is recorded. This is repeated twice more.

Time / s		
t_1	t_2	t_3
6.2	6.6	6.9

- (i) Calculate the frequency of oscillation of the wings.

(3)

.....

.....

.....

.....

.....

.....

.....

Frequency =



(ii) The oscillation of the wings is thought to be simple harmonic motion.

State the conditions required for the oscillations to be simple harmonic.

(2)

.....

.....

.....

.....

(b) The amplitude of the wings' oscillation dies down after only a small number of oscillations.

Explain why this happens.

(2)

.....

.....

.....

.....

(c) In certain breezy conditions the wings are seen to oscillate with a very large amplitude.

Name this effect and state the condition for it to occur.

(2)

.....

.....

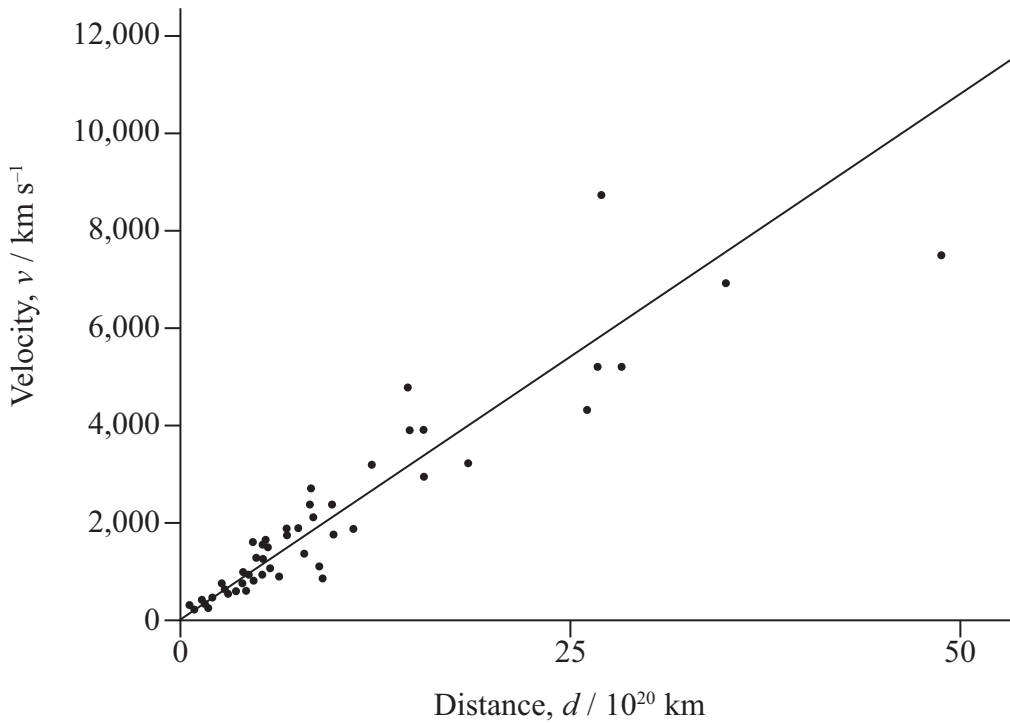
.....

.....

(Total for Question 15 = 9 marks)



16 The graph shows how the velocity varies with distance for a number of distant galaxies. All the galaxies are receding from Earth, and there appears to be a linear relationship between the velocity of recession and the distance to the galaxy.



(a) Use the graph to estimate an age for the Universe.

(4)

.....

.....

.....

.....

.....

.....

.....

.....

.....

.....

Age of the Universe =



* (b) Describe how astronomers would have determined the velocity of each galaxy.

(5)

.....

.....

.....

.....

.....

.....

.....

.....

.....

.....

.....

* (c) Scientists are uncertain about the ultimate fate of the Universe.

Explain why.

(3)

.....

.....

.....

.....

.....

.....

.....

.....

.....

.....

.....

(Total for Question 16 = 12 marks)



BLANK PAGE



17 Communications satellites were first proposed in 1945 by the science fiction author Arthur C. Clarke. In an article published in the magazine Wireless World he asked whether rocket stations could give worldwide radio coverage.

In the article Clarke states:

“There are an infinite number of possible stable orbits, circular and elliptical, in which a rocket would remain if the initial conditions were correct. A velocity of 8 km s^{-1} applies only to the closest possible orbit, one just outside the atmosphere, and the period of revolution would be about 90 minutes. As the radius of the orbit increases the velocity decreases, since gravity is diminishing and less centrifugal force is needed to balance it.”

with permission of Electronics World www.electronicsworld.co.uk

(a) State what is meant in the article by the phrase “gravity is diminishing”, and criticise the statement that “less centrifugal force is needed to balance (the satellite)”.

(3)

.....

.....

.....

.....

.....

.....

.....

.....

.....

.....

.....

.....

.....

.....

.....

.....

.....

.....

.....

.....

.....

.....

.....



(b) (i) By deriving an appropriate equation, show that the orbital speed of the satellite decreases as the radius of orbit increases.

(3)

.....

.....

.....

.....

.....

(ii) By deriving an appropriate equation, show that the orbital period of a satellite increases as the orbital speed decreases.

(2)

.....

.....

.....

.....

.....

(c) The period T of a satellite in a circular orbit is given by the equation

$$T = \sqrt{\frac{4\pi^2 r^3}{GM}}$$

where r is the radius of orbit and M is the mass of the Earth.

Calculate the period of a satellite in an orbit 4.0×10^5 m above the surface of the Earth.

mass of the Earth = 5.98×10^{24} kg

radius of the Earth = 6.36×10^6 m

(2)

.....

.....

.....

.....

Period of satellite =



(d) After a time the radius of the satellite's orbit will start to decrease due to the resistive forces acting on the satellite from the atmosphere. As this happens the satellite speeds up.

Describe the energy changes occurring as the radius of the orbit decreases.

(2)

.....

.....

.....

.....

.....

.....

.....

.....

.....

(Total for Question 17 = 12 marks)



18 Electrical power generated by nuclear fission makes an important contribution to world energy needs. However Rutherford, who is credited with the discovery and first splitting of the nuclear atom, later said:


“The energy produced by the breaking down of the atom is a very poor kind of thing. Anyone who expects a source of power from the transformation of these atoms is talking moonshine.”

© quotationsbook.com (<http://quotationsbook.com/quote/12426/>)

Rutherford carried out experiments that involved firing alpha particles at nitrogen atoms.

(a) (i) Complete the equation for the interaction between nitrogen and alpha particles.

(1)



(ii) This interaction requires a small energy input. Other similar nuclear reactions may give an energy output of no more than 20 MeV, giving some justification to Rutherford’s statement. Suggest why Rutherford’s statement eventually turned out to be very inaccurate.

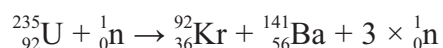
(1)

.....

.....

.....

(b) Uranium-235 is able to undergo fission when it absorbs a neutron to become uranium-236. The equation below shows a possible fission reaction.



Use the data in the table to show that the energy released by the fission of one uranium nucleus is about 170 MeV.

Isotope	Mass / 10^{-27} kg
${}^{235}\text{U}$	390.29989
${}^{141}\text{Ba}$	233.99404
${}^{92}\text{Kr}$	152.64708
${}^1_0\text{n}$	1.67493

(4)



.....

.....

.....

.....

.....

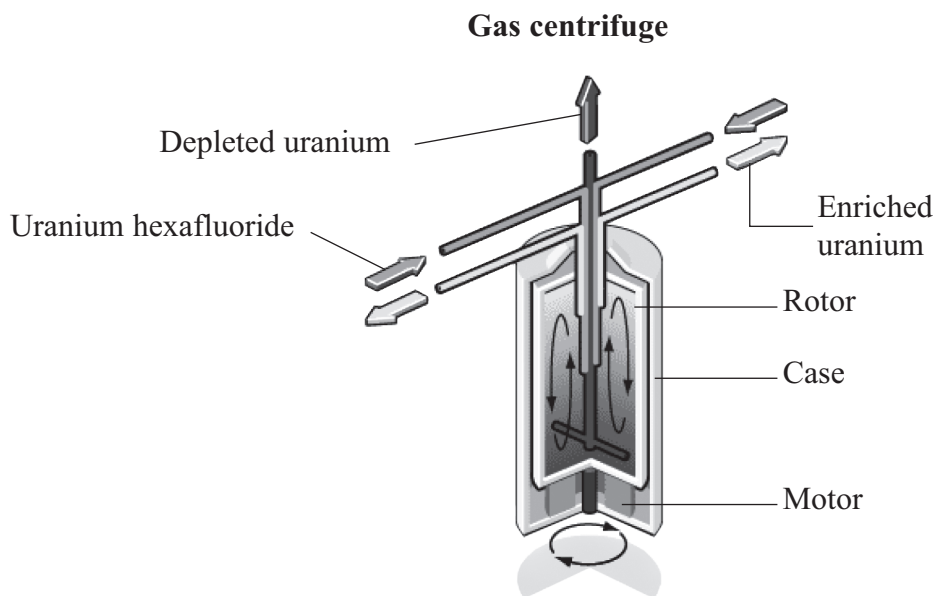
.....

.....

.....

(c) Naturally occurring uranium is more than 99% uranium-238. Fuel for a fission reactor requires at least 3% of the uranium to be uranium-235.

Uranium hexafluoride gas is used during the uranium enrichment process. It is fed into a centrifuge, and a rotating cylinder (rotor) sends the uranium-238 to the outside of the cylinder, where it can be drawn off, while the uranium-235 diffuses to the centre of the cylinder.



(i) Give **one** similarity and **one** difference between the nuclei of uranium-238 and uranium-235.

(2)

Similarity

Difference



- (ii) The rotor has a diameter of 30 cm and spins at a rate of 60,000 revolutions per minute.

Calculate the centripetal acceleration at the rim of the rotor.

(2)

.....

.....

.....

.....

Centripetal acceleration =

- (iii) The rotor is subjected to huge forces because of the high spin rate.

Give **two** mechanical properties essential for the material from which the rotor is made.

(2)

Property 1

Property 2

- (d) The waste heat from some power stations is transferred to water.

The San Onofre Nuclear Generating Station in California has reactors with a total output power of 2200 MW. These reactors circulate sea water at an average mass flow rate of $7.0 \times 10^4 \text{ kg s}^{-1}$. The water is heated to approximately 11 K above the input temperature as it flows through condensers, before being discharged back into the ocean.



Show that the rate at which energy is removed from the reactors is about 3000 MW, and hence estimate a value for the efficiency of the electrical power generation process.

specific heat capacity of the sea water = $3990 \text{ J kg}^{-1} \text{ K}^{-1}$

(4)

Efficiency =

(Total for Question 18 = 16 marks)

TOTAL FOR SECTION B = 70 MARKS

TOTAL FOR PAPER = 80 MARKS



List of data, formulae and relationships

Acceleration of free fall	$g = 9.81 \text{ m s}^{-2}$	(close to Earth's surface)
Boltzmann constant	$k = 1.38 \times 10^{-23} \text{ J K}^{-1}$	
Coulomb's law constant	$k = 1/4\pi\epsilon_0$ $= 8.99 \times 10^9 \text{ N m}^2 \text{ C}^{-2}$	
Electron charge	$e = -1.60 \times 10^{-19} \text{ C}$	
Electron mass	$m_e = 9.11 \times 10^{-31} \text{ kg}$	
Electronvolt	$1 \text{ eV} = 1.60 \times 10^{-19} \text{ J}$	
Gravitational constant	$G = 6.67 \times 10^{-11} \text{ N m}^2 \text{ kg}^{-2}$	
Gravitational field strength	$g = 9.81 \text{ N kg}^{-1}$	(close to Earth's surface)
Permittivity of free space	$\epsilon_0 = 8.85 \times 10^{-12} \text{ F m}^{-1}$	
Planck constant	$h = 6.63 \times 10^{-34} \text{ J s}$	
Proton mass	$m_p = 1.67 \times 10^{-27} \text{ kg}$	
Speed of light in a vacuum	$c = 3.00 \times 10^8 \text{ m s}^{-1}$	
Stefan-Boltzmann constant	$\sigma = 5.67 \times 10^{-8} \text{ W m}^{-2} \text{ K}^{-4}$	
Unified atomic mass unit	$u = 1.66 \times 10^{-27} \text{ kg}$	

Unit 1

Mechanics

Kinematic equations of motion	$v = u + at$ $s = ut + \frac{1}{2}at^2$ $v^2 = u^2 + 2as$
Forces	$\Sigma F = ma$ $g = F/m$ $W = mg$
Work and energy	$\Delta W = F\Delta s$ $E_k = \frac{1}{2}mv^2$ $\Delta E_{\text{grav}} = mg\Delta h$

Materials

Stokes' law	$F = 6\pi\eta rv$
Hooke's law	$F = k\Delta x$
Density	$\rho = m/V$
Pressure	$p = F/A$
Young modulus	$E = \sigma/\epsilon$ where Stress $\sigma = F/A$ Strain $\epsilon = \Delta x/x$
Elastic strain energy	$E_{\text{el}} = \frac{1}{2}F\Delta x$



Unit 2

Waves

Wave speed $v = f\lambda$

Refractive index ${}_1\mu_2 = \sin i / \sin r = v_1 / v_2$

Electricity

Potential difference $V = W/Q$

Resistance $R = V/I$

Electrical power, energy and efficiency
 $P = VI$
 $P = I^2R$
 $P = V^2/R$
 $W = VI t$

$$\% \text{ efficiency} = \frac{\text{useful energy output}}{\text{total energy input}} \times 100$$

$$\% \text{ efficiency} = \frac{\text{useful power output}}{\text{total power input}} \times 100$$

Resistivity $R = \rho l/A$

Current
 $I = \Delta Q / \Delta t$
 $I = nqvA$

Resistors in series $R = R_1 + R_2 + R_3$

Resistors in parallel $\frac{1}{R} = \frac{1}{R_1} + \frac{1}{R_2} + \frac{1}{R_3}$

Quantum physics

Photon model $E = hf$

Einstein's photoelectric equation
 $hf = \phi + \frac{1}{2}mv_{\max}^2$



Unit 4

Mechanics

Momentum	$p = mv$
Kinetic energy of a non-relativistic particle	$E_k = p^2/2m$
Motion in a circle	$v = \omega r$ $T = 2\pi/\omega$ $F = ma = mv^2/r$ $a = v^2/r$ $a = r\omega^2$

Fields

Coulomb's law	$F = kQ_1Q_2/r^2$ where $k = 1/4\pi\epsilon_0$
Electric field	$E = F/Q$ $E = kQ/r^2$ $E = V/d$
Capacitance	$C = Q/V$
Energy stored in capacitor	$W = \frac{1}{2}QV$
Capacitor discharge	$Q = Q_0 e^{-t/RC}$
In a magnetic field	$F = BIl \sin \theta$ $F = Bqv \sin \theta$ $r = p/BQ$
Faraday's and Lenz's Laws	$\epsilon = -d(N\phi)/dt$

Particle physics

Mass-energy	$\Delta E = c^2 \Delta m$
de Broglie wavelength	$\lambda = h/p$



Unit 5

Energy and matter

Heating $\Delta E = mc\Delta\theta$

Molecular kinetic theory $\frac{1}{2}m\langle c^2 \rangle = \frac{3}{2}kT$

Ideal gas equation $pV = NkT$

Nuclear Physics

Radioactive decay $dN/dt = -\lambda N$

$$\lambda = \ln 2/t_{1/2}$$

$$N = N_0 e^{-\lambda t}$$

Mechanics

Simple harmonic motion

$$a = -\omega^2 x$$
$$a = -A\omega^2 \cos \omega t$$
$$v = -A\omega \sin \omega t$$
$$x = A \cos \omega t$$
$$T = 1/f = 2\pi/\omega$$

Gravitational force $F = Gm_1 m_2 / r^2$

Observing the universe

Radiant energy flux $F = L/4\pi d^2$

Stefan-Boltzmann law

$$L = \sigma T^4 A$$
$$L = 4\pi r^2 \sigma T^4$$

Wien's Law $\lambda_{\max} T = 2.898 \times 10^{-3} \text{ m K}$

Redshift of electromagnetic radiation $z = \Delta\lambda/\lambda \approx \Delta f/f \approx v/c$

Cosmological expansion $v = H_0 d$



BLANK PAGE



BLANK PAGE



BLANK PAGE

